



Use a graph to add or subtract the complex numbers.

1. $(4 + 5i) - (12 + 9i)$



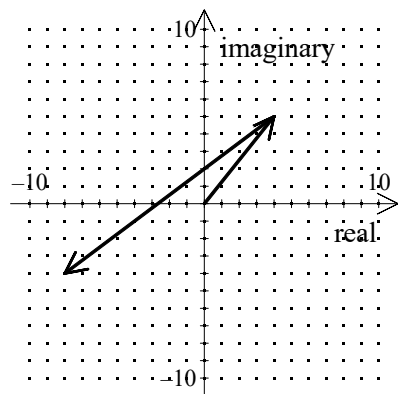
[1] _____

2. $(-3 + 5i) + (8 - 5i)$

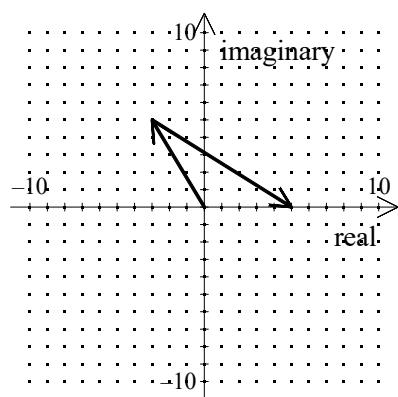


[2] _____

Precalculus Practice N.CN.B.5: Graphing Complex Numbers
www.jmap.org



[1] $-8 - 4i$ _____



[2] 5 _____