

**G.MG.A.3: Perimeter**

- 1 The second side of a triangle is two more than the first side, and the third side is three less than the first side. Which expression represents the perimeter of the triangle?

- 1)  $x + 5$
- 2)  $2x - 1$
- 3)  $3x - 1$
- 4)  $x^2 - x - 6$

- 2 What is the perimeter of a square whose diagonal is

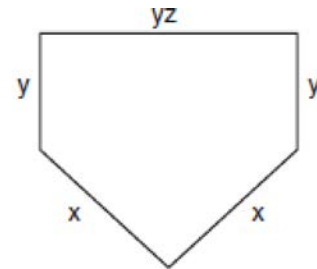
- $3\sqrt{2}$ ?
- 1) 18
  - 2) 12
  - 3) 9
  - 4) 6

- 3 The perimeter of a square is 56. Express the length of a diagonal of the square in simplest radical form.

- 4 What is the perimeter of a rhombus whose diagonals are 16 and 30?

- 1) 92
- 2) 68
- 3) 60
- 4) 17

- 5 The lengths of the sides of home plate in a baseball field are represented by the expressions in the accompanying figure.



Which expression represents the perimeter of the figure?

- 1)  $5xyz$
- 2)  $x^2 + y^3z$
- 3)  $2x + 3yz$
- 4)  $2x + 2y + yz$

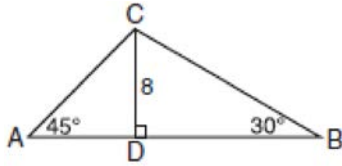
- 6 The Pentagon building in Washington, D.C., is shaped like a regular pentagon. If the length of one side of the Pentagon is represented by  $n + 2$ , its perimeter would be represented by

- 1)  $5n + 10$
- 2)  $5n + 2$
- 3)  $n + 10$
- 4)  $10n$

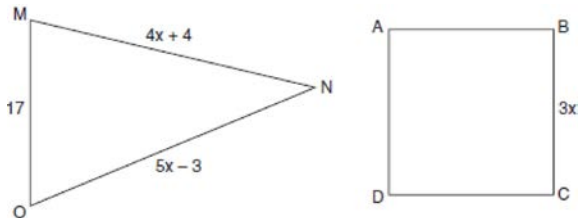
- 7 Pentagon  $ABCDE$  is similar to pentagon  $FGHIJ$ . The lengths of the sides of  $ABCDE$  are 8, 9, 10, 11, and 12. If the length of the longest side of pentagon  $FGHIJ$  is 18, what is the perimeter of pentagon  $FGHIJ$ ?

- 1) 50
- 2) 56
- 3) 75
- 4) 100

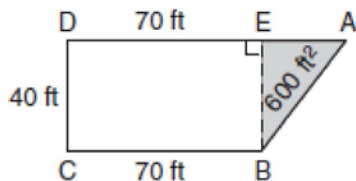
- 8 In the accompanying diagram,  $\overline{CD}$  is an altitude of  $\triangle ABC$ . If  $CD = 8$ ,  $m\angle A = 45^\circ$ , and  $m\angle B = 30^\circ$ , find the perimeter of  $\triangle ABC$  in simplest radical form.



- 9 In the accompanying diagram, the perimeter of  $\triangle MNO$  is equal to the perimeter of square  $ABCD$ . If the sides of the triangle are represented by  $4x + 4$ ,  $5x - 3$ , and 17, and one side of the square is represented by  $3x$ , find the length of a side of the square.



- 10 The plan of a parcel of land is represented by trapezoid  $ABCD$  in the accompanying diagram. If the area of  $\triangle ABE$  is 600 square feet, find the minimum number of feet of fence needed to completely enclose the entire parcel of land,  $ABCD$ .



- 11 Manuel plans to install a fence around the perimeter of his yard. His yard is shaped like a square and has an area of 40,000 square feet. The company that he hires charges \$2.50 per foot for the fencing and \$50.00 for the installation fee. What will be the cost of the fence, in dollars?
- 12 An engineer measured the dimensions for a rectangular site by using a wooden pole of unknown length  $x$ . The length of the rectangular site is 2 pole measures increased by 3 feet, while the width is 1 pole measure decreased by 4 feet. Write an algebraic representation, in terms of  $x$ , for the perimeter of the site.
- 13 Mr. James wanted to plant a garden that would be in the shape of a rectangle. He was given 80 feet of fencing to enclose his garden. He wants the length to be 10 feet more than twice the width. What are the dimensions, in feet, for a rectangular garden that will use exactly 80 feet of fencing?

**G.MG.A.3: Perimeter****Answer Section**

1 ANS: 3

First side:  $x$ Second side:  $x + 2$ .  $x + x + 2 + x - 3 = 3x - 1$ Third side:  $x - 3$ 

REF: 060611a

2 ANS: 2

$$s^2 + s^2 = (3\sqrt{2})^2$$

$$2s^2 = 18$$

$$s^2 = 9$$

$$s = 3$$

REF: 011420ge

3 ANS:

$14\sqrt{2}$ . The length of each side of the square is  $\frac{56}{4} = 14$ .  $c = \sqrt{14^2 + 14^2} = \sqrt{2 \times 14^2} = 14\sqrt{2}$

REF: 010736a

4 ANS: 2

$$\sqrt{8^2 + 15^2} = 17$$

REF: 061326ge

5 ANS: 4

REF: 010603a

6 ANS: 1

$$5(n + 2) = 5n + 10$$

REF: 089905a

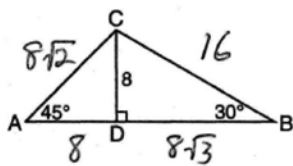
7 ANS: 3

The perimeter of  $ABCDE$  is 50 ( $8 + 9 + 10 + 11 + 12$ ).  $FGHIJ$  is 1.5 ( $\frac{18}{12}$ ) times larger than  $ABCDE$ .

$$50 \times 1.5 = 75$$

REF: 080814a

8 ANS:



$24 + 8\sqrt{2} + 8\sqrt{3}$ . Because  $\triangle CDA$  is an isosceles right triangle, the ratio of its hypotenuse to its legs is  $\sqrt{2}:1:1$ . Because  $\triangle CDB$  is a  $30^\circ$ - $60^\circ$ - $90^\circ$  triangle, the ratio of its hypotenuse to its legs is  $2:\sqrt{3}:1$ .  $24 + 8\sqrt{2} + 8\sqrt{3}$

REF: 060931b

9 ANS:

$$4x + 4 + 5x - 3 + 17 = 4(3x)$$

$$18. \quad 9x + 18 = 12x \quad . \quad s = 3x = 3(6) = 18$$

$$x = 6$$

REF: 080537a

10 ANS:

260. If  $CD = 40$ , then  $BE = 40$ , which is the base of the shaded triangle. To find the height, or the length of  $\overline{EA}$ ,

$600 = \frac{1}{2}40h$ .  $\triangle ABE$  is a multiple of the 3-4-5 triangle, with legs of 30 and 40 and a hypotenuse of 50.

$$h = 30$$

The perimeter of trapezoid ABCD is  $70 + 40 + 70 + 30 + 50 = 260$ .

REF: 060134a

11 ANS:

2,050. If the yard has an area of 40000 square feet, the length of one side of the square yard is 200 feet. The yard has a perimeter of 800 feet.  $800 \times 2.5 + 50 = \$2050$

REF: 080639a

12 ANS:

$$6x - 2. \quad (2x + 3) + (x - 4) + (2x + 3) + (x - 4)$$

$$6x - 2$$

REF: 080124a

13 ANS:

$$l + w + l + w = 80 \quad l = 2w + 10$$

$$10 \times 30. \quad (2w + 10) + w + (2w + 10) + w = 80 \quad l = 2(10) + 10$$

$$6w + 20 = 80 \quad l = 30$$

$$w = 10$$

REF: 060536a