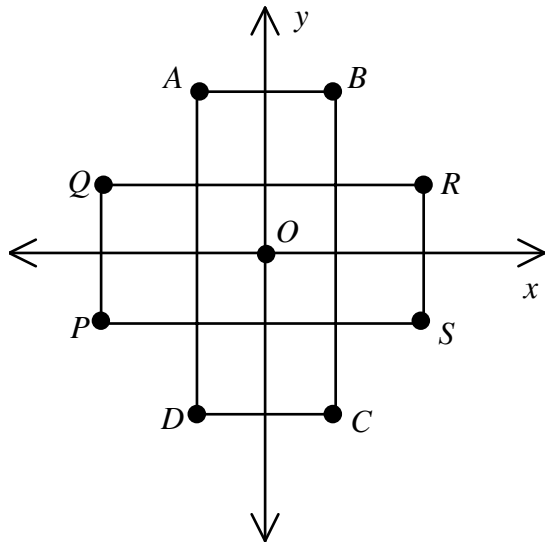


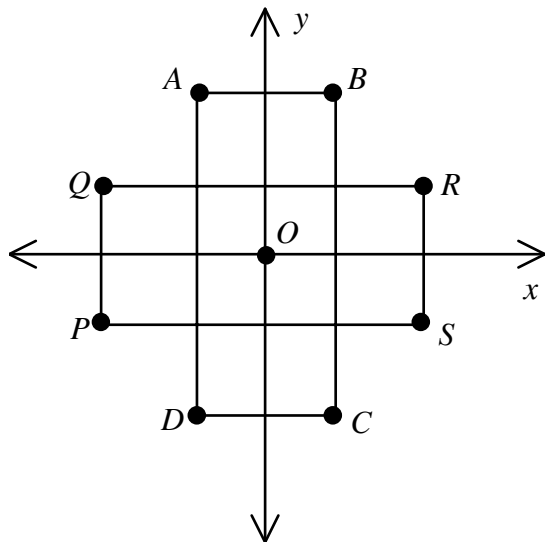
NAME: \_\_\_\_\_

1. Rectangle  $PQRS$  is rotated  $90^\circ$  clockwise about point  $O$ . Find the image of  $\overline{QR}$ .



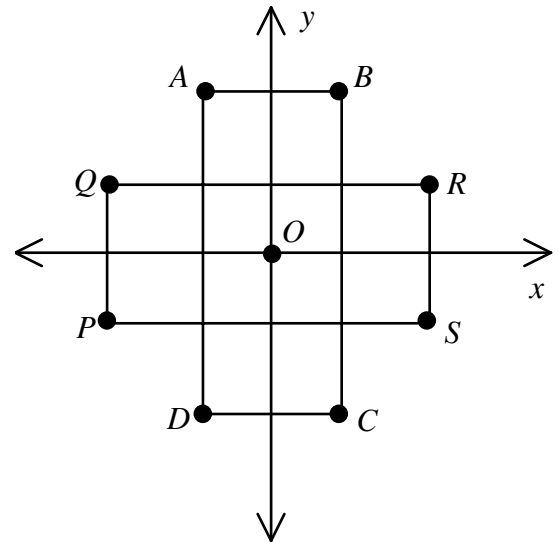
- [A]  $\overline{PS}$  [B]  $\overline{BC}$  [C]  $\overline{CD}$  [D]  $\overline{RS}$

2. Rectangle  $PQRS$  is rotated  $90^\circ$  clockwise about point  $O$ . Find the image of  $\overline{PQ}$ .



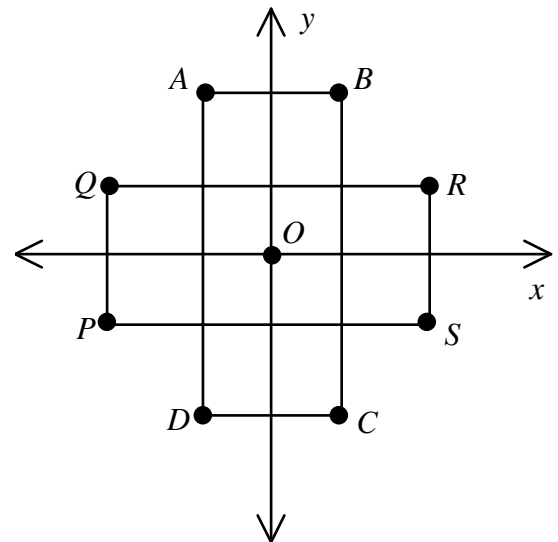
- [A]  $\overline{BC}$  [B]  $\overline{AB}$  [C]  $\overline{RS}$  [D]  $\overline{QR}$

3. Rectangle  $PQRS$  is rotated  $90^\circ$  clockwise about point  $O$ . Find the image of  $\overline{RS}$ .



- [A]  $\overline{AD}$  [B]  $\overline{PS}$  [C]  $\overline{CD}$  [D]  $\overline{PQ}$

4. Rectangle  $PQRS$  is rotated  $90^\circ$  clockwise about point  $O$ . Find the image of  $\overline{PS}$ .



- [A]  $\overline{PQ}$  [B]  $\overline{AB}$  [C]  $\overline{QR}$  [D]  $\overline{AD}$

[1] B

[2] B

[3] C

[4] D