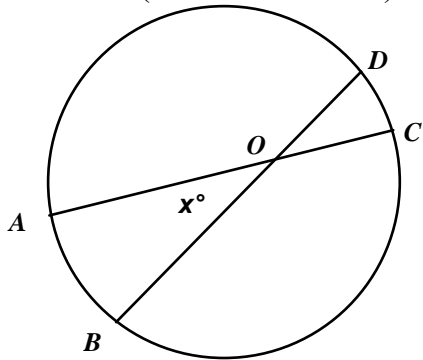
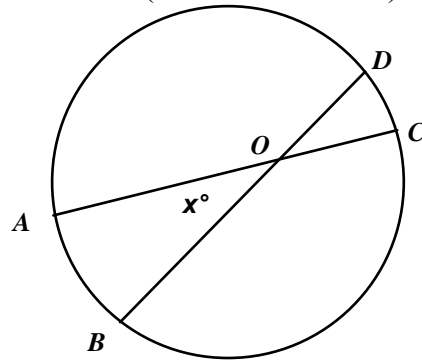


NAME: _____

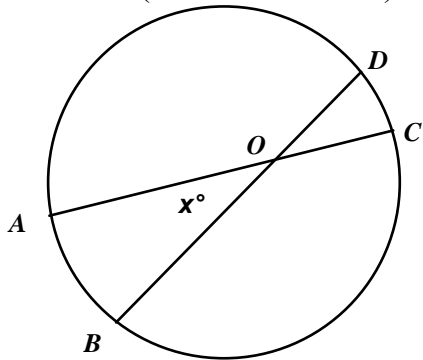
1. Find the value of x if $m\widehat{AB} = 44$ and $m\widehat{CD} = 53$ (not drawn to scale).



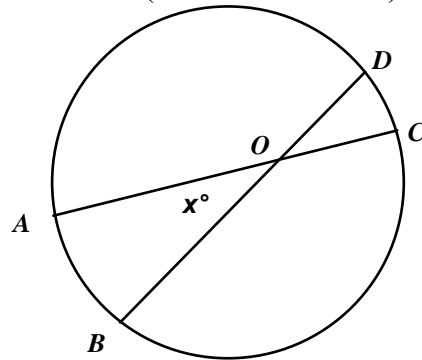
4. Find the value of x if $m\widehat{AB} = 62$ and $m\widehat{CD} = 56$ (not drawn to scale).



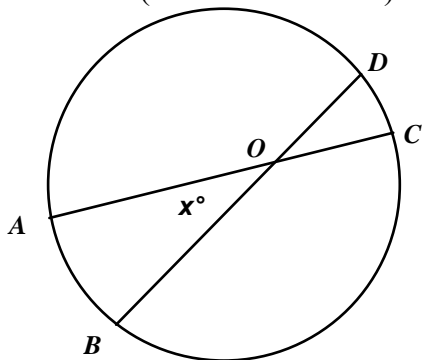
2. Find the value of x if $m\widehat{AB} = 59$ and $m\widehat{CD} = 20$ (not drawn to scale).



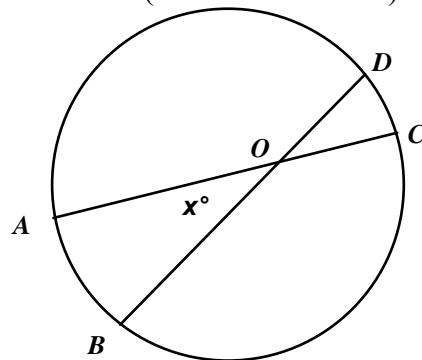
5. Find the value of x if $m\widehat{AB} = 65$ and $m\widehat{CD} = 29$ (not drawn to scale).



3. Find the value of x if $m\widehat{AB} = 50$ and $m\widehat{CD} = 35$ (not drawn to scale).



6. Find the value of x if $m\widehat{AB} = 26$ and $m\widehat{CD} = 53$ (not drawn to scale).



[1] 48.5

[2] 39.5

[3] 42.5

[4] 59

[5] 47

[6] 39.5