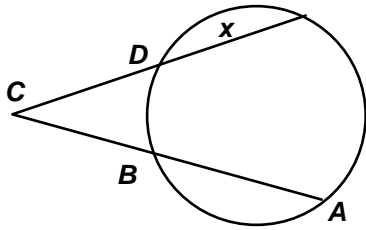


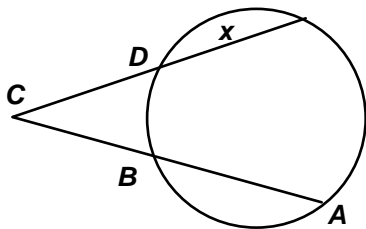
NAME: _____

1. Find the value of x if $AB = 17$, $BC = 10$, and $CD = 11$. (not drawn to scale)



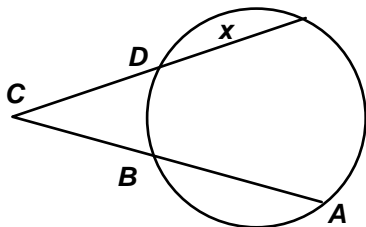
- [A] 10.4 [B] 15.1 [C] 15.8 [D] 13.5

2. Find the value of x if $AB = 20$, $BC = 8$, and $CD = 6$. (not drawn to scale)



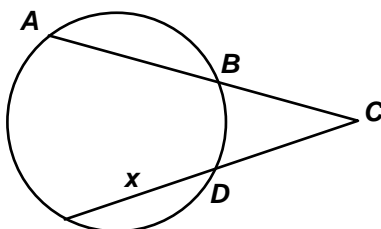
- [A] 33.6 [B] 32.9 [C] 31.3 [D] 28.2

3. Find the value of x if $AB = 16$, $BC = 11$, and $CD = 9$. (not drawn to scale)

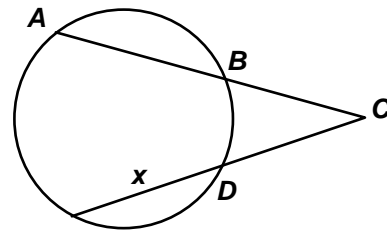


- [A] 26.3 [B] 25.6 [C] 24.0 [D] 20.9

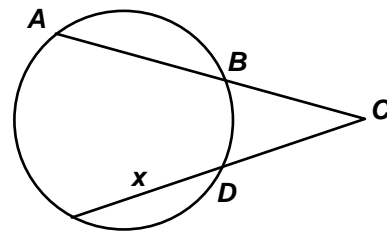
4. Find the value of x if $AB = 23$, $BC = 14$, and $CD = 13$. (not drawn to scale)



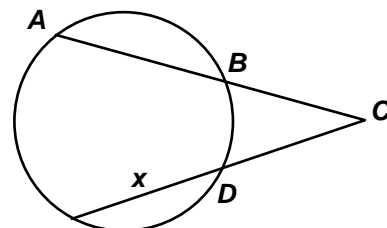
5. Find the value of x if $AB = 17$, $BC = 9$, and $CD = 10$. (not drawn to scale)



6. Find the value of x if $AB = 16$, $BC = 10$, and $CD = 8$. (not drawn to scale)



7. Find the value of x if $AB = 19$, $BC = 12$, and $CD = 14$. (not drawn to scale)



[1] D

[2] C

[3] C

[4] 26.8

[5] 13.4

[6] 24.5

[7] 12.6