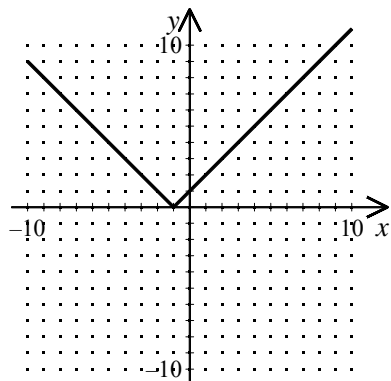
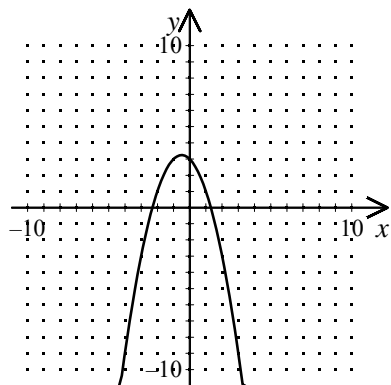


1. To what family of functions does the graph belong?



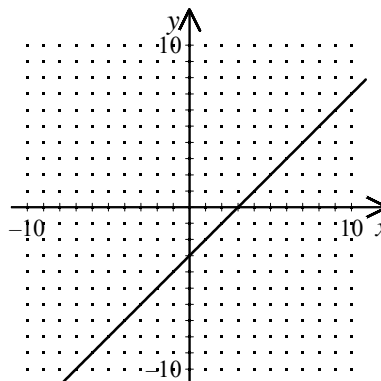
- [A] linear functions [B] not a function
 [C] absolute value functions
 [D] quadratic functions

2. To what family of functions does the graph belong?



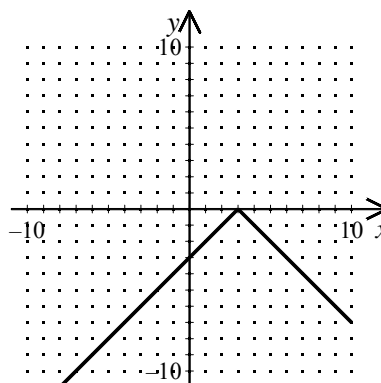
- [A] quadratic functions
 [B] not a function [C] linear functions
 [D] absolute value functions

3. To what family of functions does the graph belong?



- [A] quadratic functions
 [B] not a function
 [C] absolute value functions
 [D] linear functions

4. To what family of functions does the graph belong?



- [A] absolute value functions
 [B] not a function
 [C] linear functions [D] quadratic functions

Algebra I Practice F.LE.A.1: Families of Functions

www.jmap.org

[1] C

[2] A

[3] D

[4] A