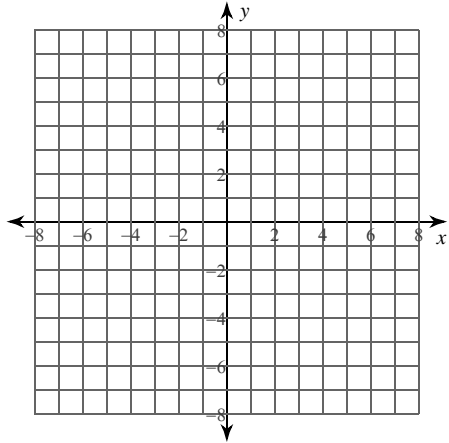


Calculus Practice: Using Definite Integrals to Calculate Volume 1a

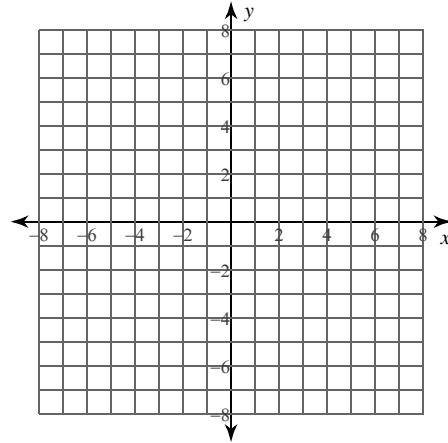
For each problem, find the volume of the solid that results when the region enclosed by the curves is revolved about the x -axis. You may use the provided graph to sketch the curves and shade the enclosed region.

1) $y = x^2$, $y = 0$, $x = 1$



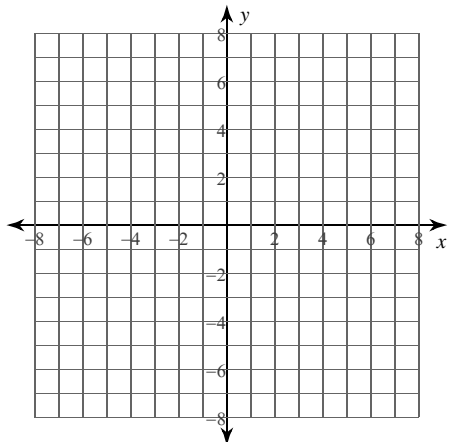
- A) $\frac{8}{15}\pi \approx 1.676$
- B) $\frac{11}{5}\pi \approx 6.912$
- C) $\frac{3}{5}\pi \approx 1.885$
- D) $\frac{1}{5}\pi \approx 0.628$

2) $y = -x^2 + 4$, $y = 0$



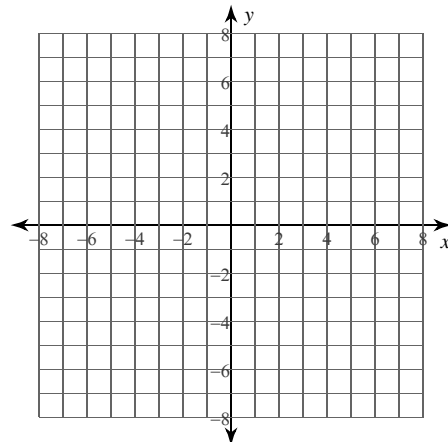
- A) $\frac{512}{15}\pi \approx 107.233$
- B) $\frac{542}{15}\pi \approx 113.516$
- C) $\frac{1009}{30}\pi \approx 105.662$
- D) $\frac{1024}{15}\pi \approx 214.466$

3) $y = 2\sqrt{x+6}$, $y = 0$, $x = -4$, $x = 2$



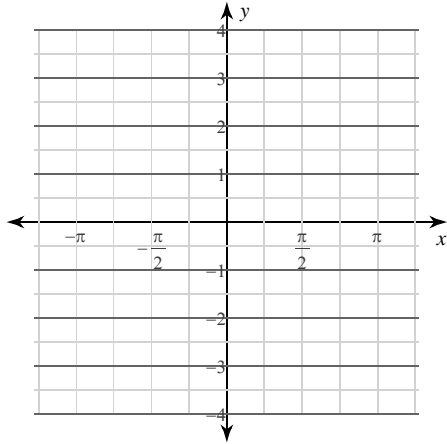
- A) $\frac{359}{3}\pi \approx 375.944$
- B) $\frac{361}{3}\pi \approx 378.038$
- C) $\frac{239}{2}\pi \approx 375.42$
- D) $120\pi \approx 376.991$

4) $y = \sqrt[3]{x}$, $y = 0$, $x = 1$



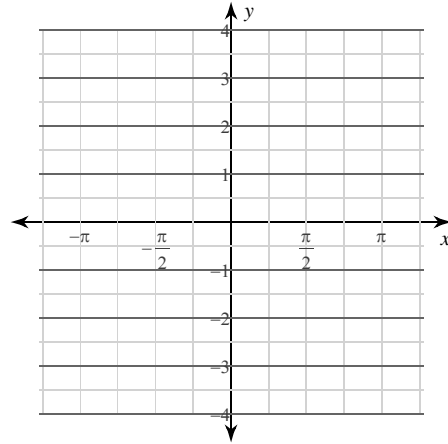
- A) $\frac{8}{5}\pi \approx 5.027$
- B) $\frac{2}{5}\pi \approx 1.257$
- C) $\frac{3}{5}\pi \approx 1.885$
- D) $\frac{9}{5}\pi \approx 5.655$

5) $y = \csc x$, $y = 0$, $x = \frac{\pi}{2}$, $x = \frac{5\pi}{6}$



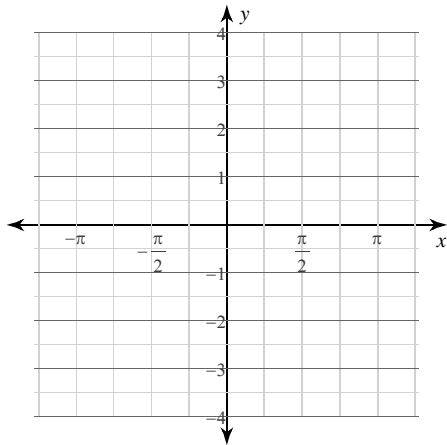
- A) $(\sqrt{3} - 1)\pi \approx 2.3$
- B) $(\sqrt{3} + 1)\pi \approx 8.583$
- C) $\sqrt{3} \cdot \pi \approx 5.441$
- D) $3\pi \approx 9.425$

6) $y = 2\sqrt{\cos x}$, $y = 0$, $x = \frac{\pi}{4}$, $x = \frac{\pi}{2}$



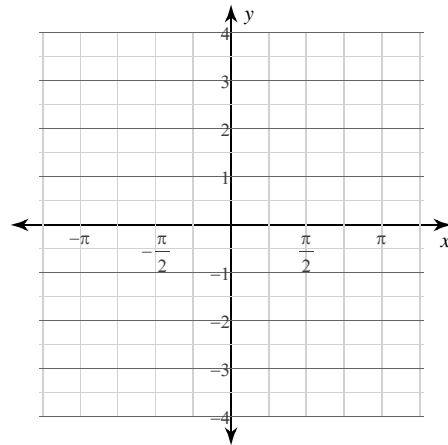
- A) $(4 - 2\sqrt{2})\pi \approx 3.681$
- B) $(5 - 2\sqrt{2})\pi \approx 6.822$
- C) $\frac{5}{2}\pi \approx 7.854$
- D) $(3 - 2\sqrt{2})\pi \approx 0.539$

7) $y = 2\sec x$, $y = 0$, $x = \frac{\pi}{6}$, $x = \frac{\pi}{3}$



- A) $\frac{8\sqrt{3}}{3}\pi \approx 14.51$
- B) $\frac{16\sqrt{3}}{3}\pi \approx 29.021$
- C) $\frac{4\sqrt{3}}{3}\pi \approx 7.255$
- D) $8\sqrt{3} \cdot \pi \approx 43.531$

8) $y = \sqrt{\sin x}$, $y = 0$, $x = 0$, $x = \frac{\pi}{2}$

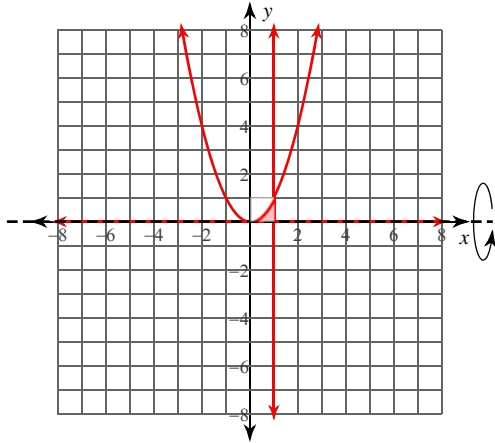


- A) $\frac{3}{4}\pi \approx 2.356$
- B) $\pi \approx 3.142$
- C) $2\pi \approx 6.283$
- D) $(-2 + 2\sqrt{2})\pi \approx 2.603$

Calculus Practice: Using Definite Integrals to Calculate Volume 1a

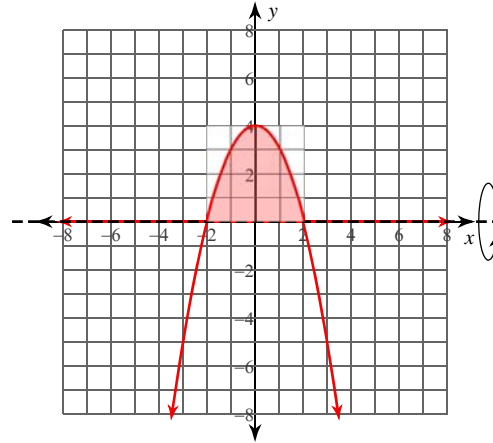
For each problem, find the volume of the solid that results when the region enclosed by the curves is revolved about the x -axis. You may use the provided graph to sketch the curves and shade the enclosed region.

1) $y = x^2$, $y = 0$, $x = 1$



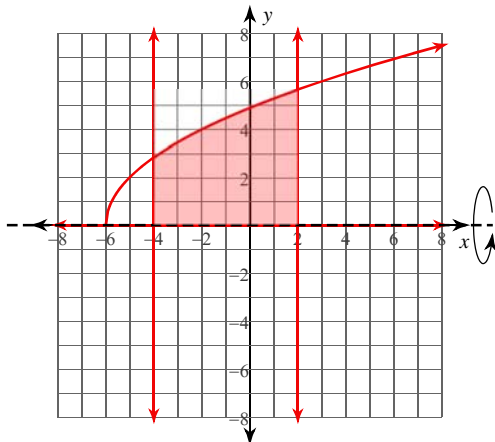
- A) $\frac{8}{15}\pi \approx 1.676$
- B) $\frac{11}{5}\pi \approx 6.912$
- C) $\frac{3}{5}\pi \approx 1.885$
- *D) $\frac{1}{5}\pi \approx 0.628$

2) $y = -x^2 + 4$, $y = 0$



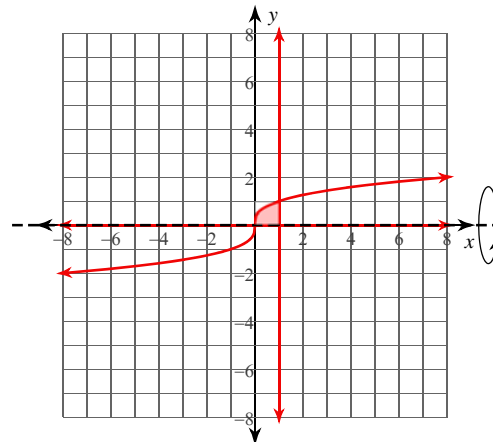
- *A) $\frac{512}{15}\pi \approx 107.233$
- B) $\frac{542}{15}\pi \approx 113.516$
- C) $\frac{1009}{30}\pi \approx 105.662$
- D) $\frac{1024}{15}\pi \approx 214.466$

3) $y = 2\sqrt{x+6}$, $y = 0$, $x = -4$, $x = 2$



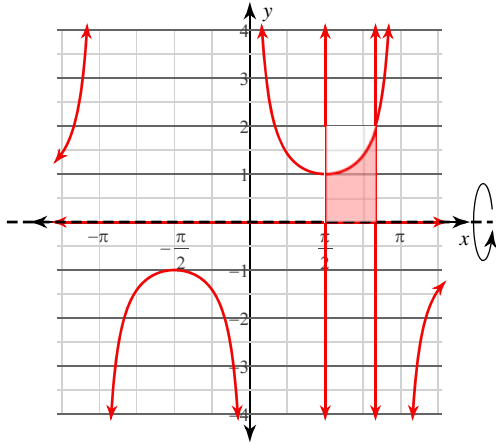
- A) $\frac{359}{3}\pi \approx 375.944$
- B) $\frac{361}{3}\pi \approx 378.038$
- C) $\frac{239}{2}\pi \approx 375.42$
- *D) $120\pi \approx 376.991$

4) $y = \sqrt[3]{x}$, $y = 0$, $x = 1$



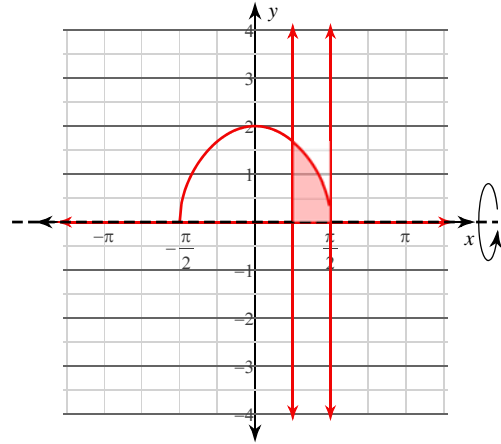
- A) $\frac{8}{5}\pi \approx 5.027$
- B) $\frac{2}{5}\pi \approx 1.257$
- *C) $\frac{3}{5}\pi \approx 1.885$
- D) $\frac{9}{5}\pi \approx 5.655$

5) $y = \csc x$, $y = 0$, $x = \frac{\pi}{2}$, $x = \frac{5\pi}{6}$



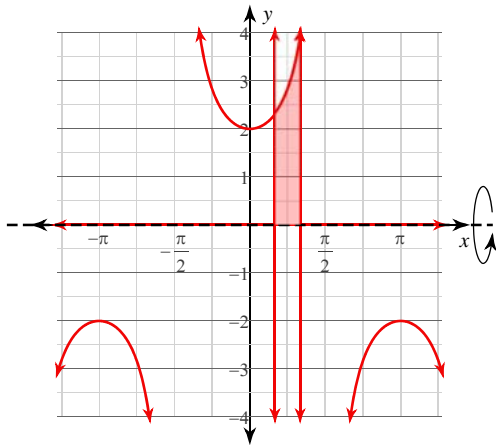
- A) $(\sqrt{3} - 1)\pi \approx 2.3$
- B) $(\sqrt{3} + 1)\pi \approx 8.583$
- *C) $\sqrt{3} \cdot \pi \approx 5.441$
- D) $3\pi \approx 9.425$

6) $y = 2\sqrt{\cos x}$, $y = 0$, $x = \frac{\pi}{4}$, $x = \frac{\pi}{2}$



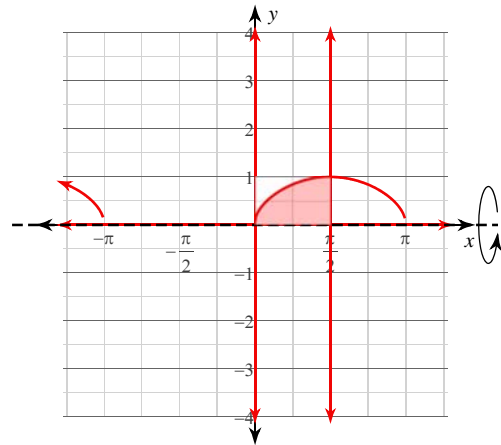
- *A) $(4 - 2\sqrt{2})\pi \approx 3.681$
- B) $(5 - 2\sqrt{2})\pi \approx 6.822$
- C) $\frac{5}{2}\pi \approx 7.854$
- D) $(3 - 2\sqrt{2})\pi \approx 0.539$

7) $y = 2\sec x$, $y = 0$, $x = \frac{\pi}{6}$, $x = \frac{\pi}{3}$



- *A) $\frac{8\sqrt{3}}{3}\pi \approx 14.51$
- B) $\frac{16\sqrt{3}}{3}\pi \approx 29.021$
- C) $\frac{4\sqrt{3}}{3}\pi \approx 7.255$
- D) $8\sqrt{3} \cdot \pi \approx 43.531$

8) $y = \sqrt{\sin x}$, $y = 0$, $x = 0$, $x = \frac{\pi}{2}$



- A) $\frac{3}{4}\pi \approx 2.356$
- *B) $\pi \approx 3.142$
- C) $2\pi \approx 6.283$
- D) $(-2 + 2\sqrt{2})\pi \approx 2.603$