

**0216ia**

1 If  $h$  represents a number, which equation is a correct translation of “Sixty more than 9 times a number is 375”?

- 1)  $9h = 375$
- 2)  $9h + 60 = 375$
- 3)  $9h - 60 = 375$
- 4)  $60h + 9 = 375$

2 Which expression is equivalent to  $9x^2 - 16$ ?

- 1)  $(3x + 4)(3x - 4)$
- 2)  $(3x - 4)(3x - 4)$
- 3)  $(3x + 8)(3x - 8)$
- 4)  $(3x - 8)(3x - 8)$

3 Which expression represents  $(3x^2y^4)(4xy^2)$  in simplest form?

- 1)  $12x^2y^8$
- 2)  $12x^2y^6$
- 3)  $12x^3y^8$
- 4)  $12x^3y^6$

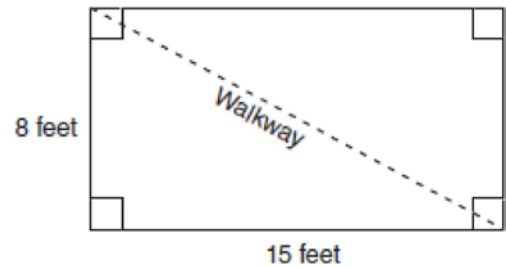
4 An online music club has a one-time registration fee of \$13.95 and charges \$0.49 to buy each song. If Emma has \$50.00 to join the club and buy songs, what is the maximum number of songs she can buy?

- 1) 73
- 2) 74
- 3) 130
- 4) 131

5 The local ice cream stand offers three flavors of soft-serve ice cream: vanilla, chocolate, and strawberry; two types of cone: sugar and wafer; and three toppings: sprinkles, nuts, and cookie crumbs. If Dawn does not order vanilla ice cream, how many different choices can she make that have one flavor of ice cream, one type of cone, and one topping?

- 1) 7
- 2) 8
- 3) 12
- 4) 18

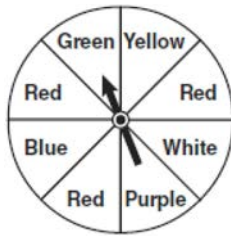
6 Nancy’s rectangular garden is represented in the diagram below.



If a diagonal walkway crosses her garden, what is its length, in feet?

- 1) 17
- 2) 22
- 3)  $\sqrt{161}$
- 4)  $\sqrt{529}$

- 7 The spinner below is divided into eight equal regions and is spun once. What is the probability of *not* getting red?



- 1)  $\frac{3}{5}$   
 2)  $\frac{3}{8}$   
 3)  $\frac{5}{8}$   
 4)  $\frac{7}{8}$
- 8 Which relationship can best be described as causal?  
 1) height and intelligence  
 2) shoe size and running speed  
 3) number of correct answers on a test and test score  
 4) number of students in a class and number of students with brown hair

- 9 Solve for  $x$ :  $\frac{3}{5}(x + 2) = x - 4$   
 1) 8  
 2) 13  
 3) 15  
 4) 23

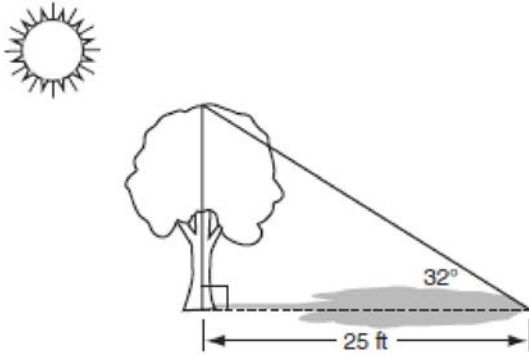
- 10 Erica is conducting a survey about the proposed increase in the sports budget in the Hometown School District. Which survey method would likely contain the most bias?  
 1) Erica asks every third person entering the Hometown Grocery Store.  
 2) Erica asks every third person leaving the Hometown Shopping Mall this weekend.  
 3) Erica asks every fifth student entering Hometown High School on Monday morning.  
 4) Erica asks every fifth person leaving Saturday's Hometown High School football game.

- 11 Which equation represents a line parallel to the  $x$ -axis?  
 1)  $y = -5$   
 2)  $y = -5x$   
 3)  $x = 3$   
 4)  $x = 3y$

- 12 Given:  
 $A = \{\text{All even integers from 2 to 20, inclusive}\}$   
 $B = \{10, 12, 14, 16, 18\}$   
 What is the complement of set  $B$  within the universe of set  $A$ ?  
 1)  $\{4, 6, 8\}$   
 2)  $\{2, 4, 6, 8\}$   
 3)  $\{4, 6, 8, 20\}$   
 4)  $\{2, 4, 6, 8, 20\}$

- 13 Which value of  $x$  is in the solution set of the inequality  $-2(x - 5) < 4$ ?  
 1) 0  
 2) 2  
 3) 3  
 4) 5

- 14 A tree casts a 25-foot shadow on a sunny day, as shown in the diagram below.

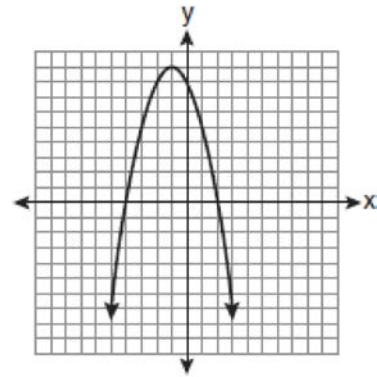


If the angle of elevation from the tip of the shadow to the top of the tree is  $32^\circ$ , what is the height of the tree to the nearest tenth of a foot?

- 1) 13.2
  - 2) 15.6
  - 3) 21.2
  - 4) 40.0
- 15 What is the slope of the line that passes through the points  $(-5, 4)$  and  $(15, -4)$ ?

- 1)  $-\frac{2}{5}$
- 2) 0
- 3)  $-\frac{5}{2}$
- 4) undefined

- 16 The equation  $y = -x^2 - 2x + 8$  is graphed on the set of axes below.



Based on this graph, what are the roots of the equation  $-x^2 - 2x + 8 = 0$ ?

- 1) 8 and 0
  - 2) 2 and  $-4$
  - 3) 9 and  $-1$
  - 4) 4 and  $-2$
- 17 What is the sum of  $\frac{3}{2x}$  and  $\frac{4}{3x}$  expressed in simplest form?

- 1)  $\frac{12}{6x^2}$
- 2)  $\frac{17}{6x}$
- 3)  $\frac{7}{5x}$
- 4)  $\frac{17}{12x}$

- 18 Which value of  $x$  makes the expression

$$\frac{x^2 - 9}{x^2 + 7x + 10} \text{ undefined?}$$

- 1)  $-5$
- 2)  $2$
- 3)  $3$
- 4)  $-3$

- 19 Which relation is *not* a function?

- 1)  $\{(1, 5), (2, 6), (3, 6), (4, 7)\}$
- 2)  $\{(4, 7), (2, 1), (-3, 6), (3, 4)\}$
- 3)  $\{(-1, 6), (1, 3), (2, 5), (1, 7)\}$
- 4)  $\{(-1, 2), (0, 5), (5, 0), (2, -1)\}$

- 20 What is the value of the  $y$ -coordinate of the solution to the system of equations  $x - 2y = 1$  and  $x + 4y = 7$ ?

- 1)  $1$
- 2)  $-1$
- 3)  $3$
- 4)  $4$

- 21 The solution to the equation  $x^2 - 6x = 0$  is

- 1)  $0$ , only
- 2)  $6$ , only
- 3)  $0$  and  $6$
- 4)  $\pm\sqrt{6}$


- 22 When  $5\sqrt{20}$  is written in simplest radical form, the result is  $k\sqrt{5}$ . What is the value of  $k$ ?

- 1)  $20$
- 2)  $10$
- 3)  $7$
- 4)  $4$

- 23 What is the value of the expression  $|-5x + 12|$  when  $x = 5$ ?

- 1)  $-37$
- 2)  $-13$
- 3)  $13$
- 4)  $37$

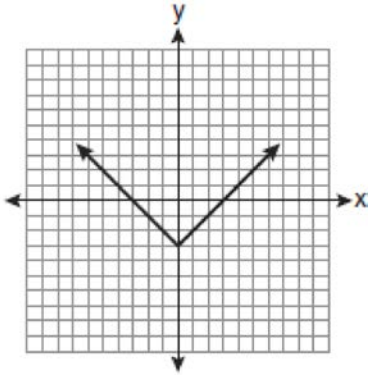
- 24 A playground in a local community consists of a rectangle and two semicircles, as shown in the diagram below.



Which expression represents the amount of fencing, in yards, that would be needed to completely enclose the playground?

- 1)  $15\pi + 50$
- 2)  $15\pi + 80$
- 3)  $30\pi + 50$
- 4)  $30\pi + 80$

25 Which equation is represented by the graph below?



- 1)  $y = x^2 - 3$
- 2)  $y = (x - 3)^2$
- 3)  $y = |x| - 3$
- 4)  $y = |x - 3|$

26 Carrie bought new carpet for her living room. She calculated the area of the living room to be 174.2 square feet. The actual area was 149.6 square feet. What is the relative error of the area to the *nearest ten-thousandth*?

- 1) 0.1412
- 2) 0.1644
- 3) 1.8588
- 4) 2.1644

27 What is an equation of the line that passes through the point  $(3, -1)$  and has a slope of 2?

- 1)  $y = 2x + 5$
- 2)  $y = 2x - 1$
- 3)  $y = 2x - 4$
- 4)  $y = 2x - 7$

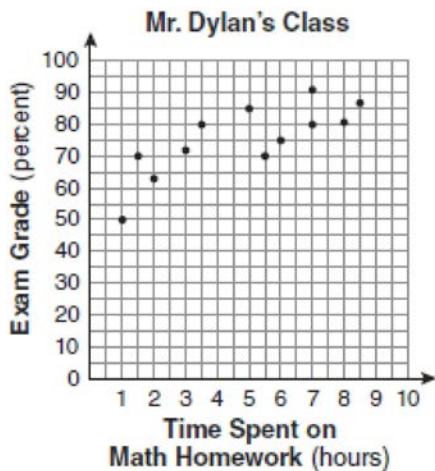
28 The ages of three brothers are consecutive even integers. Three times the age of the youngest brother exceeds the oldest brother's age by 48 years. What is the age of the youngest brother?

- 1) 14
- 2) 18
- 3) 22
- 4) 26

29 Cassandra bought an antique dresser for \$500. If the value of her dresser increases 6% annually, what will be the value of Cassandra's dresser at the end of 3 years to the *nearest dollar*?

- 1) \$415
- 2) \$590
- 3) \$596
- 4) \$770

- 30 The number of hours spent on math homework each week and the final exam grades for twelve students in Mr. Dylan's algebra class are plotted below.



Based on a line of best fit, which exam grade is the best prediction for a student who spends about 4 hours on math homework each week?

- 1) 62
- 2) 72
- 3) 82
- 4) 92

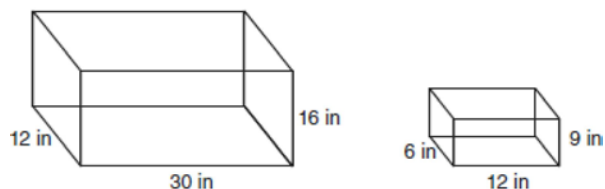
- 31 Chad complained to his friend that he had five equations to solve for homework. Are all of the homework problems equations? Justify your answer.

**Math Homework**

1.  $3x^2 \cdot 2x^4$
2.  $5 - 2x = 3x$
3.  $3(2x + 7)$
4.  $7x^2 + 2x - 3x^2 - 9$
5.  $\frac{2}{3} = \frac{x+2}{6}$

Name Chad

- 32 The diagram below represents Joe's two fish tanks.



Joe's larger tank is completely filled with water. He takes water from it to completely fill the small tank. Determine how many cubic inches of water will remain in the larger tank.

- 33 Clayton has three fair coins. Find the probability that he gets two tails and one head when he flips the three coins.

34 Find algebraically the equation of the axis of symmetry and the coordinates of the vertex of the parabola whose equation is  $y = -2x^2 - 8x + 3$ .

35 At the end of week one, a stock had increased in value from \$5.75 a share to \$7.50 a share. Find the percent of increase at the end of week one to the nearest tenth of a percent. At the end of week two, the same stock had decreased in value from \$7.50 to \$5.75. Is the percent of decrease at the end of week two the same as the percent of increase at the end of week one? Justify your answer.

36 The chart below compares two runners.

Runner	Distance, in miles	Time, in hours
Greg	11	2
Dave	16	3


Based on the information in this chart, state which runner has the faster rate. Justify your answer.

37 Express in simplest form:  $\frac{2x^2 - 8x - 42}{6x^2} \div \frac{x^2 - 9}{x^2 - 3x}$

38 On the grid below, solve the system of equations graphically for  $x$  and  $y$ .

$$4x - 2y = 10$$

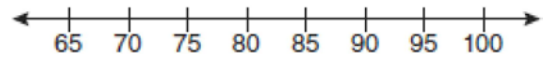
$$y = -2x - 1$$



39 The test scores from Mrs. Gray's math class are shown below.

72, 73, 66, 71, 82, 85, 95, 85, 86, 89, 91, 92

Construct a box-and-whisker plot to display these data.



**0216ia**  
**Answer Section**

- 1 ANS: 2                   PTS: 2                   REF: 021601ia           STA: A.A.4  
TOP: Modeling Linear Equations
- 2 ANS: 1                   PTS: 2                   REF: 021602ia           STA: A.A.19  
TOP: Factoring the Difference of Perfect Squares
- 3 ANS: 4                   PTS: 2                   REF: 021603ia           STA: A.A.12  
TOP: Multiplication of Powers
- 4 ANS: 1  
 $13.95 + 0.49s \leq 50.00$   
 $0.49s \leq 36.05$   
 $s \leq 73.57$
- PTS: 2                   REF: 021604ia           STA: A.A.6           TOP: Modeling Linear Inequalities
- 5 ANS: 3  
 $(3 - 1) \times 2 \times 3 = 12$
- PTS: 2                   REF: 021605ia           STA: A.N.7           TOP: Multiplication Counting Principle
- 6 ANS: 1  
 $8^2 + 15^2 = c^2$   
 $c^2 = 289$   
 $c = 17$
- PTS: 2                   REF: 021606ia           STA: A.A.45           TOP: Pythagorean Theorem
- 7 ANS: 3                   PTS: 2                   REF: 021607ia           STA: A.S.20  
TOP: Geometric Probability
- 8 ANS: 3  
The number of correct answers on a test causes the test score.
- PTS: 2                   REF: 021608ia           STA: A.S.13           TOP: Analysis of Data
- 9 ANS: 2  
 $\frac{3}{5}(x + 2) = x - 4$   
 $3(x + 2) = 5(x - 4)$   
 $3x + 6 = 5x - 20$   
 $26 = 2x$   
 $x = 13$
- PTS: 2                   REF: 021609ia           STA: A.A.25           TOP: Solving Linear Equations  
KEY: fractional expressions



- 10 ANS: 4  
Surveying persons leaving a football game about a sports budget contains the most bias.
- PTS: 2 REF: 021610ia STA: A.S.3 TOP: Analysis of Data  
KEY: bias
- 11 ANS: 1 PTS: 2 REF: 021611ia STA: A.A.36  
TOP: Parallel and Perpendicular Lines
- 12 ANS: 4  
 $A = \{2, 4, 6, 8, 10, 12, 14, 16, 18, 20\}$
- PTS: 2 REF: 021612ia STA: A.A.30 TOP: Set Theory  
KEY: complement
- 13 ANS: 4  
 $-2(x - 5) < 4$   
 $-2x + 10 < 4$   
 $-2x < -6$   
 $x > 3$
- PTS: 2 REF: 021613ia STA: A.A.21 TOP: Interpreting Solutions
- 14 ANS: 2  
 $\tan 32 = \frac{x}{25}$   
 $x \approx 15.6$
- PTS: 2 REF: 021614ia STA: A.A.44 TOP: Using Trigonometry to Find a Side
- 15 ANS: 1  
 $m = \frac{4 - (-4)}{-5 - 15} = -\frac{2}{5}$
- PTS: 2 REF: 021615ia STA: A.A.33 TOP: Slope
- 16 ANS: 2 PTS: 2 REF: 021616ia STA: A.G.8  
TOP: Solving Quadratics by Graphing
- 17 ANS: 2  
 $\frac{3}{2x} + \frac{4}{3x} = \frac{9x + 8x}{6x^2} = \frac{17x}{6x^2} = \frac{17}{6x}$
- PTS: 2 REF: 021617ia STA: A.A.17 TOP: Addition and Subtraction of Rationals
- 18 ANS: 1  
 $x^2 + 7x + 10 = 0$   
 $(x + 5)(x + 2) = 0$   
 $x = -5$  or  $-2$
- PTS: 2 REF: 021618ia STA: A.A.15 TOP: Undefined Rationals

19 ANS: 3

An element of the domain, 1, is paired with two different elements of the range, 3 and 7.

PTS: 2 REF: 021619ia STA: A.G.3 TOP: Defining Functions  
 KEY: ordered pairs

20 ANS: 1

$$x - 2y = 1$$

$$x + 4y = 7$$

$$-6y = -6$$

$$y = 1$$

PTS: 2 REF: 021620ia STA: A.A.10 TOP: Solving Linear Systems  
 KEY: elimination

21 ANS: 3

$$x^2 - 6x = 0$$

$$x(x - 6) = 0$$

$$x = 0 \quad x = 6$$

PTS: 2 REF: 021621ia STA: A.A.27 TOP: Solving Quadratics  
 KEY: factoring

22 ANS: 2

$$5\sqrt{20} = 5\sqrt{4}\sqrt{5} = 10\sqrt{5}$$

PTS: 2 REF: 021622ia STA: A.N.2 TOP: Simplifying Radicals

23 ANS: 3

$$|-5(5) + 12| = |-13| = 13$$

PTS: 2 REF: 021623ia STA: A.N.6 TOP: Evaluating Expressions

24 ANS: 1

PTS: 2 REF: 021624ia STA: A.G.1  
 TOP: Compositions of Polygons and Circles  
 KEY: perimeter

25 ANS: 3

PTS: 2 REF: 021625ia STA: A.G.4  
 TOP: Graphing Absolute Value Functions

26 ANS: 2

$$\left| \frac{149.6 - 174.2}{149.6} \right| \approx 0.1644$$

PTS: 2 REF: 021626ia STA: A.M.3 TOP: Error  
 KEY: area

27 ANS: 4

$$y = mx + b$$

$$-1 = (2)(3) + b$$

$$b = -7$$

PTS: 2 REF: 021627ia STA: A.A.34 TOP: Writing Linear Equations

28 ANS: 4

Let  $x$  = youngest brother and  $x + 4$  = oldest brother.  $3x - (x + 4) = 48$ .

$$2x - 4 = 48$$

$$x = 26$$

PTS: 2 REF: 021628ia STA: A.A.6 TOP: Modeling Linear Equations

29 ANS: 3

$$500(1 + 0.06)^3 \approx 596$$

PTS: 2 REF: 021629ia STA: A.A.9 TOP: Modeling Exponential Functions

30 ANS: 2

PTS: 2

REF: 021630ia

STA: A.S.17

TOP: Scatter Plots KEY: line of best fit

31 ANS:

Not all of the homework problems are equations. The first problem is an expression.

PTS: 2 REF: 021631ia STA: A.A.3 TOP: Expressions

32 ANS:

$$5,112. (12 \times 30 \times 16) - (6 \times 12 \times 9) = 5112$$

PTS: 2 REF: 021632ia STA: A.G.2 TOP: Volume

33 ANS:

$$\frac{3}{8}. (H,H,H), (H,H,T), (H,T,H), (H,T,T), (T,H,H), (T,H,T), (T,T,H), (T,T,T)$$

PTS: 2 REF: 021633ia STA: A.S.19 TOP: Sample Space

34 ANS:

$$(-2, 11). x = \frac{-b}{2a} = \frac{-(-8)}{2(-2)} = -2$$

$$y = -2(-2)^2 - 8(-2) + 3 = 11$$

PTS: 3 REF: 021634ia STA: A.A.41  
TOP: Identifying the Vertex of a Quadratic Given Equation

35 ANS:

$$30.4\%; \text{ no, } 23.3\%. \frac{7.50 - 5.75}{5.75} = 30.4\%. \frac{7.50 - 5.75}{7.50} = 23.3\%$$

PTS: 3 REF: 021635ia STA: A.N.5 TOP: Percents

36 ANS:

Greg's rate of 5.5 is faster than Dave's rate of 5.3.  $\frac{\text{distance}}{\text{time}} = \frac{11}{2} = 5.5$ .  $\frac{16}{3} = 5.\bar{3}$

PTS: 3

REF: 021636ia

STA: A.M.1

TOP: Speed

37 ANS:

$$\frac{x-7}{3x} \cdot \frac{2x^2-8x-42}{6x^2} \div \frac{x^2-9}{x^2-3x} = \frac{2(x^2-4x-21)}{6x^2} \cdot \frac{x(x-3)}{(x+3)(x-3)} = \frac{(x-7)(x+3)}{3x} \cdot \frac{1}{x+3} = \frac{x-7}{3x}$$

PTS: 4

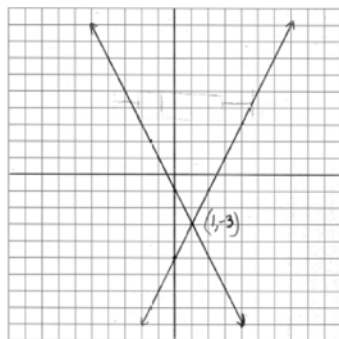
REF: 021637ia

STA: A.A.18

TOP: Multiplication and Division of Rationals

KEY: division

38 ANS:




PTS: 4

REF: 021638ia

STA: A.G.7

TOP: Graphing Linear Systems

39 ANS:



PTS: 4

REF: 021639ia

STA: A.S.5

TOP: Box Plots

KEY: represent