

0117AII Common Core State Standards

1 Relative to the graph of $y = 3 \sin x$, what is the shift of the graph of $y = 3 \sin\left(x + \frac{\pi}{3}\right)$?

- 1) $\frac{\pi}{3}$ right
- 2) $\frac{\pi}{3}$ left
- 3) $\frac{\pi}{3}$ up
- 4) $\frac{\pi}{3}$ down

2 A rabbit population doubles every 4 weeks. There are currently five rabbits in a restricted area. If t represents the time, in weeks, and $P(t)$ is the population of rabbits with respect to time, about how many rabbits will there be in 98 days?

- 1) 56
- 2) 152
- 3) 3688
- 4) 81,920

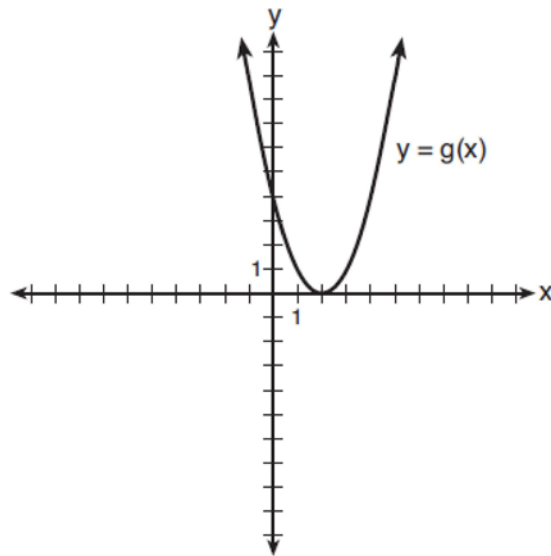
3 Factored completely, $m^5 + m^3 - 6m$ is equivalent to

- 1) $(m + 3)(m - 2)$
- 2) $(m^2 + 3m)(m^2 - 2)$
- 3) $m(m^4 + m^2 - 6)$
- 4) $m(m^2 + 3)(m^2 - 2)$

4 If $\sin^2(32^\circ) + \cos^2(M) = 1$, then M equals

- 1) 32°
- 2) 58°
- 3) 68°
- 4) 72°

5 What is the solution to the system of equations $y = 3x - 2$ and $y = g(x)$ where $g(x)$ is defined by the function below?



- 1) $\{(0, -2)\}$
- 2) $\{(0, -2), (1, 6)\}$
- 3) $\{(1, 6)\}$
- 4) $\{(1, 1), (6, 16)\}$

6 Which statement about statistical analysis is *false*?

- 1) Experiments can suggest patterns and relationships in data.
- 2) Experiments can determine cause and effect relationships.
- 3) Observational studies can determine cause and effect relationships.
- 4) Observational studies can suggest patterns and relationships in data.

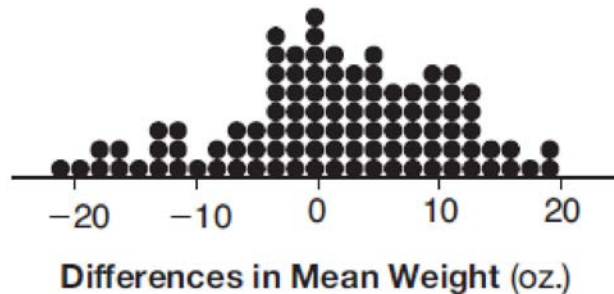
7 The expression $\left(\frac{m^2}{m^{\frac{1}{3}}}\right)^{-\frac{1}{2}}$ is equivalent to

- 1) $-\sqrt[6]{m^5}$
- 2) $\frac{1}{\sqrt[6]{m^5}}$
- 3) $-m^5\sqrt{m}$
- 4) $\frac{1}{m^5\sqrt{m}}$

8 What is the inverse of the function $y = \log_3 x$?

- 1) $y = x^3$
- 2) $y = \log_x 3$
- 3) $y = 3^x$
- 4) $x = 3^y$

9 Gabriel performed an experiment to see if planting 13 tomato plants in black plastic mulch leads to larger tomatoes than if 13 plants are planted without mulch. He observed that the average weight of the tomatoes from tomato plants grown in black plastic mulch was 5 ounces greater than those from the plants planted without mulch. To determine if the observed difference is statistically significant, he rerandomized the tomato groups 100 times to study these random differences in the mean weights. The output of his simulation is summarized in the dotplot below.



Given these results, what is an appropriate inference that can be drawn?

- | | |
|--|--|
| <ol style="list-style-type: none"> 1) There was no effect observed between the two groups. 2) There was an effect observed that could be due to the random assignment of plants to the groups. | <ol style="list-style-type: none"> 3) There is strong evidence to support the hypothesis that tomatoes from plants planted in black plastic mulch are larger than those planted without mulch. 4) There is strong evidence to support the hypothesis that tomatoes from plants planted without mulch are larger than those planted in black plastic mulch. |
|--|--|

10 If $p(x) = ab^x$ and $r(x) = cd^x$, then $p(x) \bullet r(x)$ equals

- 1) $ac(b + d)^x$
- 2) $ac(b + d)^{2x}$
- 3) $ac(bd)^x$
- 4) $ac(bd)^{x^2}$

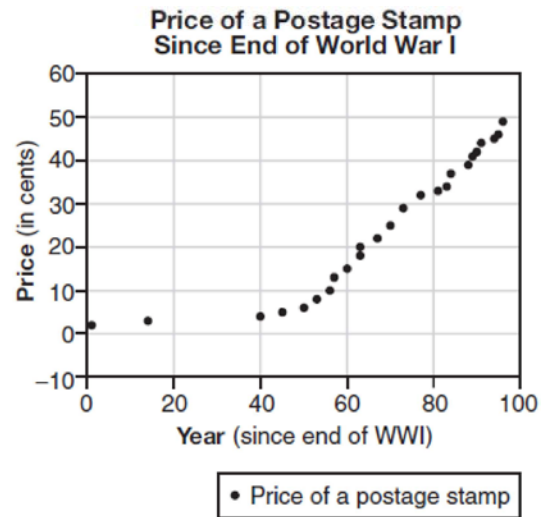
11 The solution to the equation $18x^2 - 24x + 87 = 0$ is

- 1) $-\frac{2}{3} \pm 6i\sqrt{158}$
- 2) $-\frac{2}{3} \pm \frac{1}{6}i\sqrt{158}$
- 3) $\frac{2}{3} \pm 6i\sqrt{158}$
- 4) $\frac{2}{3} \pm \frac{1}{6}i\sqrt{158}$

12 When $g(x) = \frac{2}{x+2}$ and $h(x) = \log(x+1) + 3$ are graphed on the same set of axes, which coordinates best approximate their point of intersection?

- 1) $(-0.9, 1.8)$
- 2) $(-0.9, 1.9)$
- 3) $(1.4, 3.3)$
- 4) $(1.4, 3.4)$

13 The price of a postage stamp in the years since the end of World War I is shown in the scatterplot below.



The equation that best models the price, in cents, of a postage stamp based on these data is

- 1) $y = 0.59x - 14.82$
- 2) $y = 1.04(1.43)^x$
- 3) $y = 1.43(1.04)^x$
- 4) $y = 24 \sin(14x) + 25$

14 The eighth and tenth terms of a sequence are 64 and 100. If the sequence is either arithmetic or geometric, the ninth term can *not* be

- 1) -82
- 2) -80
- 3) 80
- 4) 82

- 15 The loudness of sound is measured in units called decibels (dB). These units are measured by first assigning an intensity I_0 to a very soft sound that is called the threshold sound. The sound to be measured is assigned an intensity, I , and the decibel rating, d , of this sound is found using $d = 10 \log \frac{I}{I_0}$. The threshold sound audible to the average person is 1.0×10^{-12} W/m² (watts per square meter). Consider the following sound level classifications:

Moderate	45-69 dB
Loud	70-89 dB
Very loud	90-109 dB
Deafening	>110 dB

How would a sound with intensity 6.3×10^{-3} W/m² be classified?

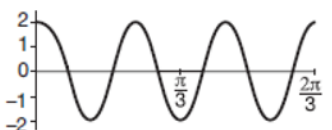

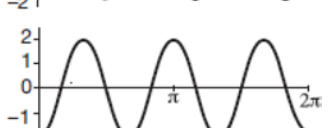
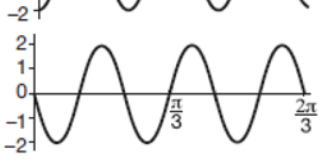
- 1) moderate
2) loud
3) very loud
4) deafening
- 16 Pedro and Bobby each own an ant farm. Pedro starts with 100 ants and says his farm is growing exponentially at a rate of 15% per month. Bobby starts with 350 ants and says his farm is steadily decreasing by 5 ants per month. Assuming both boys are accurate in describing the population of their ant farms, after how many months will they both have approximately the same number of ants?
- 1) 7
2) 8
3) 13
4) 36
- 17 What is the solution, if any, of the equation $\frac{2}{x+3} - \frac{3}{4-x} = \frac{2x-2}{x^2-x-12}$?
- 1) -1
2) -5
3) all real numbers
4) no real solution
- 18 In 2013, approximately 1.6 million students took the Critical Reading portion of the SAT exam. The mean score, the modal score, and the standard deviation were calculated to be 496, 430, and 115, respectively. Which interval reflects 95% of the Critical Reading scores?
- 1) 430 ± 115
2) 430 ± 230
3) 496 ± 115
4) 496 ± 230
- 19 Which statement regarding the graphs of the functions below is *untrue*?
- $f(x) = 3 \sin 2x$, from $-\pi < x < \pi$
 $g(x) = (x - 0.5)(x + 4)(x - 2)$
 $h(x) = \log_2 x$
 $j(x) = -|4x - 2| + 3$
- 1) $f(x)$ and $j(x)$ have a maximum y -value of 3.
2) $f(x)$, $h(x)$, and $j(x)$ have one y -intercept.
3) $g(x)$ and $j(x)$ have the same end behavior as $x \rightarrow -\infty$.
4) $g(x)$, $h(x)$, and $j(x)$ have rational zeros.
- 20 When $g(x)$ is divided by $x + 4$, the remainder is 0. Given $g(x) = x^4 + 3x^3 - 6x^2 - 6x + 8$, which conclusion about $g(x)$ is true?
- 1) $g(4) = 0$
2) $g(-4) = 0$
3) $x - 4$ is a factor of $g(x)$.
4) No conclusion can be made regarding $g(x)$.

- 21 Joelle has a credit card that has a 19.2% annual interest rate compounded monthly. She owes a total balance of B dollars after m months. Assuming she makes no payments on her account, the table below illustrates the balance she owes after m months.

m	B
0	100.00
10	1172.00
19	1352.00
36	1770.80
60	2591.90
69	2990.00
72	3135.80
73	3186.00

Over which interval of time is her average rate of change for the balance on her credit card account the greatest?

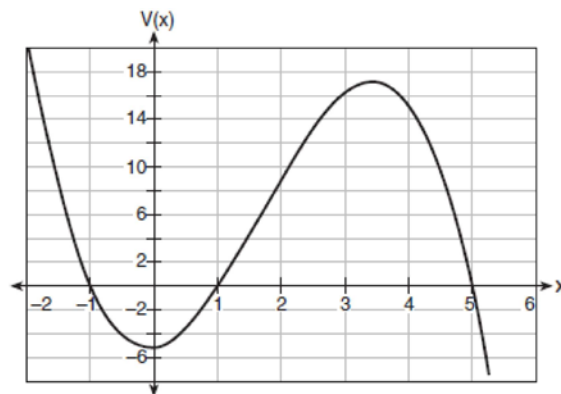
- 1) month 10 to month 60
 2) month 19 to month 69
 3) month 36 to month 72
 4) month 60 to month 73
- 22 Which graph represents a cosine function with no horizontal shift, an amplitude of 2, and a period of $\frac{2\pi}{3}$?

- 1) 
- 2) 
- 3) 
- 4) 

- 23 According to a pricing website, Indroid phones lose 58% of their cash value over 1.5 years. Which expression can be used to estimate the value of a \$300 Indroid phone in 1.5 years?

- 1) $300e^{-0.87}$
 2) $300e^{-0.63}$
 3) $300e^{-0.58}$
 4) $300e^{-0.42}$

- 24 A cardboard box manufacturing company is building boxes with length represented by $x + 1$, width by $5 - x$, and height by $x - 1$. The volume of the box is modeled by the function below.

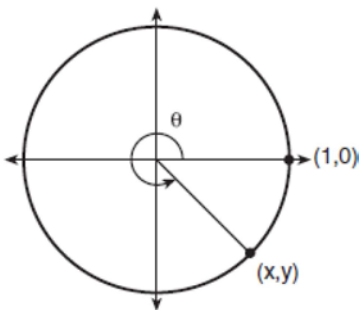


Over which interval is the volume of the box changing at the fastest average rate?

- 1) $[1, 2]$
 2) $[1, 3.5]$
 3) $[1, 5]$
 4) $[0, 3.5]$
- 25 Express $(1 - i)^3$ in $a + bi$ form.

- 26 An orange-juice processing plant receives a truckload of oranges. The quality control team randomly chooses three pails of oranges, each containing 50 oranges, from the truckload. Identify the sample and the population in the given scenario. State *one* conclusion that the quality control team could make about the population if 5% of the sample was found to be unsatisfactory.

- 27 Using the unit circle below, explain why $\csc \theta = \frac{1}{y}$.



- 28 The function $M(t)$ represents the mass of radium over time, t , in years.

$$M(t) = 100e^{\frac{\left(\ln \frac{1}{2}\right)t}{1590}}$$


Determine if the function $M(t)$ represents growth or decay. Explain your reasoning.

- 31 The results of a survey of the student body at Central High School about television viewing preferences are shown below.

	Comedy Series	Drama Series	Reality Series	Total
Males	95	65	70	230
Females	80	70	110	260
Total	175	135	180	490

Are the events “student is a male” and “student prefers reality series” independent of each other? Justify your answer.

- 29 On the grid below, sketch a cubic polynomial whose zeros are 1, 3, and -2.



- 30 Given the equal terms $\sqrt[3]{x^5}$ and $y^{\frac{5}{6}}$, determine and state y , in terms of x .

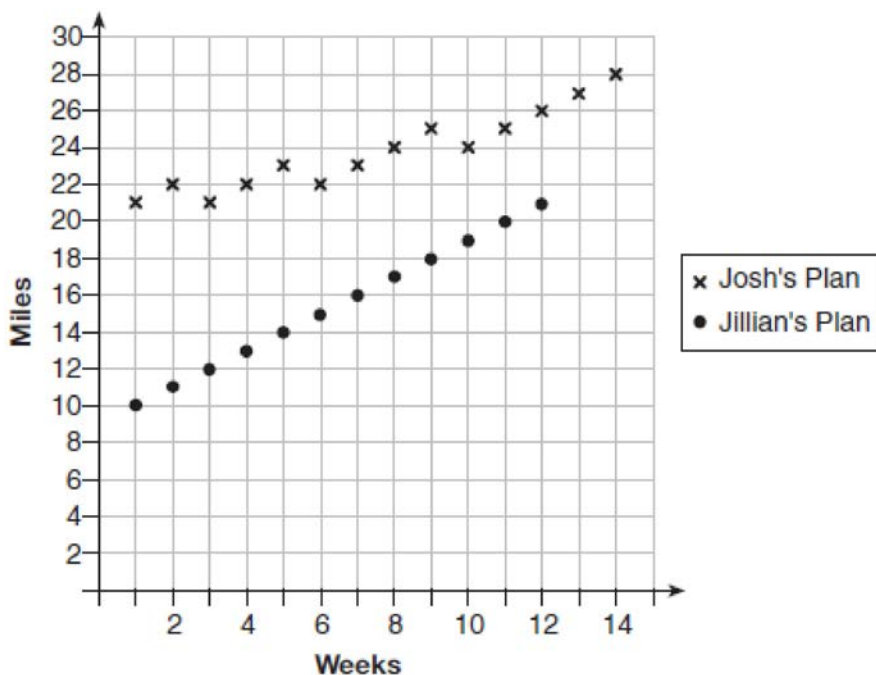
- 32 Given $f(x) = 3x^2 + 7x - 20$ and $g(x) = x - 2$, state the quotient and remainder of $\frac{f(x)}{g(x)}$, in the form

$$q(x) + \frac{r(x)}{g(x)}.$$

- 33 Algebraically determine the values of h and k to correctly complete the identity stated below.

$$2x^3 - 10x^2 + 11x - 7 = (x - 4)(2x^2 + hx + 3) + k$$

- 34 Elaina has decided to run the Buffalo half-marathon in May. She researched training plans on the Internet and is looking at two possible plans: Jillian's 12-week plan and Josh's 14-week plan. The number of miles run per week for each plan is plotted below.



Which one of the plans follows an arithmetic pattern? Explain how you arrived at your answer. Write a recursive definition to represent the number of miles run each week for the duration of the plan you chose. Jillian's plan has an alternative if Elaina wanted to train instead for a full 26-mile marathon. Week one would start at 13 miles and follow the same pattern for the half-marathon, but it would continue for 14 weeks. Write an explicit formula, in *simplest form*, to represent the number of miles run each week for the full-marathon training plan.

- 35 The guidance department has reported that of the senior class, 2.3% are members of key club, K , 8.6% are enrolled in AP Physics, P , and 1.9% are in both. Determine the probability of P given K , to the *nearest tenth of a percent*. The principal would like a basic interpretation of these results. Write a statement relating your calculated probabilities to student enrollment in the given situation.

- 36 Using the formula below, determine the monthly payment on a 5-year car loan with a monthly percentage rate of 0.625% for a car with an original cost of \$21,000 and a \$1000 down payment, to the *nearest cent*.

$$P_n = PMT \left(\frac{1 - (1 + i)^{-n}}{i} \right)$$

P_n = present amount borrowed

n = number of monthly pay periods

PMT = monthly payment

i = interest rate per month

The affordable monthly payment is \$300 for the same time period. Determine an appropriate down payment, to the *nearest dollar*.

- 37 The speed of a tidal wave, s , in hundreds of miles per hour, can be modeled by the equation $s = \sqrt{t} - 2t + 6$, where t represents the time from its origin in hours. Algebraically determine the time when $s = 0$. How much faster was the tidal wave traveling after 1 hour than 3 hours, to the *nearest mile per hour*? Justify your answer.

0117AII Common Core State Standards

Answer Section

1 ANS: 2 PTS: 2 REF: 011701aai NAT: F.IF.B.4
TOP: Graphing Trigonometric Functions

2 ANS: 1

$$P(28) = 5(2)^{\frac{98}{28}} \approx 56$$

PTS: 2 REF: 011702aai NAT: F.LE.A.2 TOP: Modeling Exponential Functions
KEY: All

3 ANS: 4

$$m^5 + m^3 - 6m = m(m^4 + m^2 - 6) = m(m^2 + 3)(m^2 - 2)$$

PTS: 2 REF: 011703aai NAT: A.SSE.A.2 TOP: Factoring Polynomials
KEY: higher power All

4 ANS: 1 PTS: 2 REF: 011704aai NAT: F.TF.C.8
TOP: Simplifying Trigonometric Expressions

5 ANS: 4

$$y = g(x) = (x-2)^2 \quad (x-2)^2 = 3x-2 \quad y = 3(6)-2 = 16$$

$$x^2 - 4x + 4 = 3x - 2 \quad y = 3(1) - 2 = 1$$

$$x^2 - 7x + 6 = 0$$

$$(x-6)(x-1) = 0$$

$$x = 6, 1$$

PTS: 2 REF: 011705aai NAT: A.REI.C.7 TOP: Quadratic-Linear Systems
KEY: All

6 ANS: 3 PTS: 2 REF: 011706aai NAT: S.IC.B.3
TOP: Analysis of Data KEY: type

7 ANS: 2

$$\left(m^{\frac{5}{3}}\right)^{-\frac{1}{2}} = m^{-\frac{5}{6}} = \frac{1}{\sqrt[6]{m^5}}$$

PTS: 2 REF: 011707aai NAT: N.RN.A.2 TOP: Radicals and Rational Exponents
KEY: variables

8 ANS: 3 PTS: 2 REF: 011708aai NAT: F.BF.B.4
TOP: Inverse of Functions KEY: other

9 ANS: 2 PTS: 2 REF: 011709aai NAT: S.IC.B.5
TOP: Analysis of Data

10 ANS: 3 PTS: 2 REF: 011710aai NAT: F.BF.A.1
TOP: Operations with Functions

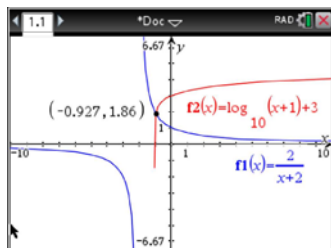
11 ANS: 4

$$x = \frac{8 \pm \sqrt{(-8)^2 - 4(6)(29)}}{2(6)} = \frac{8 \pm \sqrt{-632}}{12} = \frac{8 \pm i\sqrt{4}\sqrt{158}}{12} = \frac{2}{3} \pm \frac{1}{6}i\sqrt{158}$$

PTS: 2 REF: 011711aai NAT: A.REI.B.4 TOP: Solving Quadratics

KEY: complex solutions | quadratic formula

12 ANS: 2



PTS: 2 REF: 011712aai NAT: A.REI.D.11 TOP: Other Systems

KEY: All

13 ANS: 3

The pattern suggests an exponential pattern, not linear or sinusoidal. A 4% growth rate is accurate, while a 43% growth rate is not.

PTS: 2 REF: 011713aai NAT: S.ID.B.6 TOP: Regression

KEY: choose model

14 ANS: 1

$$d = 18; r = \pm \frac{5}{4}$$

PTS: 2 REF: 011714aai NAT: F.IF.A.3 TOP: Sequences

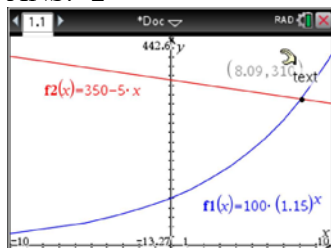
KEY: term

15 ANS: 3

$$d = 10 \log \frac{6.3 \times 10^{-3}}{1.0 \times 10^{-12}} \approx 98$$

PTS: 2 REF: 011715aai NAT: F.IF.B.4 TOP: Evaluating Logarithmic Expressions

16 ANS: 2



PTS: 2 REF: 011716aai NAT: A.REI.D.11 TOP: Other Systems

KEY: All

17 ANS: 1

$$\frac{2(x-4)}{(x+3)(x-4)} + \frac{3(x+3)}{(x-4)(x+3)} = \frac{2x-2}{x^2-x-12}$$

$$2x - 8 + 3x + 9 = 2x - 2$$

$$3x = -3$$

$$x = -1$$

PTS: 2 REF: 011717aai NAT: A.REI.A.2 TOP: Solving Rationals
KEY: rational solutions

18 ANS: 4

$$496 \pm 2(115)$$

PTS: 2 REF: 011718aai NAT: S.ID.A.4 TOP: Normal Distributions
KEY: interval

19 ANS: 2

$h(x)$ does not have a y -intercept.

PTS: 2 REF: 011719aai NAT: F.IF.C.9 TOP: Comparing Functions

20 ANS: 2

PTS: 2

REF: 011720aai

NAT: A.APR.B.2

TOP: Remainder Theorem

21 ANS: 4

$$(1) \frac{B(60) - B(10)}{60 - 10} \approx 28\% \quad (2) \frac{B(69) - B(19)}{69 - 19} \approx 33\% \quad (3) \frac{B(72) - B(36)}{72 - 36} \approx 38\% \quad (4) \frac{B(73) - B(60)}{73 - 60} \approx 46\%$$

PTS: 2 REF: 011721aai NAT: F.IF.B.6 TOP: Rate of Change
KEY: All

22 ANS: 3

(3) repeats 3 times over 2π .

PTS: 2 REF: 011722aai NAT: F.IF.C.7 TOP: Graphing Trigonometric Functions
KEY: recognize | bimodalgraph

23 ANS: 1

$$\frac{A}{P} = e^{rt}$$

$$0.42 = e^{rt}$$

$$\ln 0.42 = \ln e^{rt}$$

$$-0.87 \approx rt$$

PTS: 2 REF: 011723aai NAT: F.BF.A.1 TOP: Modeling Exponential Functions
KEY: All

24 ANS: 1

$$(1) \frac{9-0}{2-1} = 9 \quad (2) \frac{17-0}{3.5-1} = 6.8 \quad (3) \frac{0-0}{5-1} = 0 \quad (4) \frac{17--5}{3.5-1} \approx 6.3$$

PTS: 2 REF: 011724aai NAT: F.IF.B.6 TOP: Rate of Change
KEY: AII

25 ANS:

$$(1-i)(1-i)(1-i) = (1-2i+i^2)(1-i) = -2i(1-i) = -2i+2i^2 = -2-2i$$

PTS: 2 REF: 011725aai NAT: N.CN.A.2 TOP: Operations with Complex Numbers

26 ANS:

sample: pails of oranges; population: truckload of oranges. It is likely that about 5% of all the oranges are unsatisfactory.

PTS: 2 REF: 011726aai NAT: S.IC.A.2 TOP: Analysis of Data

27 ANS:

$\csc \theta = \frac{1}{\sin \theta}$, and $\sin \theta$ on a unit circle represents the y value of a point on the unit circle. Since $y = \sin \theta$,
 $\csc \theta = \frac{1}{y}$.

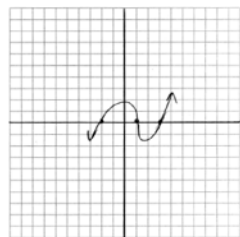
PTS: 2 REF: 011727aai NAT: F.TF.A.2 TOP: Reciprocal Trigonometric Relationships

28 ANS:

$\left(\ln \frac{1}{2} \right)$
 $\frac{\quad}{1590}$ is negative, so $M(t)$ represents decay.

PTS: 2 REF: 011728aai NAT: F.IF.C.7 TOP: Graphing Exponential Functions

29 ANS:



PTS: 2 REF: 011729aai NAT: F.IF.C.7 TOP: Graphing Polynomial Functions

30 ANS:

$$\left(x^{\frac{5}{3}}\right)^{\frac{6}{5}} = \left(y^{\frac{5}{6}}\right)^{\frac{6}{5}}$$

$$x^2 = y$$

PTS: 2 REF: 011730aii NAT: N.RN.A.2 TOP: Radicals and Rational Exponents
KEY: variables

31 ANS:

No, because $P(M/R) \neq P(M)$

$$\frac{70}{180} \neq \frac{230}{490}$$

$$0.38 \neq 0.47$$

PTS: 2 REF: 011731aii NAT: S.CP.A.4 TOP: Conditional Probability

32 ANS:

$$x-2 \overline{) \begin{array}{r} 3x+13 \\ 3x^2+7x-20 \\ \underline{3x^2-6x} \\ 13x-20 \\ \underline{13x-26} \\ 6 \end{array}}$$

PTS: 2 REF: 011732aii NAT: A.APR.D.6 TOP: Division of Polynomials

33 ANS:

$$2x^3 - 10x^2 + 11x - 7 = 2x^3 + hx^2 + 3x - 8x^2 - 4hx - 12 + k \quad h = -2$$

$$-2x^2 + 8x + 5 = hx^2 - 4hx + k \quad k = 5$$

PTS: 4 REF: 011733aii NAT: A.APR.C.4 TOP: Polynomial Identities

34 ANS:

Jillian's plan, because distance increases by one mile each week. $a_1 = 10$ $a_n = n + 12$
 $a_n = a_{n-1} + 1$

PTS: 4 REF: 011734aii NAT: F.LE.A.2 TOP: Sequences

35 ANS:

$$P(P/K) = \frac{P(P \wedge K)}{P(K)} = \frac{1.9}{2.3} \approx 82.6\% \quad \text{A key club member has an 82.6\% probability of being enrolled in AP Physics.}$$

PTS: 4 REF: 011735aii NAT: S.CP.B.6 TOP: Conditional Probability

36 ANS:

$$20000 = PMT \left(\frac{1 - (1 + 0.00625)^{-60}}{0.00625} \right) \quad 21000 - x = 300 \left(\frac{1 - (1 + 0.00625)^{-60}}{0.00625} \right)$$

$$PMT \approx 400.76$$

$$x \approx 6028$$

PTS: 4

REF: 011736aaii

NAT: A.SSE.B.4

TOP: Series

37 ANS:

$$0 = \sqrt{t} - 2t + 6 \quad 2 \left(\frac{9}{4} \right) - 6 < 0, \text{ so } \frac{9}{4} \text{ is extraneous.}$$

$$2t - 6 = \sqrt{t}$$

$$4t^2 - 24t + 36 = t$$

$$4t^2 - 25t + 36 = 0$$

$$(4t - 9)(t - 4) = 0$$

$$t = \frac{9}{4}, 4$$

$$(\sqrt{1} - 2(1) + 6) - (\sqrt{3} - 2(3) + 6) = 5 - \sqrt{3} \approx 3.268 \quad 327 \text{ mph}$$

PTS: 6

REF: 011737aaii

NAT: A.REI.A.2

TOP: Solving Radicals

KEY: context