

0120AI

1 If $f(x) = 2(3^x) + 1$, what is the value of $f(2)$?

- 1) 13
2) 19
3) 37
4) 54

2 A high school sponsored a badminton tournament. After each round, one-half of the players were eliminated. If there were 64 players at the start of the tournament, which equation models the number of players left after 3 rounds?

- 1) $y = 64(1 - .5)^3$
2) $y = 64(1 + .5)^3$
3) $y = 64(1 - .3)^{0.5}$
4) $y = 64(1 + .3)^{0.5}$

3 Given $7x + 2 \geq 58$, which number is *not* in the solution set?

- 1) 6
2) 8
3) 10
4) 12

4 Which table could represent a function?

1)

x	f(x)
1	4
2	2
3	4
2	6

2)

x	g(x)
1	2
2	4
3	6
4	2

3)

x	h(x)
2	6
0	4
1	6
2	2

4)

x	k(x)
2	2
3	2
4	6
3	6

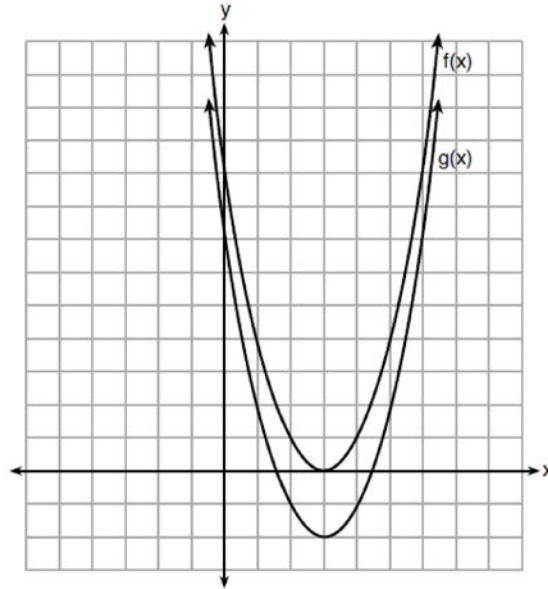
5 Which value of x makes $\frac{x-3}{4} + \frac{2}{3} = \frac{17}{12}$ true?

- 1) 8
2) 6
3) 0
4) 4

6 Which expression is equivalent to $18x^2 - 50$?

- 1) $2(3x + 5)^2$
2) $2(3x - 5)^2$
3) $2(3x - 5)(3x + 5)$
4) $2(3x - 25)(3x + 25)$

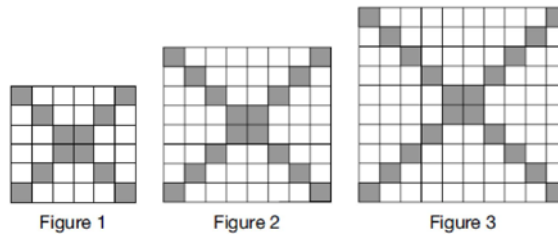
7 The functions $f(x) = x^2 - 6x + 9$ and $g(x) = f(x) + k$ are graphed below.



Which value of k would result in the graph of $g(x)$?

- 1) 0
- 2) 2
- 3) -3
- 4) -2

8 The shaded boxes in the figures below represent a sequence.



If figure 1 represents the first term and this pattern continues, how many shaded blocks will be in figure 35?

- 1) 55
- 2) 148
- 3) 420
- 4) 805

9 The zeros of the function $f(x) = x^3 - 9x^2$ are

- 1) 9, only
- 2) 0 and 9
- 3) 0 and 3, only
- 4) -3, 0, and 3

- 14 The equation $V(t) = 12,000(0.75)^t$ represents the value of a motorcycle t years after it was purchased. Which statement is true?
- 1) The motorcycle cost \$9000 when purchased.
 - 2) The motorcycle cost \$12,000 when purchased.
 - 3) The motorcycle's value is decreasing at a rate of 75% each year.
 - 4) The motorcycle's value is decreasing at a rate of 0.25% each year.
- 15 The solutions to $(x + 4)^2 - 2 = 7$ are
- 1) $-4 \pm \sqrt{5}$
 - 2) $4 \pm \sqrt{5}$
 - 3) -1 and -7
 - 4) 1 and 7
- 16 Which expression is *not* equivalent to $-4x^3 + x^2 - 6x + 8$?
- 1) $x^2(-4x + 1) - 2(3x - 4)$
 - 2) $x(-4x^2 - x + 6) + 8$
 - 3) $-4x^3 + (x - 2)(x - 4)$
 - 4) $-4(x^3 - 2) + x(x - 6)$
- 17 Which situation could be modeled as a linear equation?
- 1) The value of a car decreases by 10% every year.
 - 2) The number of fish in a lake doubles every 5 years.
 - 3) Two liters of water evaporate from a pool every day.
 - 4) The amount of caffeine in a person's body decreases by $\frac{1}{3}$ every 2 hours.
- 18 The range of the function $f(x) = |x + 3| - 5$ is
- 1) $[-5, \infty)$
 - 2) $(-5, \infty)$
 - 3) $[3, \infty)$
 - 4) $(3, \infty)$
- 19 A laboratory technician used the function $t(m) = 2(3)^{2m+1}$ to model her research. Consider the following expressions:
- I. $6(3)^{2m}$ II. $6(6)^{2m}$ III. $6(9)^m$
- The function $t(m)$ is equivalent to
- 1) I, only
 - 2) II, only
 - 3) I and III
 - 4) II and III
- 20 Which system of equations has the same solutions as the system below?
- $$\begin{aligned} 3x - y &= 7 \\ 2x + 3y &= 12 \end{aligned}$$
- 1) $\begin{aligned} 6x - 2y &= 14 \\ -6x + 9y &= 36 \end{aligned}$
 - 2) $\begin{aligned} 18x - 6y &= 42 \\ 4x + 6y &= 24 \end{aligned}$
 - 3) $\begin{aligned} -9x - 3y &= -21 \\ 2x + 3y &= 12 \end{aligned}$
 - 4) $\begin{aligned} 3x - y &= 7 \\ x + y &= 2 \end{aligned}$

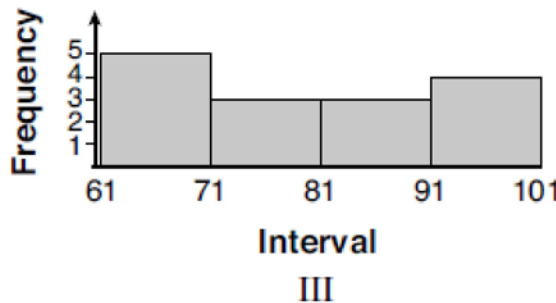
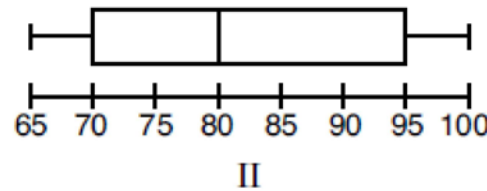
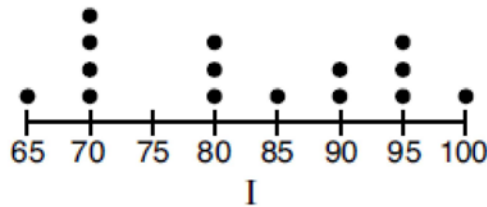
21 A population of paramecia, P , can be modeled using the exponential function $P(t) = 3(2)^t$, where t is the number of days since the population was first observed. Which domain is most appropriate to use to determine the population over the course of the first two weeks?

- 1) $t \geq 0$
- 2) $t \leq 2$
- 3) $0 \leq t \leq 2$
- 4) $0 \leq t \leq 14$

22 Given the following data set:

65, 70, 70, 70, 70, 80, 80, 80, 85, 90, 90, 95, 95, 95, 100

Which representations are correct for this data set?



- 1) I and II
- 2) I and III, only
- 3) II and III, only
- 4) I, II, and III

23 A recursively defined sequence is shown below.

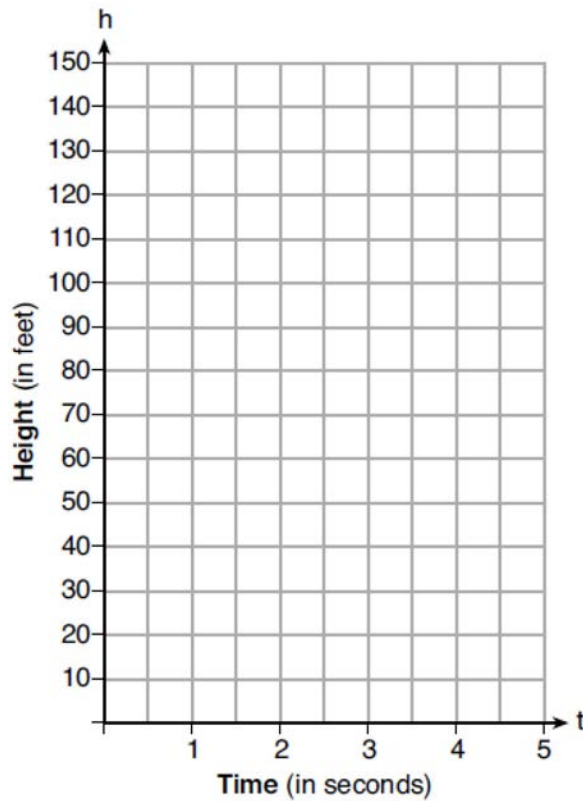
$$a_1 = 5$$

$$a_{n+1} = 2a_n - 7$$

The value of a_4 is

- 1) -9
- 2) -1
- 3) 8
- 4) 15

- 32 A formula for determining the finite sum, S , of an arithmetic sequence of numbers is $S = \frac{n}{2}(a + b)$, where n is the number of terms, a is the first term, and b is the last term. Express b in terms of a , S , and n .
- 33 Michael threw a ball into the air from the top of a building. The height of the ball, in feet, is modeled by the equation $h = -16t^2 + 64t + 60$, where t is the elapsed time, in seconds. Graph this equation on the set of axes below.

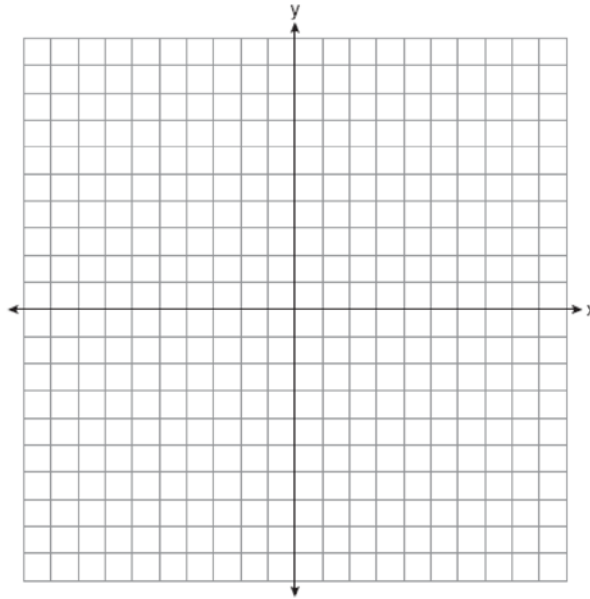


Determine the average rate of change, in feet per second, from when Michael released the ball to when the ball reached its maximum height.

- 34 Graph the system of inequalities:

$$-x + 2y - 4 < 0$$

$$3x + 4y + 4 \geq 0$$



Stephen says the point $(0,0)$ is a solution to this system. Determine if he is correct, and explain your reasoning.

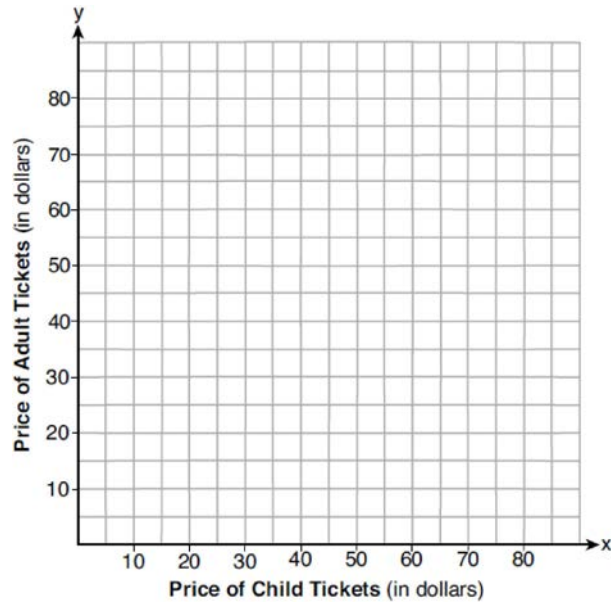
- 35 The following table represents a sample of sale prices, in thousands of dollars, and number of new homes available at that price in 2017.

Sale Price, p (in thousands of dollars)	160	180	200	220	240	260	280
Number of New Homes Available $f(p)$	126	103	82	75	82	40	20

State the linear regression function, $f(p)$, that estimates the number of new homes available at a specific sale price, p . Round all values to the *nearest hundredth*. State the correlation coefficient of the data to the *nearest hundredth*. Explain what this means in the context of the problem.

- 36 The length of a rectangular sign is 6 inches more than half its width. The area of this sign is 432 square inches. Write an equation in one variable that could be used to find the number of inches in the dimensions of this sign. Solve this equation algebraically to determine the dimensions of this sign, in inches.

- 37 Two families went to Rollercoaster World. The Brown family paid \$170 for 3 children and 2 adults. The Peckham family paid \$360 for 4 children and 6 adults. If x is the price of a child's ticket in dollars and y is the price of an adult's ticket in dollars, write a system of equations that models this situation. Graph your system of equations on the set of axes below.



State the coordinates of the point of intersection. Explain what each coordinate of the point of intersection means in the context of the problem.

0120AI

Answer Section

1 ANS: 2

$$f(2) = 2(3^2) + 1 = 19$$

PTS: 2 REF: 012001ai NAT: F.IF.A.2 TOP: Functional Notation

2 ANS: 1 PTS: 2 REF: 012002ai NAT: F.BF.A.1

TOP: Modeling Exponential Functions KEY: AI

3 ANS: 1

$$7x + 2 \geq 58$$

$$7x \geq 56$$

$$x \geq 8$$

PTS: 2 REF: 012003ai NAT: A.REI.B.3 TOP: Interpreting Solutions

4 ANS: 2 PTS: 2 REF: 012004ai NAT: F.IF.A.1

TOP: Defining Functions KEY: ordered pairs

5 ANS: 2

$$\frac{x-3}{4} + \frac{8}{12} = \frac{17}{12}$$

$$\frac{x-3}{4} = \frac{9}{12}$$

$$\frac{x-3}{4} = \frac{3}{4}$$

$$x-3 = 3$$

$$x = 6$$

PTS: 2 REF: 012005ai NAT: A.REI.B.3 TOP: Solving Linear Equations

KEY: fractional expressions

6 ANS: 3

$$18x^2 - 50 = 2(9x^2 - 25) = 2(3x - 5)(3x + 5)$$

PTS: 2 REF: 012006ai NAT: A.SSE.A.2

TOP: Factoring the Difference of Perfect Squares KEY: quadratic

7 ANS: 4 PTS: 2 REF: 012007ai NAT: F.BF.B.3

TOP: Graphing Polynomial Functions

8 ANS: 2

$$a_n = 4n + 8$$

$$a_{35} = 4(35) + 8 = 148$$

PTS: 2 REF: 012008ai NAT: F.IF.A.3 TOP: Sequences

KEY: explicit

- 9 ANS: 2
 $f(x) = x^3 - 9x^2 = x^2(x - 9) = 0$
 $x = 0, 9$
- PTS: 2 REF: 012009ai NAT: A.APR.B.3 TOP: Zeros of Polynomials
- 10 ANS: 3
 $\frac{138}{192} \approx 72\%$
- PTS: 2 REF: 012010ai NAT: S.ID.B.5 TOP: Frequency Tables
KEY: two-way
- 11 ANS: 1 PTS: 2 REF: 012011ai NAT: A.REI.D.10
TOP: Identifying Solutions
- 12 ANS: 4 PTS: 2 REF: 012012ai NAT: A.SSE.A.2
TOP: Factoring Polynomials KEY: quadratic
- 13 ANS: 2
The y -intercept of both $f(x)$ and $g(x)$ is -4 .
- PTS: 2 REF: 012013ai NAT: F.IF.C.9 TOP: Comparing Functions
- 14 ANS: 2 PTS: 2 REF: 012014ai NAT: F.LE.B.5
TOP: Modeling Exponential Functions
- 15 ANS: 3
 $(x + 4)^2 = 9$
 $x + 4 = \pm 3$
 $x = -1, -7$
- PTS: 2 REF: 012015ai NAT: A.REI.B.4 TOP: Solving Quadratics
KEY: taking square roots
- 16 ANS: 2
 $x(-4x^2 - x + 6) + 8 = -4x^3 - x^2 + 6x + 8$
- PTS: 2 REF: 012016ai NAT: A.APR.A.1 TOP: Operations with Polynomials
KEY: multiplication
- 17 ANS: 3 PTS: 2 REF: 012017ai NAT: F.LE.A.1
TOP: Families of Functions
- 18 ANS: 1 PTS: 2 REF: 012018ai NAT: F.IF.A.2
TOP: Domain and Range KEY: real domain, absolute value
- 19 ANS: 3
 $t(m) = 2(3)^{2m+1} = 2(3)^{2m}(3)^1 = 6(3)^{2m} = 6(3^2)^m = 6(9)^m$
- PTS: 2 REF: 012019ai NAT: A.SSE.B.3 TOP: Modeling Exponential Functions

20 ANS: 2
 $6(3x - y = 7)$
 $2(2x + 3y = 12)$

PTS: 2 REF: 012020ai NAT: A.REI.C.6 TOP: Solving Linear Systems

21 ANS: 4 PTS: 2 REF: 012021ai NAT: F.IF.B.5
 TOP: Domain and Range

22 ANS: 4 PTS: 2 REF: 012022ai NAT: S.ID.A.1
 TOP: Dot Plots

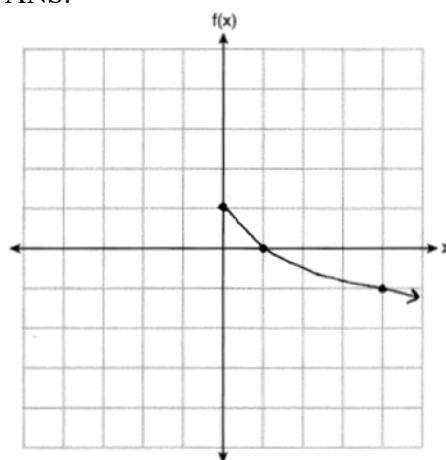
23 ANS: 1
 $a_2 = 2(5) - 7 = 3$ $a_3 = 2(3) - 7 = -1$ $a_4 = 2(-1) - 7 = -9$

PTS: 2 REF: 012023ai NAT: F.IF.A.3 TOP: Sequences
 KEY: recursive

24 ANS: 4
 $4x^3 + x^2 + 2x$

PTS: 2 REF: 012024ai NAT: A.SSE.A.1 TOP: Modeling Expressions

25 ANS:



PTS: 2 REF: 012025ai NAT: F.IF.C.7 TOP: Graphing Root Functions

26 ANS:
 $6.25a + 4.5(45) \leq 550$ 55 shirts
 $6.25a + 202.5 \leq 550$
 $6.25a \leq 347.50$
 $a \leq 55.6$

PTS: 2 REF: 012026ai NAT: A.CED.A.1 TOP: Modeling Linear Inequalities

27 ANS:

$$\frac{4 \text{ pints}}{\text{day}} \times \frac{2 \text{ cups}}{1 \text{ pint}} \times \frac{8 \text{ ounces}}{1 \text{ cup}} \times \frac{7 \text{ days}}{\text{week}} = \frac{448 \text{ ounces}}{\text{week}}$$

PTS: 2 REF: 012027ai NAT: N.Q.A.1 TOP: Conversions
KEY: dimensional analysis

28 ANS:

$$3x^2 + 21x - 4x - 28 - \frac{1}{4}x^2 = 2.75x^2 + 17x - 28$$

PTS: 2 REF: 012028ai NAT: A.APR.A.1 TOP: Operations with Polynomials
KEY: multiplication

29 ANS:

Distributive and Addition Property of Equality

PTS: 2 REF: 012029ai NAT: A.REI.A.1 TOP: Identifying Properties

30 ANS:

The product is irrational because $\sqrt{27}$ can not be written as the ratio of two integers.

PTS: 2 REF: 012030ai NAT: N.RN.B.3 TOP: Operations with Radicals
KEY: classify

31 ANS:

$$x^2 - 8x = -6$$

$$x^2 - 8x + 16 = -6 + 16$$

$$(x - 4)^2 = 10$$

$$x - 4 = \pm\sqrt{10}$$

$$x = 4 \pm \sqrt{10}$$

PTS: 2 REF: 012031ai NAT: A.REI.B.4 TOP: Solving Quadratics
KEY: completing the square

32 ANS:

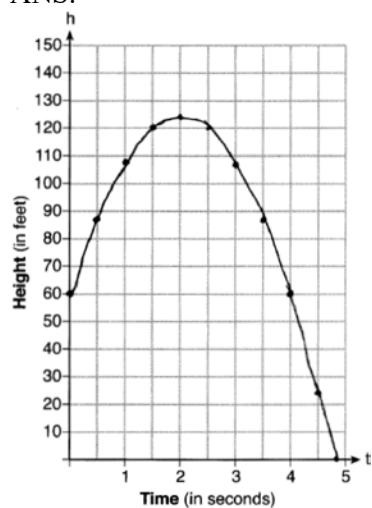
$$2S = n(a + b)$$

$$\frac{2S}{n} = a + b$$

$$\frac{2S}{n} - a = b$$

PTS: 2 REF: 012032ai NAT: A.CED.A.4 TOP: Transforming Formulas

33 ANS:



$$\frac{h(2) - h(0)}{2 - 0} = 32$$

PTS: 4

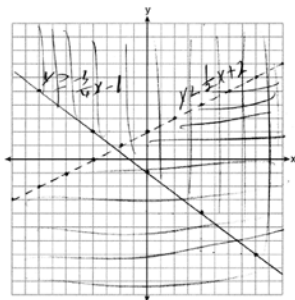
REF: 012033ai

NAT: F.IF.B.4

TOP: Graphing Quadratic Functions

KEY: context

34 ANS:

Correct, as $0 + 2(0) - 4 < 0$

$$3(0) + 4(0) + 4 \geq 0$$

PTS: 4

REF: 012034ai

NAT: A.REI.D.12

TOP: Graphing Systems of Linear Inequalities

KEY: graph

35 ANS:

$f(p) = -.79p + 249.86$ $r = -.95$ There is a strong negative correlation as the higher the sales price, the fewer number of new homes available.

PTS: 4

REF: 012035ai

NAT: S.ID.B.6

TOP: Regression

KEY: linear with correlation coefficient

36 ANS:

$$w\left(\frac{1}{2}w + 6\right) = 432 \quad \frac{1}{2}w^2 + 6w = 432 \quad l = \frac{1}{2}(24) + 6 = 18$$

$$w^2 + 12w - 864 = 0$$

$$(w - 24)(w + 36) = 0$$

$$w = 24$$

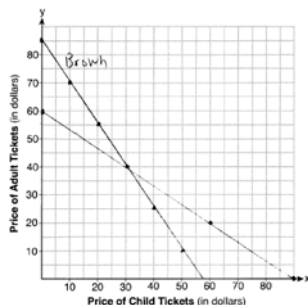
PTS: 4

REF: 012036ai

NAT: A.CED.A.1

TOP: Geometric Applications of Quadratics

37 ANS:



$$3x + 2y = 170$$

$$4x + 6y = 360$$

ticket is \$40.

(30,40) The price of a child's ticket is \$30 and the price of an adult's

PTS: 6

REF: 012037ai

NAT: A.REI.C.6

TOP: Graphing Linear Systems