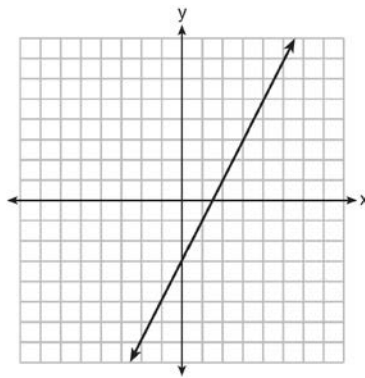


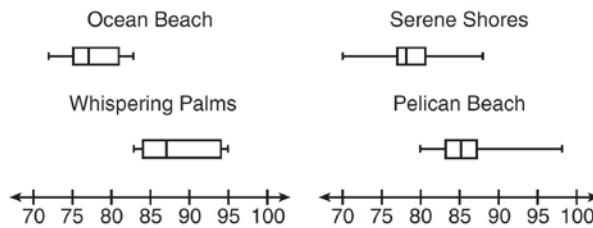


- 6 Which domain would be the most appropriate set to use for a function that predicts the number of household online-devices in terms of the number of people in the household?
- 1) integers
  - 2) whole numbers
  - 3) irrational numbers
  - 4) rational numbers
- 7 The inequality  $7 - \frac{2}{3}x < x - 8$  is equivalent to
- 1)  $x > 9$
  - 2)  $x > -\frac{3}{5}$
  - 3)  $x < 9$
  - 4)  $x < -\frac{3}{5}$
- 8 The value in dollars,  $v(x)$ , of a certain car after  $x$  years is represented by the equation  $v(x) = 25,000(0.86)^x$ . To the nearest dollar, how much more is the car worth after 2 years than after 3 years?
- 1) 2589
  - 2) 6510
  - 3) 15,901
  - 4) 18,490
- 9 Which function has the same  $y$ -intercept as the graph below?



- 1)  $y = \frac{12 - 6x}{4}$
  - 2)  $27 + 3y = 6x$
  - 3)  $6y + x = 18$
  - 4)  $y + 3 = 6x$
- 10 Fred is given a rectangular piece of paper. If the length of Fred's piece of paper is represented by  $2x - 6$  and the width is represented by  $3x - 5$ , then the paper has a total area represented by
- 1)  $5x - 11$
  - 2)  $6x^2 - 28x + 30$
  - 3)  $10x - 22$
  - 4)  $6x^2 - 6x - 11$
- 11 The graph of a linear equation contains the points  $(3, 11)$  and  $(-2, 1)$ . Which point also lies on the graph?
- 1)  $(2, 1)$
  - 2)  $(2, 4)$
  - 3)  $(2, 6)$
  - 4)  $(2, 9)$

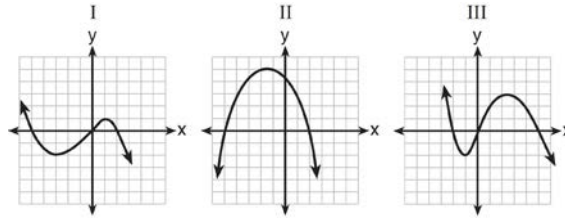
- 12 How does the graph of  $f(x) = 3(x - 2)^2 + 1$  compare to the graph of  $g(x) = x^2$ ?
- 1) The graph of  $f(x)$  is wider than the graph of  $g(x)$ , and its vertex is moved to the left 2 units and up 1 unit.
  - 2) The graph of  $f(x)$  is narrower than the graph of  $g(x)$ , and its vertex is moved to the right 2 units and up 1 unit.
  - 3) The graph of  $f(x)$  is narrower than the graph of  $g(x)$ , and its vertex is moved to the left 2 units and up 1 unit.
  - 4) The graph of  $f(x)$  is wider than the graph of  $g(x)$ , and its vertex is moved to the right 2 units and up 1 unit.
- 13 Connor wants to attend the town carnival. The price of admission to the carnival is \$4.50, and each ride costs an additional 79 cents. If he can spend at most \$16.00 at the carnival, which inequality can be used to solve for  $r$ , the number of rides Connor can go on, and what is the maximum number of rides he can go on?
- 1)  $0.79 + 4.50r \leq 16.00$ ; 3 rides
  - 2)  $0.79 + 4.50r \leq 16.00$ ; 4 rides
  - 3)  $4.50 + 0.79r \leq 16.00$ ; 14 rides
  - 4)  $4.50 + 0.79r \leq 16.00$ ; 15 rides
- 14 Corinne is planning a beach vacation in July and is analyzing the daily high temperatures for her potential destination. She would like to choose a destination with a high median temperature and a small interquartile range. She constructed box plots shown in the diagram below.



- Which destination has a median temperature above 80 degrees and the smallest interquartile range?
- 1) Ocean Beach
  - 2) Whispering Palms
  - 3) Serene Shores
  - 4) Pelican Beach
- 15 Some banks charge a fee on savings accounts that are left inactive for an extended period of time. The equation  $y = 5000(0.98)^x$  represents the value,  $y$ , of one account that was left inactive for a period of  $x$  years. What is the  $y$ -intercept of this equation and what does it represent?
- 1) 0.98, the percent of money in the account initially
  - 2) 0.98, the percent of money in the account after  $x$  years
  - 3) 5000, the amount of money in the account initially
  - 4) 5000, the amount of money in the account after  $x$  years
- 16 The equation for the volume of a cylinder is  $V = \pi r^2 h$ . The positive value of  $r$ , in terms of  $h$  and  $V$ , is
- 1)  $r = \sqrt{\frac{V}{\pi h}}$
  - 2)  $r = \sqrt{V\pi h}$
  - 3)  $r = 2V\pi h$
  - 4)  $r = \frac{V}{2\pi}$



- 24 A polynomial function contains the factors  $x$ ,  $x - 2$ , and  $x + 5$ . Which graph(s) below could represent the graph of this function?



- 1) I, only  
 2) II, only  
 3) I and III  
 4) I, II, and III
- 25 Ms. Fox asked her class "Is the sum of 4.2 and  $\sqrt{2}$  rational or irrational?" Patrick answered that the sum would be irrational. State whether Patrick is correct or incorrect. Justify your reasoning.
- 26 The school newspaper surveyed the student body for an article about club membership. The table below shows the number of students in each grade level who belong to one or more clubs.

	<b>1 Club</b>	<b>2 Clubs</b>	<b>3 or More Clubs</b>
9 <sup>th</sup>	90	33	12
10 <sup>th</sup>	125	12	15
11 <sup>th</sup>	87	22	18
12 <sup>th</sup>	75	27	23

If there are 180 students in ninth grade, what percentage of the ninth grade students belong to more than one club?

- 27 A function is shown in the table below.

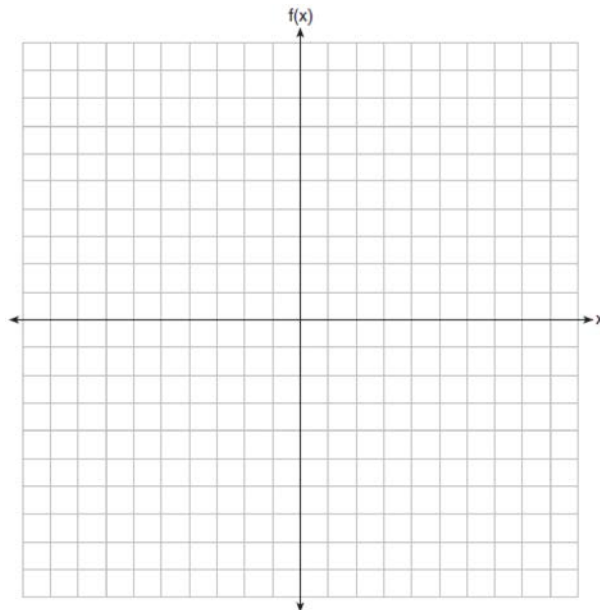
<b>x</b>	<b>f(x)</b>
-4	2
-1	-4
0	-2
3	16

If included in the table, which ordered pair,  $(-4, 1)$  or  $(1, -4)$ , would result in a relation that is no longer a function? Explain your answer.

- 28 Subtract  $5x^2 + 2x - 11$  from  $3x^2 + 8x - 7$ . Express the result as a trinomial.
- 29 Solve the equation  $4x^2 - 12x = 7$  algebraically for  $x$ .

- 30 Graph the following function on the set of axes below.

$$f(x) = \begin{cases} |x|, & -3 \leq x < 1 \\ 4, & 1 \leq x \leq 8 \end{cases}$$



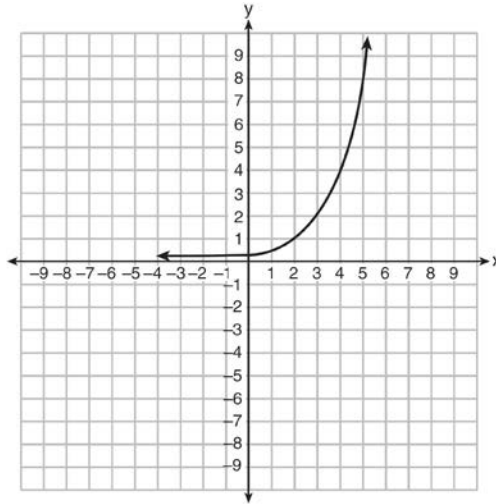
- 31 A gardener is planting two types of trees:

Type *A* is three feet tall and grows at a rate of 15 inches per year.

Type *B* is four feet tall and grows at a rate of 10 inches per year.

Algebraically determine exactly how many years it will take for these trees to be the same height.

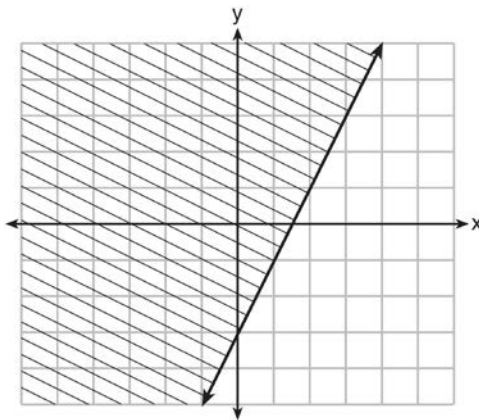
32 Write an exponential equation for the graph shown below.



Explain how you determined the equation.

33 Jacob and Zachary go to the movie theater and purchase refreshments for their friends. Jacob spends a total of \$18.25 on two bags of popcorn and three drinks. Zachary spends a total of \$27.50 for four bags of popcorn and two drinks. Write a system of equations that can be used to find the price of one bag of popcorn and the price of one drink. Using these equations, determine and state the price of a bag of popcorn and the price of a drink, to the *nearest cent*.

34 The graph of an inequality is shown below.



- Write the inequality represented by the graph.
- On the same set of axes, graph the inequality  $x + 2y < 4$ .
- The two inequalities graphed on the set of axes form a system. Oscar thinks that the point  $(2, 1)$  is in the solution set for this system of inequalities. Determine and state whether you agree with Oscar. Explain your reasoning.

- 35 A nutritionist collected information about different brands of beef hot dogs. She made a table showing the number of Calories and the amount of sodium in each hot dog.

Calories per Beef Hot Dog	Milligrams of Sodium per Beef Hot Dog
186	495
181	477
176	425
149	322
184	482
190	587
158	370
139	322

- a) Write the correlation coefficient for the line of best fit. Round your answer to the *nearest hundredth*.  
b) Explain what the correlation coefficient suggests in the context of this problem.
- 36 a) Given the function  $f(x) = -x^2 + 8x + 9$ , state whether the vertex represents a maximum or minimum point for the function. Explain your answer.  
b) Rewrite  $f(x)$  in vertex form by completing the square.
- 37 New Clarendon Park is undergoing renovations to its gardens. One garden that was originally a square is being adjusted so that one side is doubled in length, while the other side is decreased by three meters. The new rectangular garden will have an area that is 25% more than the original square garden. Write an equation that could be used to determine the length of a side of the original square garden. Explain how your equation models the situation. Determine the area, in square meters, of the new rectangular garden.



## 0115AI

## Answer Section

- 1 ANS: 2                   PTS: 2                   REF: 011501ai           NAT: F.LE.B.5  
TOP: Modeling Linear Functions
- 2 ANS: 2                   PTS: 2                   REF: 011502ai           NAT: N.Q.A.1  
TOP: Conversions   KEY: dimensional analysis
- 3 ANS: 4                   PTS: 2                   REF: 011503ai           NAT: A.REI.B.4  
TOP: Solving Quadratics           KEY: factoring
- 4 ANS: 1                   PTS: 2                   REF: 011504ai           NAT: F.BF.A.1  
TOP: Modeling Exponential Functions
- 5 ANS: 3                   PTS: 2                   REF: 011505ai           NAT: F.LE.A.1  
TOP: Families of Functions
- 6 ANS: 2                   PTS: 2                   REF: 011506ai           NAT: F.IF.B.5  
TOP: Domain and Range
- 7 ANS: 1  
 $7 - \frac{2}{3}x < x - 8$   
 $15 < \frac{5}{3}x$   
 $9 < x$   
  
PTS: 2                   REF: 011507ai           NAT: A.REI.B.3           TOP: Solving Linear Inequalities
- 8 ANS: 1  
 $25,000(0.86)^2 - 25,000(0.86)^3 = 18490 - 15901.40 = 2588.60$   
  
PTS: 2                   REF: 011508ai           NAT: F.IF.A.2           TOP: Functional Notation
- 9 ANS: 4  
 $y + 3 = 6(0)$   
 $y = -3$   
  
PTS: 2                   REF: 011509ai           NAT: F.IF.B.4           TOP: Graphing Linear Functions
- 10 ANS: 2                   PTS: 2                   REF: 011510ai           NAT: A.APR.A.1  
TOP: Operations with Polynomials   KEY: multiplication
- 11 ANS: 4  
 $m = \frac{11 - 1}{3 - (-2)} = \frac{10}{5} = 2$     $y = mx + b$     $y = 2x + 5$   
 $11 = 2(3) + b$     $9 = 2(2) + 5$   
 $5 = b$   
  
PTS: 2                   REF: 011511ai           NAT: A.REI.D.10       TOP: Writing Linear Equations  
KEY: other forms
- 12 ANS: 2                   PTS: 2                   REF: 011512ai           NAT: F.BF.B.3  
TOP: Graphing Polynomial Functions

- 13 ANS: 3                   PTS: 2                   REF: 011513ai           NAT: A.CED.A.1  
TOP: Modeling Linear Inequalities
- 14 ANS: 4                   PTS: 2                   REF: 011514ai           NAT: S.ID.A.2  
TOP: Central Tendency and Dispersion
- 15 ANS: 3                   PTS: 2                   REF: 011515ai           NAT: F.LE.B.5  
TOP: Modeling Exponential Functions
- 16 ANS: 1                   PTS: 2                   REF: 011516ai           NAT: A.CED.A.4  
TOP: Transforming Formulas
- 17 ANS: 4  
 $x^2 + 6x = 7$   
 $x^2 + 6x + 9 = 7 + 9$   
 $(x + 3)^2 = 16$   
  
PTS: 2                   REF: 011517ai           NAT: A.REI.B.4           TOP: Solving Quadratics  
KEY: completing the square
- 18 ANS: 3                   PTS: 2                   REF: 011518ai           NAT: A.REI.D.11  
TOP: Other Systems
- 19 ANS: 4  
 $16^{2t} = n^{4t}$   
 $(16^2)^t = (n^4)^t$   
 $((4^2)^2)^t = ((n^2)^2)^t$   
  
PTS: 2                   REF: 011519ai           NAT: A.SSE.B.3           TOP: Modeling Exponential Functions
- 20 ANS: 3  
 $f(0 + 1) = -2f(0) + 3 = -2(2) + 3 = -1$   
 $f(1 + 1) = -2f(1) + 3 = -2(-1) + 3 = 5$   
  
PTS: 2                   REF: 011520ai           NAT: F.IF.A.3           TOP: Sequences  
KEY: recursive
- 21 ANS: 1  
 $\frac{0.8(10^2) - 0.8(5^2)}{10 - 5} = \frac{80 - 20}{5} = 12$   
  
PTS: 2                   REF: 011521ai           NAT: F.IF.B.6           TOP: Rate of Change
- 22 ANS: 3                   PTS: 2                   REF: 011522ai           NAT: A.SSE.A.2  
TOP: Factoring the Difference of Perfect Squares           KEY: higher power
- 23 ANS: 4                   PTS: 2                   REF: 011523ai           NAT: F.BF.A.1  
TOP: Modeling Linear Functions
- 24 ANS: 1                   PTS: 2                   REF: 011524ai           NAT: A.APR.B.3  
TOP: Graphing Polynomial Functions

- 25 ANS:  
Correct. The sum of a rational and irrational is irrational.

PTS: 2 REF: 011525ai NAT: N.RN.B.3 TOP: Operations with Radicals  
KEY: classify

- 26 ANS:  
 $\frac{33+12}{180} = 25\%$

PTS: 2 REF: 011526ai NAT: S.ID.B.5 TOP: Frequency Tables  
KEY: two-way

- 27 ANS:  
(-4, 1), because then every element of the domain is not assigned one unique element in the range.

PTS: 2 REF: 011527ai NAT: F.IF.A.1 TOP: Defining Functions  
KEY: ordered pairs

- 28 ANS:  
 $-2x^2 + 6x + 4$

PTS: 2 REF: 011528ai NAT: A.APR.A.1 TOP: Operations with Polynomials  
KEY: subtraction

- 29 ANS:  
 $4x^2 - 12x - 7 = 0$

$$(4x^2 - 14x) + (2x - 7) = 0$$

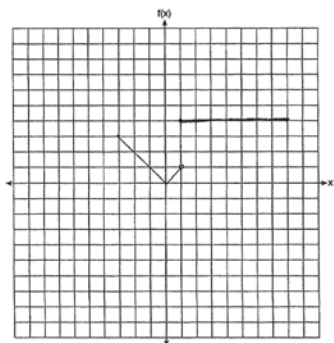
$$2x(2x - 7) + (2x - 7) = 0$$

$$(2x + 1)(2x - 7) = 0$$

$$x = -\frac{1}{2}, \frac{7}{2}$$

PTS: 2 REF: 011529ai NAT: A.REI.B.4 TOP: Solving Quadratics  
KEY: factoring

- 30 ANS:



PTS: 2 REF: 011530ai NAT: F.IF.C.7 TOP: Graphing Piecewise-Defined Functions

31 ANS:  
 $15x + 36 = 10x + 48$   
 $5x = 12$   
 $x = 2.4$

PTS: 2 REF: 011531ai NAT: A.CED.A.1 TOP: Modeling Linear Equations

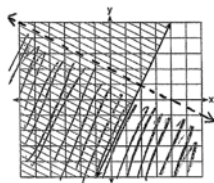
32 ANS:  
 $y = 0.25(2)^x$ . I inputted the four integral values from the graph into my graphing calculator and determined the exponential regression equation.

PTS: 2 REF: 011532ai NAT: F.LE.A.2 TOP: Modeling Exponential Functions

33 ANS:  
 $2p + 3d = 18.25$   $4p + 6d = 36.50$   $4p + 2(2.25) = 27.50$   
 $4p + 2d = 27.50$   $4p + 2d = 27.50$   $4p = 23$   
 $4d = 9$   $p = 5.75$   
 $d = 2.25$

PTS: 4 REF: 011533ai NAT: A.CED.A.3 TOP: Modeling Linear Systems

34 ANS:



$y \geq 2x - 3$ . Oscar is wrong.  $(2) + 2(1) < 4$  is not true.

PTS: 4 REF: 011534ai NAT: A.REI.D.12 TOP: Graphing Systems of Linear Inequalities  
 KEY: graph

35 ANS:  
 $r \approx 0.94$ . The correlation coefficient suggests that as calories increase, so does sodium.

PTS: 4 REF: 011535ai NAT: S.ID.C.8 TOP: Correlation Coefficient

36 ANS:  
 The vertex represents a maximum since  $a < 0$ .  $f(x) = -x^2 + 8x + 9$   
 $= -(x^2 - 8x - 9)$   
 $= -(x^2 - 8x + 16) + 9 + 16$   
 $= -(x - 4)^2 + 25$

PTS: 4 REF: 011536ai NAT: F.IF.C.8 TOP: Vertex Form of a Quadratic

37 ANS:

$(x - 3)(2x) = 1.25x^2$  Because the original garden is a square,  $x^2$  represents the original area,  $x - 3$  represents the side decreased by 3 meters,  $2x$  represents the doubled side, and  $1.25x^2$  represents the new garden with an area 25% larger.  $(x - 3)(2x) = 1.25x^2$   $1.25(8)^2 = 80$

$$2x^2 - 6x = 1.25x^2$$

$$.75x^2 - 6x = 0$$

$$x^2 - 8x = 0$$

$$x(x - 8) = 0$$

$$x = 8$$

PTS: 6

REF: 011537ai

NAT: A.CED.A.1

TOP: Geometric Applications of Quadratics