

JMAP REGENTS BY TYPE

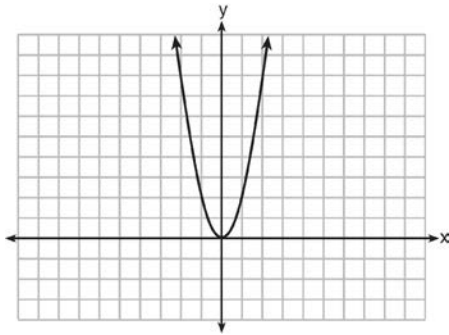
The NY Algebra 1 Regents Exams Questions
from Fall 2013 to January 2015 Sorted by Type

www.jmap.org

Algebra 1 Common Core State Standards Multiple Choice Regents Exam Questions

- 1 If the quadratic formula is used to find the roots of the equation $x^2 - 6x - 19 = 0$, the correct roots are
- 1) $3 \pm 2\sqrt{7}$
 - 2) $-3 \pm 2\sqrt{7}$
 - 3) $3 \pm 4\sqrt{14}$
 - 4) $-3 \pm 4\sqrt{14}$

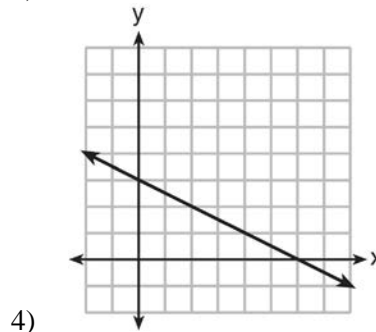
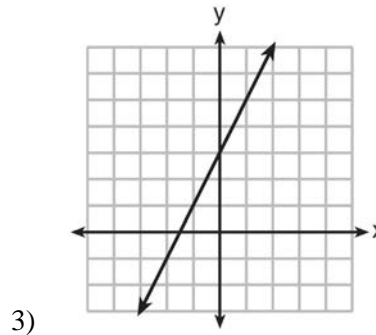
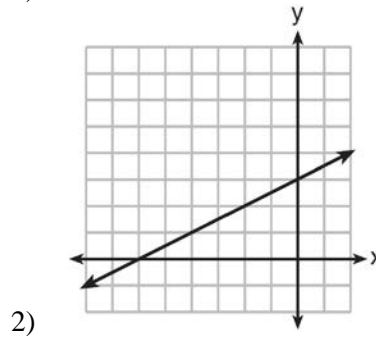
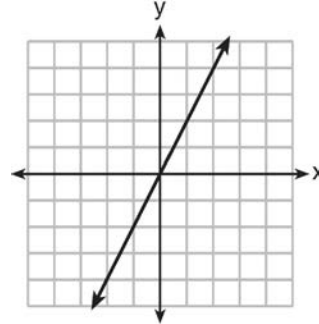
- 2 The graph of the equation $y = ax^2$ is shown below.



If a is multiplied by $-\frac{1}{2}$, the graph of the new equation is

- 1) wider and opens downward
 - 2) wider and opens upward
 - 3) narrower and opens downward
 - 4) narrower and opens upward
- 3 Let f be a function such that $f(x) = 2x - 4$ is defined on the domain $2 \leq x \leq 6$. The range of this function is
- 1) $0 \leq y \leq 8$
 - 2) $0 \leq y < \infty$
 - 3) $2 \leq y \leq 6$
 - 4) $-\infty < y < \infty$

- 4 Which graph shows a line where each value of y is three more than half of x ?



5 What is the value of x in the equation

$$\frac{x-2}{3} + \frac{1}{6} = \frac{5}{6}?$$

- 1) 4
- 2) 6
- 3) 8
- 4) 11

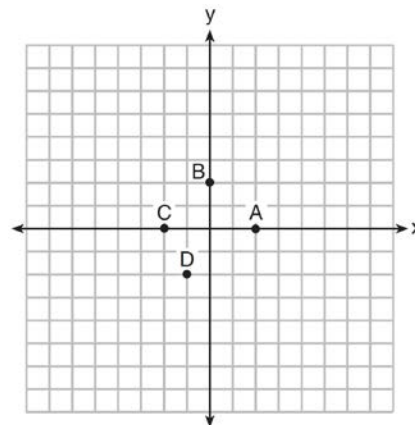
6 How does the graph of $f(x) = 3(x-2)^2 + 1$ compare to the graph of $g(x) = x^2$?

- 1) The graph of $f(x)$ is wider than the graph of $g(x)$, and its vertex is moved to the left 2 units and up 1 unit.
- 2) The graph of $f(x)$ is narrower than the graph of $g(x)$, and its vertex is moved to the right 2 units and up 1 unit.
- 3) The graph of $f(x)$ is narrower than the graph of $g(x)$, and its vertex is moved to the left 2 units and up 1 unit.
- 4) The graph of $f(x)$ is wider than the graph of $g(x)$, and its vertex is moved to the right 2 units and up 1 unit.

7 Connor wants to attend the town carnival. The price of admission to the carnival is \$4.50, and each ride costs an additional 79 cents. If he can spend at most \$16.00 at the carnival, which inequality can be used to solve for r , the number of rides Connor can go on, and what is the maximum number of rides he can go on?

- 1) $0.79 + 4.50r \leq 16.00$; 3 rides
- 2) $0.79 + 4.50r \leq 16.00$; 4 rides
- 3) $4.50 + 0.79r \leq 16.00$; 14 rides
- 4) $4.50 + 0.79r \leq 16.00$; 15 rides

8 The graph of $y = f(x)$ is shown below.



Which point could be used to find $f(2)$?

- 1) A
- 2) B
- 3) C
- 4) D

9 The table below shows the average yearly balance in a savings account where interest is compounded annually. No money is deposited or withdrawn after the initial amount is deposited.

Year	Balance, in Dollars
0	380.00
10	562.49
20	832.63
30	1232.49
40	1824.39
50	2700.54

Which type of function best models the given data?

- 1) linear function with a negative rate of change
- 2) linear function with a positive rate of change
- 3) exponential decay function
- 4) exponential growth function

Algebra 1 CCSS Multiple Choice Regents Exam Questions

www.jmap.org

10 Which domain would be the most appropriate set to use for a function that predicts the number of household online-devices in terms of the number of people in the household?

- 1) integers
- 2) whole numbers
- 3) irrational numbers
- 4) rational numbers

11 The zeros of the function $f(x) = (x + 2)^2 - 25$ are

- 1) -2 and 5
- 2) -3 and 7
- 3) -5 and 2
- 4) -7 and 3

12 The function $h(t) = -16t^2 + 144$ represents the height, $h(t)$, in feet, of an object from the ground at t seconds after it is dropped. A realistic domain for this function is

- 1) $-3 \leq t \leq 3$
- 2) $0 \leq t \leq 3$
- 3) $0 \leq h(t) \leq 144$
- 4) all real numbers

13 Which equation has the same solutions as

$$2x^2 + x - 3 = 0$$

- 1) $(2x - 1)(x + 3) = 0$
- 2) $(2x + 1)(x - 3) = 0$
- 3) $(2x - 3)(x + 1) = 0$
- 4) $(2x + 3)(x - 1) = 0$

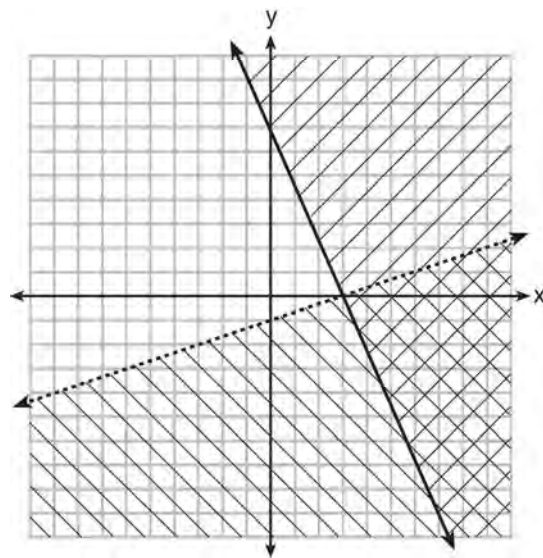
14 The equation for the volume of a cylinder is $V = \pi r^2 h$. The positive value of r , in terms of h and V , is

- 1) $r = \sqrt{\frac{V}{\pi h}}$
- 2) $r = \sqrt{V\pi h}$
- 3) $r = 2V\pi h$
- 4) $r = \frac{V}{2\pi}$

15 If $4x^2 - 100 = 0$, the roots of the equation are

- 1) -25 and 25
- 2) -25, only
- 3) -5 and 5
- 4) -5, only

16 What is one point that lies in the solution set of the system of inequalities graphed below?



- 1) (7, 0)
- 2) (3, 0)
- 3) (0, 7)
- 4) (-3, 5)

17 Which table of values represents a linear relationship?

1)

x	f(x)
-1	-3
0	-2
1	1
2	6
3	13

2)

x	f(x)
-1	$\frac{1}{2}$
0	1
1	2
2	4
3	8

3)

x	f(x)
-1	-3
0	-1
1	1
2	3
3	5

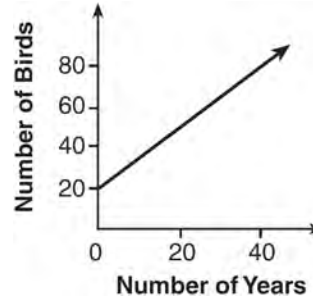
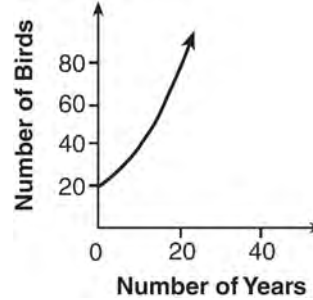
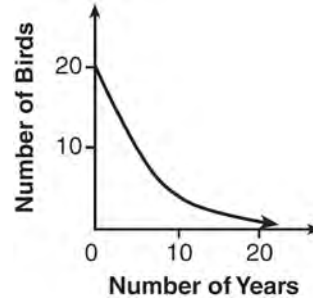
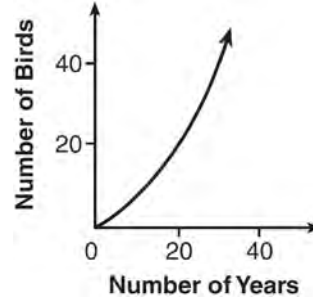
4)

x	f(x)
-1	-1
0	0
1	1
2	8
3	27

18 Which point is *not* on the graph represented by $y = x^2 + 3x - 6$?

- 1) (-6, 12)
- 2) (-4, -2)
- 3) (2, 4)
- 4) (3, -6)

19 A population that initially has 20 birds approximately doubles every 10 years. Which graph represents this population growth?



- 20 The table below shows the average diameter of a pupil in a person's eye as he or she grows older.

Age (years)	Average Pupil Diameter (mm)
20	4.7
30	4.3
40	3.9
50	3.5
60	3.1
70	2.7
80	2.3

What is the average rate of change, in millimeters per year, of a person's pupil diameter from age 20 to age 80?

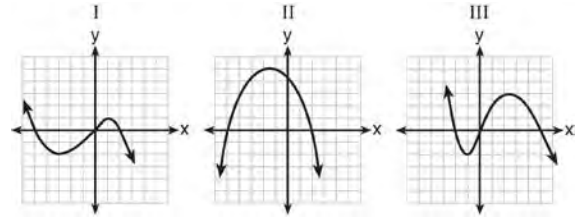
- 1) 2.4
 - 2) 0.04
 - 3) -2.4
 - 4) -0.04
- 21 Peyton is a sprinter who can run the 40-yard dash in 4.5 seconds. He converts his speed into miles per hour, as shown below.

$$\frac{40 \text{ yd}}{4.5 \text{ sec}} \cdot \frac{3 \text{ ft}}{1 \text{ yd}} \cdot \frac{5280 \text{ ft}}{1 \text{ mi}} \cdot \frac{60 \text{ sec}}{1 \text{ min}} \cdot \frac{60 \text{ min}}{1 \text{ hr}}$$

Which ratio is *incorrectly* written to convert his speed?

- 1) $\frac{3 \text{ ft}}{1 \text{ yd}}$
- 2) $\frac{5280 \text{ ft}}{1 \text{ mi}}$
- 3) $\frac{60 \text{ sec}}{1 \text{ min}}$
- 4) $\frac{60 \text{ min}}{1 \text{ hr}}$

- 22 A polynomial function contains the factors x , $x - 2$, and $x + 5$. Which graph(s) below could represent the graph of this function?



- 1) I, only
 - 2) II, only
 - 3) I and III
 - 4) I, II, and III
- 23 The owner of a small computer repair business has one employee, who is paid an hourly rate of \$22. The owner estimates his weekly profit using the function $P(x) = 8600 - 22x$. In this function, x represents the number of
- 1) computers repaired per week
 - 2) hours worked per week
 - 3) customers served per week
 - 4) days worked per week

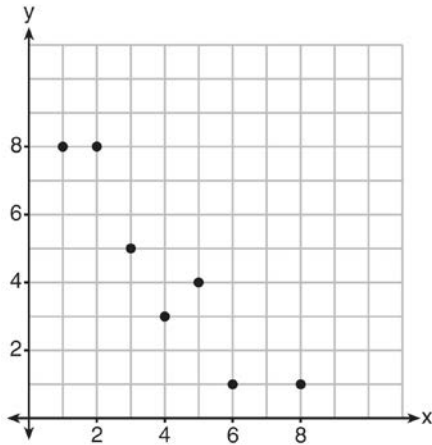
- 24 Fred is given a rectangular piece of paper. If the length of Fred's piece of paper is represented by $2x - 6$ and the width is represented by $3x - 5$, then the paper has a total area represented by
- 1) $5x - 11$
 - 2) $6x^2 - 28x + 30$
 - 3) $10x - 22$
 - 4) $6x^2 - 6x - 11$

Algebra 1 CCSS Multiple Choice Regents Exam Questions

www.jmap.org

- 25 If $f(1) = 3$ and $f(n) = -2f(n - 1) + 1$, then $f(5) =$
- 1) -5
 - 2) 11
 - 3) 21
 - 4) 43
- 26 The length of the shortest side of a right triangle is 8 inches. The lengths of the other two sides are represented by consecutive odd integers. Which equation could be used to find the lengths of the other sides of the triangle?
- 1) $8^2 + (x + 1) = x^2$
 - 2) $x^2 + 8^2 = (x + 1)^2$
 - 3) $8^2 + (x + 2) = x^2$
 - 4) $x^2 + 8^2 = (x + 2)^2$
- 27 If $f(x) = \frac{1}{3}x + 9$, which statement is always true?
- 1) $f(x) < 0$
 - 2) $f(x) > 0$
 - 3) If $x < 0$, then $f(x) < 0$.
 - 4) If $x > 0$, then $f(x) > 0$.
- 28 Krystal was given \$3000 when she turned 2 years old. Her parents invested it at a 2% interest rate compounded annually. No deposits or withdrawals were made. Which expression can be used to determine how much money Krystal had in the account when she turned 18?
- 1) $3000(1 + 0.02)^{16}$
 - 2) $3000(1 - 0.02)^{16}$
 - 3) $3000(1 + 0.02)^{18}$
 - 4) $3000(1 - 0.02)^{18}$
- 29 Officials in a town use a function, C , to analyze traffic patterns. $C(n)$ represents the rate of traffic through an intersection where n is the number of observed vehicles in a specified time interval. What would be the most appropriate domain for the function?
- 1) $\{\dots - 2, -1, 0, 1, 2, 3, \dots\}$
 - 2) $\{-2, -1, 0, 1, 2, 3\}$
 - 3) $\{0, \frac{1}{2}, 1, 1\frac{1}{2}, 2, 2\frac{1}{2}\}$
 - 4) $\{0, 1, 2, 3, \dots\}$
- 30 The value of the x -intercept for the graph of $4x - 5y = 40$ is
- 1) 10
 - 2) $\frac{4}{5}$
 - 3) $-\frac{4}{5}$
 - 4) -8
- 31 The formula for the volume of a cone is $V = \frac{1}{3}\pi r^2 h$. The radius, r , of the cone may be expressed as
- 1) $\sqrt{\frac{3V}{\pi h}}$
 - 2) $\sqrt{\frac{V}{3\pi h}}$
 - 3) $3\sqrt{\frac{V}{\pi h}}$
 - 4) $\frac{1}{3}\sqrt{\frac{V}{\pi h}}$

- 32 What is the correlation coefficient of the linear fit of the data shown below, to the *nearest hundredth*?



- 1) 1.00
 2) 0.93
 3) -0.93
 4) -1.00
- 33 Two functions, $y = |x - 3|$ and $3x + 3y = 27$, are graphed on the same set of axes. Which statement is true about the solution to the system of equations?
- 1) $(3, 0)$ is the solution to the system because it satisfies the equation $y = |x - 3|$.
 2) $(9, 0)$ is the solution to the system because it satisfies the equation $3x + 3y = 27$.
 3) $(6, 3)$ is the solution to the system because it satisfies both equations.
 4) $(3, 0)$, $(9, 0)$, and $(6, 3)$ are the solutions to the system of equations because they all satisfy at least one of the equations.

- 34 John has four more nickels than dimes in his pocket, for a total of \$1.25. Which equation could be used to determine the number of dimes, x , in his pocket?

- 1) $0.10(x + 4) + 0.05(x) = \1.25
 2) $0.05(x + 4) + 0.10(x) = \1.25
 3) $0.10(4x) + 0.05(x) = \$1.25$
 4) $0.05(4x) + 0.10(x) = \$1.25$

- 35 A cell phone company charges \$60.00 a month for up to 1 gigabyte of data. The cost of additional data is \$0.05 per megabyte. If d represents the number of additional megabytes used and c represents the total charges at the end of the month, which linear equation can be used to determine a user's monthly bill?

- 1) $c = 60 - 0.05d$
 2) $c = 60.05d$
 3) $c = 60d - 0.05$
 4) $c = 60 + 0.05d$

- 36 A company produces x units of a product per month, where $C(x)$ represents the total cost and $R(x)$ represents the total revenue for the month. The functions are modeled by $C(x) = 300x + 250$ and $R(x) = -0.5x^2 + 800x - 100$. The profit is the difference between revenue and cost where $P(x) = R(x) - C(x)$. What is the total profit, $P(x)$, for the month?

- 1) $P(x) = -0.5x^2 + 500x - 150$
 2) $P(x) = -0.5x^2 + 500x - 350$
 3) $P(x) = -0.5x^2 - 500x + 350$
 4) $P(x) = -0.5x^2 + 500x + 350$

Algebra 1 CCSS Multiple Choice Regents Exam Questions

www.jmap.org

- 37 If $A = 3x^2 + 5x - 6$ and $B = -2x^2 - 6x + 7$, then $A - B$ equals
- 1) $-5x^2 - 11x + 13$
 - 2) $5x^2 + 11x - 13$
 - 3) $-5x^2 - x + 1$
 - 4) $5x^2 - x + 1$

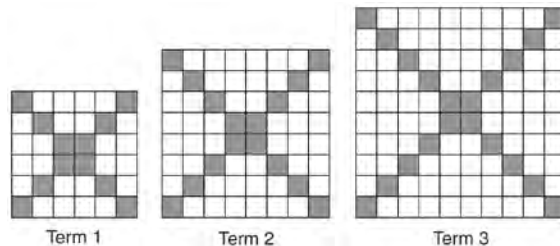
- 38 The table below shows the number of grams of carbohydrates, x , and the number of Calories, y , of six different foods.

Carbohydrates (x)	Calories (y)
8	120
9.5	138
10	147
6	88
7	108
4	62

Which equation best represents the line of best fit for this set of data?

- 1) $y = 15x$
 - 2) $y = 0.07x$
 - 3) $y = 0.1x - 0.4$
 - 4) $y = 14.1x + 5.8$
- 39 If a sequence is defined recursively by $f(0) = 2$ and $f(n + 1) = -2f(n) + 3$ for $n \geq 0$, then $f(2)$ is equal to
- 1) 1
 - 2) -11
 - 3) 5
 - 4) 17

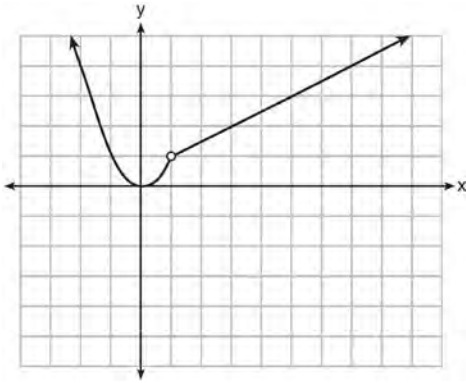
- 40 The diagrams below represent the first three terms of a sequence.



Assuming the pattern continues, which formula determines a_n , the number of shaded squares in the n th term?

- 1) $a_n = 4n + 12$
 - 2) $a_n = 4n + 8$
 - 3) $a_n = 4n + 4$
 - 4) $a_n = 4n + 2$
- 41 During the 2010 season, football player McGee's earnings, m , were 0.005 million dollars more than those of his teammate Fitzpatrick's earnings, f . The two players earned a total of 3.95 million dollars. Which system of equations could be used to determine the amount each player earned, in millions of dollars?
- 1) $m + f = 3.95$
 $m + 0.005 = f$
 - 2) $m - 3.95 = f$
 $f + 0.005 = m$
 - 3) $f - 3.95 = m$
 $m + 0.005 = f$
 - 4) $m + f = 3.95$
 $f + 0.005 = m$

42 A function is graphed on the set of axes below.



Which function is related to the graph?

- 1) $f(x) = \begin{cases} x^2, & x < 1 \\ x - 2, & x > 1 \end{cases}$
- 2) $f(x) = \begin{cases} x^2, & x < 1 \\ \frac{1}{2}x + \frac{1}{2}, & x > 1 \end{cases}$
- 3) $f(x) = \begin{cases} x^2, & x < 1 \\ 2x - 7, & x > 1 \end{cases}$
- 4) $f(x) = \begin{cases} x^2, & x < 1 \\ \frac{3}{2}x - \frac{9}{2}, & x > 1 \end{cases}$

43 For which function defined by a polynomial are the zeros of the polynomial -4 and -6 ?

- 1) $y = x^2 - 10x - 24$
- 2) $y = x^2 + 10x + 24$
- 3) $y = x^2 + 10x - 24$
- 4) $y = x^2 - 10x + 24$

44 Which ordered pair is *not* in the solution set of

$$y > -\frac{1}{2}x + 5 \text{ and } y \leq 3x - 2?$$

- 1) $(5, 3)$
- 2) $(4, 3)$
- 3) $(3, 4)$
- 4) $(4, 4)$

45 Some banks charge a fee on savings accounts that are left inactive for an extended period of time.

The equation $y = 5000(0.98)^x$ represents the value, y , of one account that was left inactive for a period of x years. What is the y -intercept of this equation and what does it represent?

- 1) 0.98, the percent of money in the account initially
- 2) 0.98, the percent of money in the account after x years
- 3) 5000, the amount of money in the account initially
- 4) 5000, the amount of money in the account after x years

46 Given: $L = \sqrt{2}$

$$M = 3\sqrt{3}$$

$$N = \sqrt{16}$$

$$P = \sqrt{9}$$

Which expression results in a rational number?

- 1) $L + M$
- 2) $M + N$
- 3) $N + P$
- 4) $P + L$

47 When factored completely, the expression $p^4 - 81$ is equivalent to

- 1) $(p^2 + 9)(p^2 - 9)$
- 2) $(p^2 - 9)(p^2 - 9)$
- 3) $(p^2 + 9)(p + 3)(p - 3)$
- 4) $(p + 3)(p - 3)(p + 3)(p - 3)$

48 Which system of equations has the same solution as the system below?

$$2x + 2y = 16$$

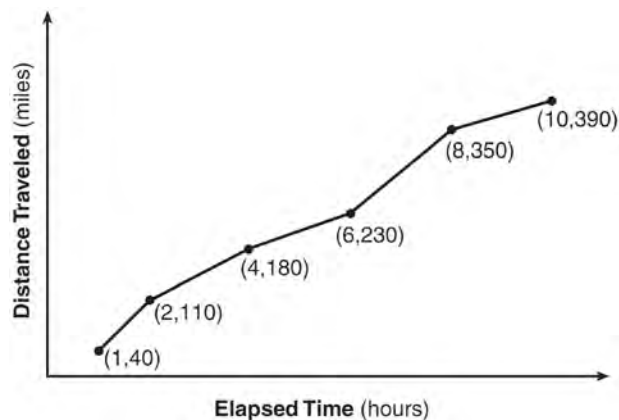
$$3x - y = 4$$

- 1) $2x + 2y = 16$
 $6x - 2y = 4$
- 2) $2x + 2y = 16$
 $6x - 2y = 8$
- 3) $x + y = 16$
 $3x - y = 4$
- 4) $6x + 6y = 48$
 $6x + 2y = 8$

49 Miriam and Jessica are growing bacteria in a laboratory. Miriam uses the growth function $f(t) = n^{2t}$ while Jessica uses the function $g(t) = n^{4t}$, where n represents the initial number of bacteria and t is the time, in hours. If Miriam starts with 16 bacteria, how many bacteria should Jessica start with to achieve the same growth over time?

- 1) 32
- 2) 16
- 3) 8
- 4) 4

50 The Jamison family kept a log of the distance they traveled during a trip, as represented by the graph below.



During which interval was their average speed the greatest?

- 1) the first hour to the second hour
- 2) the second hour to the fourth hour
- 3) the sixth hour to the eighth hour
- 4) the eighth hour to the tenth hour

51 Which value of x satisfies the equation

$$\frac{7}{3} \left(x + \frac{9}{28} \right) = 20?$$

- 1) 8.25
- 2) 8.89
- 3) 19.25
- 4) 44.92

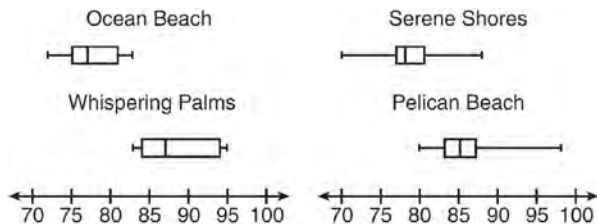
52 Keith determines the zeros of the function $f(x)$ to be -6 and 5 . What could be Keith's function?

- 1) $f(x) = (x + 5)(x + 6)$
- 2) $f(x) = (x + 5)(x - 6)$
- 3) $f(x) = (x - 5)(x + 6)$
- 4) $f(x) = (x - 5)(x - 6)$

53 The inequality $7 - \frac{2}{3}x < x - 8$ is equivalent to

- 1) $x > 9$
- 2) $x > -\frac{3}{5}$
- 3) $x < 9$
- 4) $x < -\frac{3}{5}$

54 Corinne is planning a beach vacation in July and is analyzing the daily high temperatures for her potential destination. She would like to choose a destination with a high median temperature and a small interquartile range. She constructed box plots shown in the diagram below.



Which destination has a median temperature above 80 degrees and the smallest interquartile range?

- 1) Ocean Beach
- 2) Whispering Palms
- 3) Serene Shores
- 4) Pelican Beach

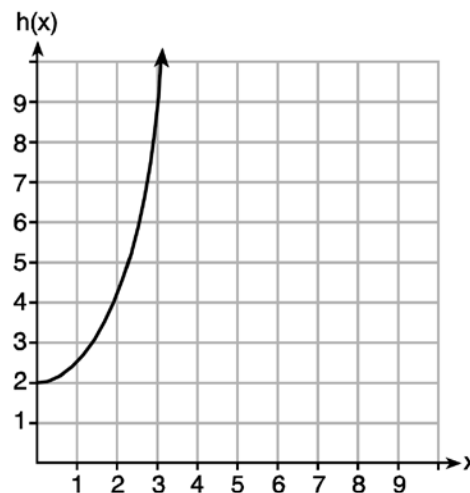
55 A company that manufactures radios first pays a start-up cost, and then spends a certain amount of money to manufacture each radio. If the cost of manufacturing r radios is given by the function $c(r) = 5.25r + 125$, then the value 5.25 best represents

- 1) the start-up cost
- 2) the profit earned from the sale of one radio
- 3) the amount spent to manufacture each radio
- 4) the average number of radios manufactured

56 Given the functions $g(x)$, $f(x)$, and $h(x)$ shown below:

$$g(x) = x^2 - 2x$$

x	$f(x)$
0	1
1	2
2	5
3	7



The correct list of functions ordered from greatest to least by average rate of change over the interval $0 \leq x \leq 3$ is

- 1) $f(x)$, $g(x)$, $h(x)$
- 2) $h(x)$, $g(x)$, $f(x)$
- 3) $g(x)$, $f(x)$, $h(x)$
- 4) $h(x)$, $f(x)$, $g(x)$

57 The third term in an arithmetic sequence is 10 and the fifth term is 26. If the first term is a_1 , which is an equation for the n th term of this sequence?

- 1) $a_n = 8n + 10$
- 2) $a_n = 8n - 14$
- 3) $a_n = 16n + 10$
- 4) $a_n = 16n - 38$

58 Which equation has the same solution as

$$x^2 - 6x - 12 = 0?$$

- 1) $(x + 3)^2 = 21$
- 2) $(x - 3)^2 = 21$
- 3) $(x + 3)^2 = 3$
- 4) $(x - 3)^2 = 3$

59 Christopher looked at his quiz scores shown below for the first and second semester of his Algebra class.

Semester 1: 78, 91, 88, 83, 94

Semester 2: 91, 96, 80, 77, 88, 85, 92

Which statement about Christopher's performance is correct?

- 1) The interquartile range for semester 1 is greater than the interquartile range for semester 2.
- 2) The median score for semester 1 is greater than the median score for semester 2.
- 3) The mean score for semester 2 is greater than the mean score for semester 1.
- 4) The third quartile for semester 2 is greater than the third quartile for semester 1.

60 A sunflower is 3 inches tall at week 0 and grows 2 inches each week. Which function(s) shown below can be used to determine the height, $f(n)$, of the sunflower in n weeks?

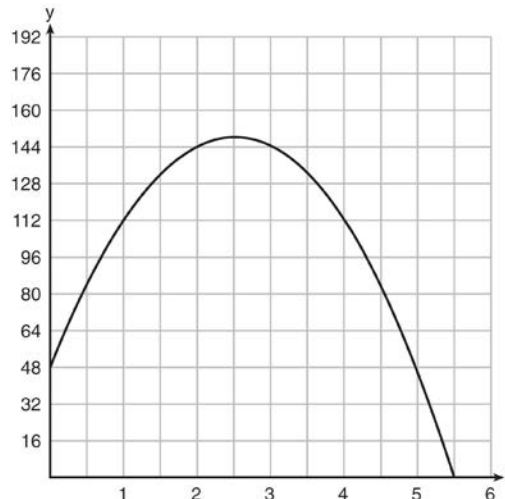
I. $f(n) = 2n + 3$

II. $f(n) = 2n + 3(n - 1)$

III. $f(n) = f(n - 1) + 2$ where $f(0) = 3$

- 1) I and II
- 2) II, only
- 3) III, only
- 4) I and III

61 A ball is thrown into the air from the edge of a 48-foot-high cliff so that it eventually lands on the ground. The graph below shows the height, y , of the ball from the ground after x seconds.



For which interval is the ball's height always *decreasing*?

- 1) $0 \leq x \leq 2.5$
- 2) $0 < x < 5.5$
- 3) $2.5 < x < 5.5$
- 4) $x \geq 2$

62 An astronaut drops a rock off the edge of a cliff on the Moon. The distance, $d(t)$, in meters, the rock travels after t seconds can be modeled by the function $d(t) = 0.8t^2$. What is the average speed, in meters per second, of the rock between 5 and 10 seconds after it was dropped?

- 1) 12
- 2) 20
- 3) 60
- 4) 80

- 63 Isaiah collects data from two different companies, each with four employees. The results of the study, based on each worker's age and salary, are listed in the tables below.

Company 1

Worker's Age in Years	Salary in Dollars
25	30,000
27	32,000
28	35,000
33	38,000

Company 2

Worker's Age in Years	Salary in Dollars
25	29,000
28	35,500
29	37,000
31	65,000

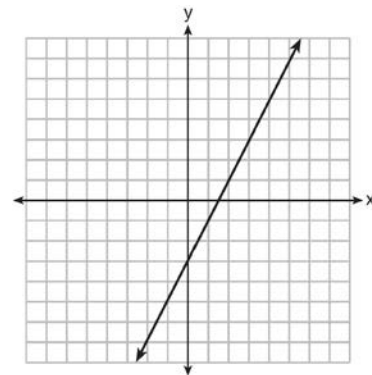
Which statement is true about these data?

- The median salaries in both companies are greater than \$37,000.
 - The mean salary in company 1 is greater than the mean salary in company 2.
 - The salary range in company 2 is greater than the salary range in company 1.
 - The mean age of workers at company 1 is greater than the mean age of workers at company 2.
- 64 Which expression is equivalent to $x^4 - 12x^2 + 36$?
- $(x^2 - 6)(x^2 - 6)$
 - $(x^2 + 6)(x^2 + 6)$
 - $(6 - x^2)(6 + x^2)$
 - $(x^2 + 6)(x^2 - 6)$

- 65 When solving the equation $4(3x^2 + 2) - 9 = 8x^2 + 7$, Emily wrote $4(3x^2 + 2) = 8x^2 + 16$ as her first step. Which property justifies Emily's first step?
- addition property of equality
 - commutative property of addition
 - multiplication property of equality
 - distributive property of multiplication over addition

- 66 Which equation has the same solutions as $x^2 + 6x - 7 = 0$?
- $(x + 3)^2 = 2$
 - $(x - 3)^2 = 2$
 - $(x - 3)^2 = 16$
 - $(x + 3)^2 = 16$

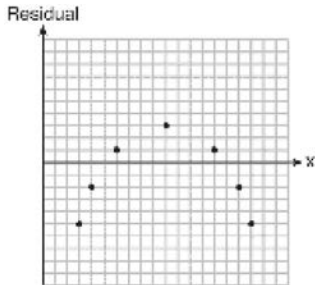
- 67 Which function has the same y-intercept as the graph below?



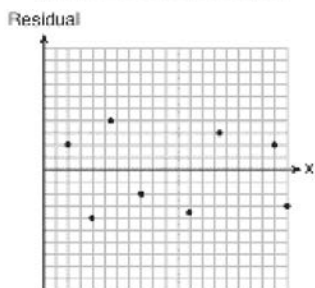
- $y = \frac{12 - 6x}{4}$
- $27 + 3y = 6x$
- $6y + x = 18$
- $y + 3 = 6x$

68 Which statistic would indicate that a linear function would *not* be a good fit to model a data set?

- 1) $r = -0.93$
- 2) $r = 1$



3)



4)

69 What are the roots of the equation $x^2 + 4x - 16 = 0$?

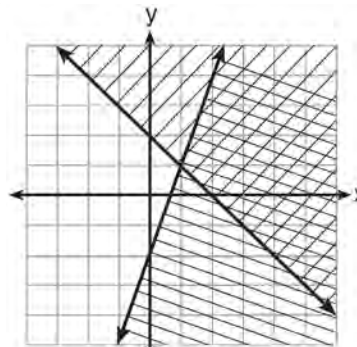
- 1) $2 \pm 2\sqrt{5}$
- 2) $-2 \pm 2\sqrt{5}$
- 3) $2 \pm 4\sqrt{5}$
- 4) $-2 \pm 4\sqrt{5}$

70 In 2013, the United States Postal Service charged \$0.46 to mail a letter weighing up to 1 oz. and \$0.20 per ounce for each additional ounce. Which function would determine the cost, in dollars, $c(z)$, of mailing a letter weighing z ounces where z is an integer greater than 1?

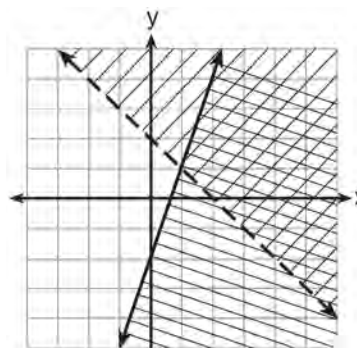
- 1) $c(z) = 0.46z + 0.20$
- 2) $c(z) = 0.20z + 0.46$
- 3) $c(z) = 0.46(z - 1) + 0.20$
- 4) $c(z) = 0.20(z - 1) + 0.46$

71 Given: $y + x > 2$
 $y \leq 3x - 2$

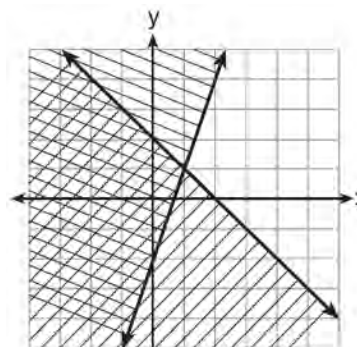
Which graph shows the solution of the given set of inequalities?



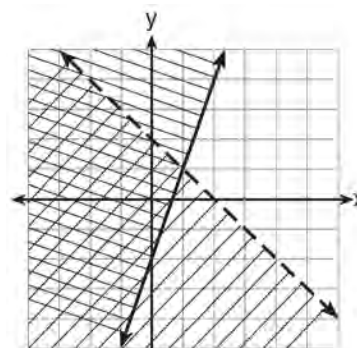
1)



2)



3)



4)

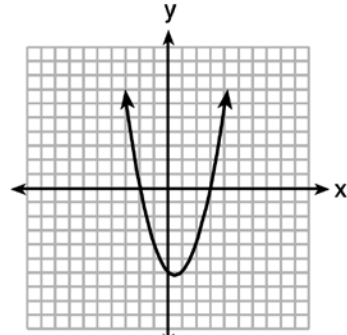
72 The value in dollars, $v(x)$, of a certain car after x years is represented by the equation $v(x) = 25,000(0.86)^x$. To the *nearest dollar*, how much more is the car worth after 2 years than after 3 years?

- 1) 2589
- 2) 6510
- 3) 15,901
- 4) 18,490

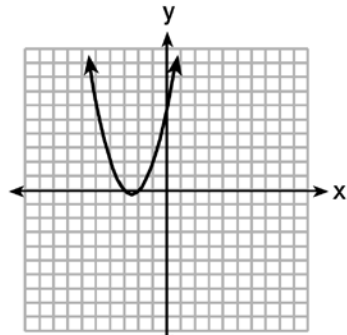
73 A satellite television company charges a one-time installation fee and a monthly service charge. The total cost is modeled by the function $y = 40 + 90x$. Which statement represents the meaning of each part of the function?

- 1) y is the total cost, x is the number of months of service, \$90 is the installation fee, and \$40 is the service charge per month.
- 2) y is the total cost, x is the number of months of service, \$40 is the installation fee, and \$90 is the service charge per month.
- 3) x is the total cost, y is the number of months of service, \$40 is the installation fee, and \$90 is the service charge per month.
- 4) x is the total cost, y is the number of months of service, \$90 is the installation fee, and \$40 is the service charge per month.

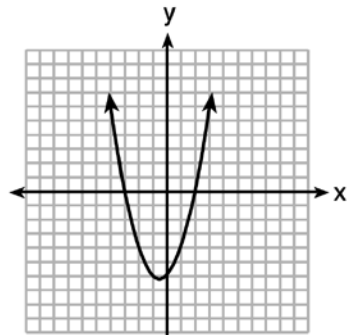
74 The graphs below represent functions defined by polynomials. For which function are the zeros of the polynomials 2 and -3 ?



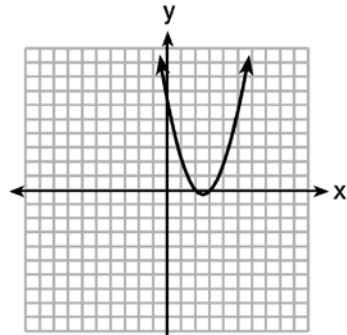
1)



2)



3)



4)

Algebra 1 CCSS Multiple Choice Regents Exam Questions

www.jmap.org

75 Which situation could be modeled by using a linear function?

- 1) a bank account balance that grows at a rate of 5% per year, compounded annually
- 2) a population of bacteria that doubles every 4.5 hours
- 3) the cost of cell phone service that charges a base amount plus 20 cents per minute
- 4) the concentration of medicine in a person's body that decays by a factor of one-third every hour

76 Which statement is *not* always true?

- 1) The product of two irrational numbers is irrational.
- 2) The product of two rational numbers is rational.
- 3) The sum of two rational numbers is rational.
- 4) The sum of a rational number and an irrational number is irrational.

77 Sam and Jeremy have ages that are consecutive odd integers. The product of their ages is 783. Which equation could be used to find Jeremy's age, j , if he is the younger man?

- 1) $j^2 + 2 = 783$
- 2) $j^2 - 2 = 783$
- 3) $j^2 + 2j = 783$
- 4) $j^2 - 2j = 783$

78 The graph of a linear equation contains the points $(3, 11)$ and $(-2, 1)$. Which point also lies on the graph?

- 1) $(2, 1)$
- 2) $(2, 4)$
- 3) $(2, 6)$
- 4) $(2, 9)$

79 The table below represents the function F .

x	3	4	6	7	8
$F(x)$	9	17	65	129	257

The equation that represents this function is

- 1) $F(x) = 3^x$
- 2) $F(x) = 3x$
- 3) $F(x) = 2^x + 1$
- 4) $F(x) = 2x + 3$

Algebra 1 Common Core State Standards 2 Point Regents Exam Questions

- 80 Robin collected data on the number of hours she watched television on Sunday through Thursday nights for a period of 3 weeks. The data are shown in the table below.

	Sun	Mon	Tues	Wed	Thurs
Week 1	4	3	3.5	2	2
Week 2	4.5	5	2.5	3	1.5
Week 3	4	3	1	1.5	2.5

Using an appropriate scale on the number line below, construct a box plot for the 15 values.



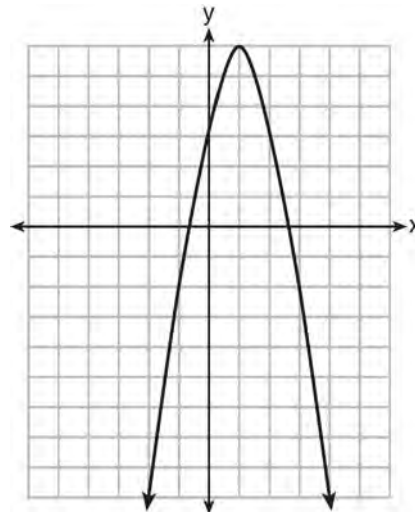
- 81 The school newspaper surveyed the student body for an article about club membership. The table below shows the number of students in each grade level who belong to one or more clubs.

	1 Club	2 Clubs	3 or More Clubs
9 th	90	33	12
10 th	125	12	15
11 th	87	22	18
12 th	75	27	23

If there are 180 students in ninth grade, what percentage of the ninth grade students belong to more than one club?

- 82 In the equation $x^2 + 10x + 24 = (x + a)(x + b)$, b is an integer. Find algebraically *all* possible values of b .

- 83 Let f be the function represented by the graph below.

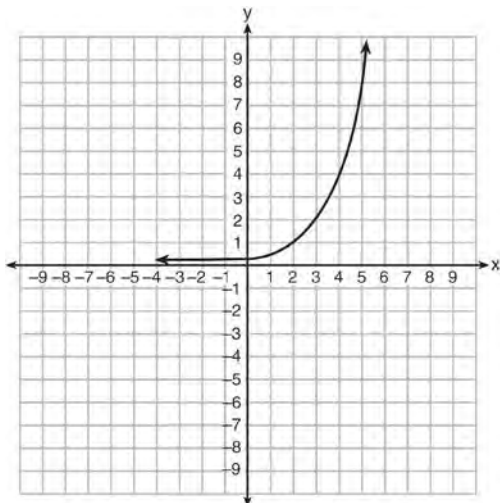


Let g be a function such that $g(x) = -\frac{1}{2}x^2 + 4x + 3$. Determine which function has the larger maximum value. Justify your answer.

- 84 Solve the inequality below to determine and state the smallest possible value for x in the solution set.
 $3(x + 3) \leq 5x - 3$

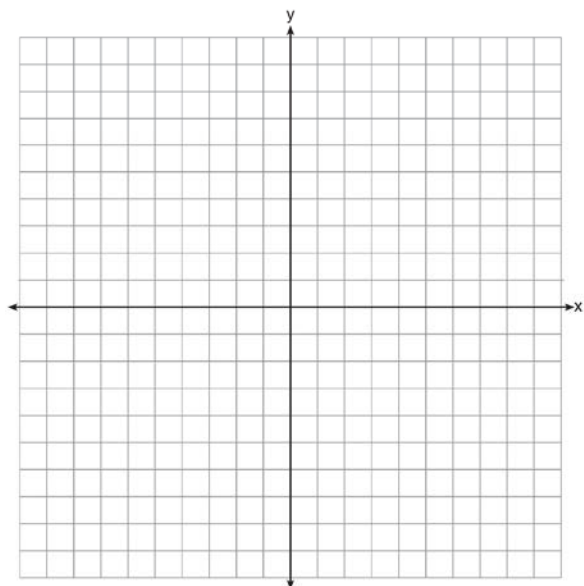
- 85 Guy and Jim work at a furniture store. Guy is paid \$185 per week plus 3% of his total sales in dollars, x , which can be represented by $g(x) = 185 + 0.03x$. Jim is paid \$275 per week plus 2.5% of his total sales in dollars, x , which can be represented by $f(x) = 275 + 0.025x$. Determine the value of x , in dollars, that will make their weekly pay the same.

- 86 Write an exponential equation for the graph shown below.



Explain how you determined the equation.

- 87 On the set of axes below, graph the function represented by $y = \sqrt[3]{x - 2}$ for the domain $-6 \leq x \leq 10$.



- 88 The breakdown of a sample of a chemical compound is represented by the function $p(t) = 300(0.5)^t$, where $p(t)$ represents the number of milligrams of the substance and t represents the time, in years. In the function $p(t)$, explain what 0.5 and 300 represent.

- 89 Emma recently purchased a new car. She decided to keep track of how many gallons of gas she used on five of her business trips. The results are shown in the table below.

Miles Driven	Number of Gallons Used
150	7
200	10
400	19
600	29
1000	51

Write the linear regression equation for these data where miles driven is the independent variable. (Round all values to the *nearest hundredth*.)

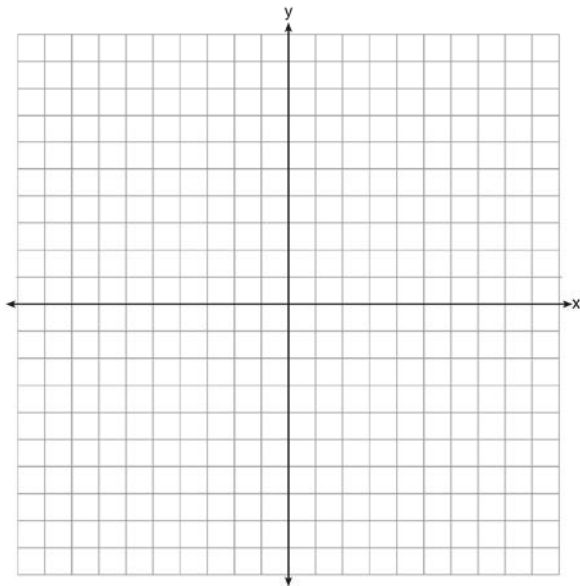
- 90 A gardener is planting two types of trees:
 Type A is three feet tall and grows at a rate of 15 inches per year.
 Type B is four feet tall and grows at a rate of 10 inches per year.
 Algebraically determine exactly how many years it will take for these trees to be the same height.

91 A function is shown in the table below.

x	f(x)
-4	2
-1	-4
0	-2
3	16

If included in the table, which ordered pair, $(-4, 1)$ or $(1, -4)$, would result in a relation that is no longer a function? Explain your answer.

92 On the set of axes below, draw the graph of the equation $y = -\frac{3}{4}x + 3$.



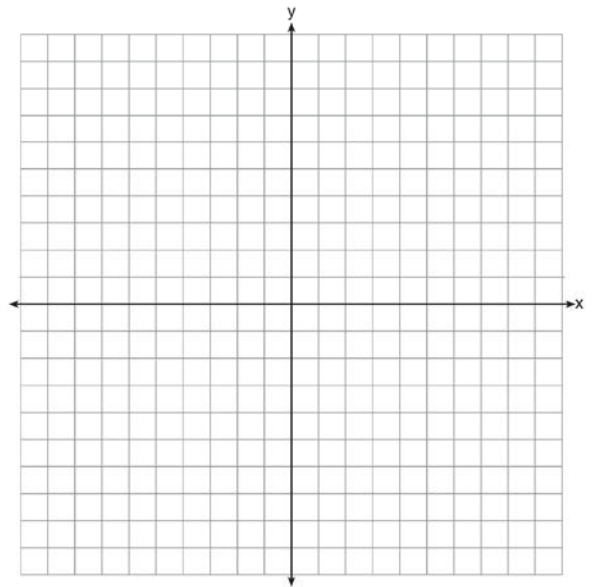
Is the point $(3, 2)$ a solution to the equation?
Explain your answer based on the graph drawn.

93 A high school drama club is putting on their annual theater production. There is a maximum of 800 tickets for the show. The costs of the tickets are \$6 before the day of the show and \$9 on the day of the show. To meet the expenses of the show, the club must sell at least \$5,000 worth of tickets.

a) Write a system of inequalities that represent this situation.

b) The club sells 440 tickets before the day of the show. Is it possible to sell enough additional tickets on the day of the show to at least meet the expenses of the show? Justify your answer.

94 Draw the graph of $y = \sqrt{x} - 1$ on the set of axes below.



95 Factor the expression $x^4 + 6x^2 - 7$ completely.

Algebra 1 Common Core State Standards 2 Point Regents Exam Questions

www.jmap.org

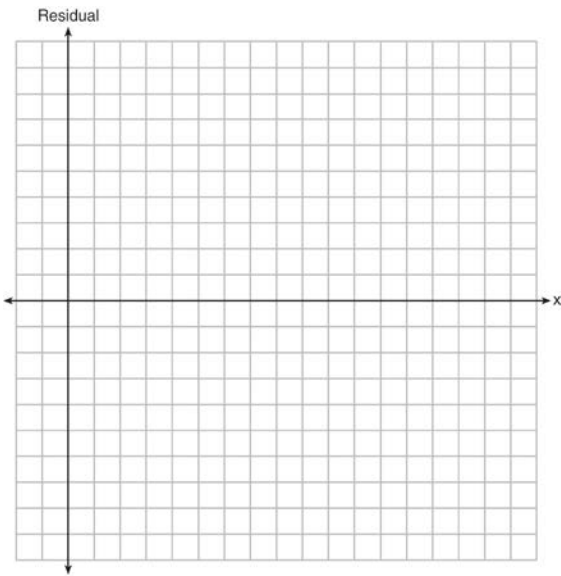
96 Express the product of $2x^2 + 7x - 10$ and $x + 5$ in standard form.

97 Solve the equation $4x^2 - 12x = 7$ algebraically for x .

98 The table below represents the residuals for a line of best fit.

x	2	3	3	4	6	7	8	9	9	10
Residual	2	1	-1	-2	-3	-2	-1	2	0	3

Plot these residuals on the set of axes below.



Using the plot, assess the fit of the line for these residuals and justify your answer.

99 A student was given the equation $x^2 + 6x - 13 = 0$ to solve by completing the square. The first step that was written is shown below.

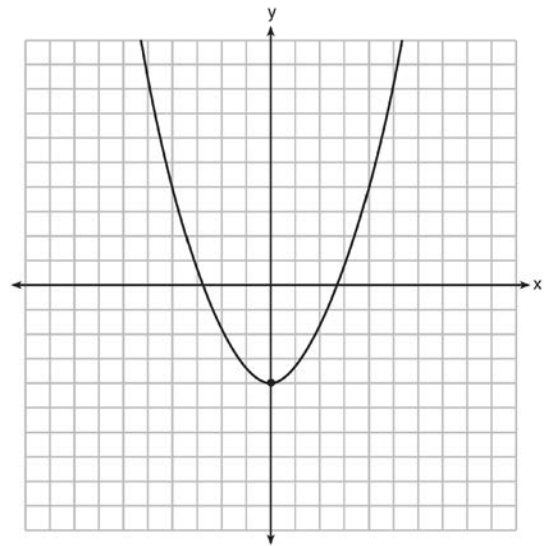
$$x^2 + 6x = 13$$

The next step in the student's process was

$x^2 + 6x + c = 13 + c$. State the value of c that creates a perfect square trinomial. Explain how the value of c is determined.

100 Rhonda deposited \$3000 in an account in the Merrick National Bank, earning 4.2% interest, compounded annually. She made no deposits or withdrawals. Write an equation that can be used to find B , her account balance after t years.

101 Ryker is given the graph of the function $y = \frac{1}{2}x^2 - 4$. He wants to find the zeros of the function, but is unable to read them exactly from the graph.



Find the zeros in simplest radical form.

Algebra 1 Common Core State Standards 2 Point Regents Exam Questions

www.jmap.org

102 Given $2x + ax - 7 > -12$, determine the largest integer value of a when $x = -1$.

103 Donna wants to make trail mix made up of almonds, walnuts and raisins. She wants to mix one part almonds, two parts walnuts, and three parts raisins. Almonds cost \$12 per pound, walnuts cost \$9 per pound, and raisins cost \$5 per pound. Donna has \$15 to spend on the trail mix. Determine how many pounds of trail mix she can make. [Only an algebraic solution can receive full credit.]

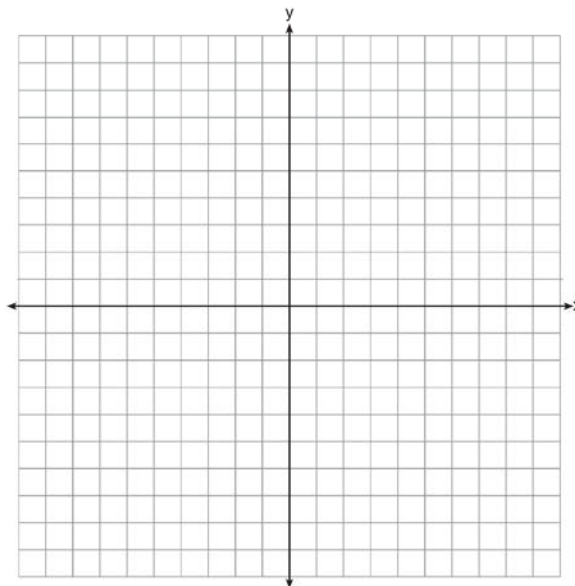
104 Solve $8m^2 + 20m = 12$ for m by factoring.

105 Subtract $5x^2 + 2x - 11$ from $3x^2 + 8x - 7$. Express the result as a trinomial.

106 Ms. Fox asked her class "Is the sum of 4.2 and $\sqrt{2}$ rational or irrational?" Patrick answered that the sum would be irrational. State whether Patrick is correct or incorrect. Justify your reasoning.

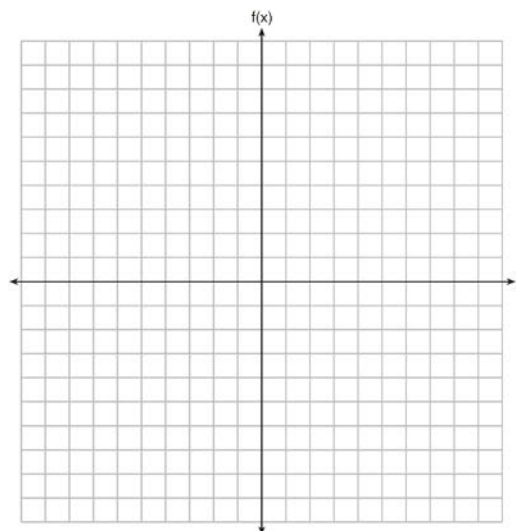
107 The function f has a domain of $\{1, 3, 5, 7\}$ and a range of $\{2, 4, 6\}$. Could f be represented by $\{(1, 2), (3, 4), (5, 6), (7, 2)\}$? Justify your answer.

108 The vertex of the parabola represented by $f(x) = x^2 - 4x + 3$ has coordinates $(2, -1)$. Find the coordinates of the vertex of the parabola defined by $g(x) = f(x - 2)$. Explain how you arrived at your answer. [The use of the set of axes below is optional.]



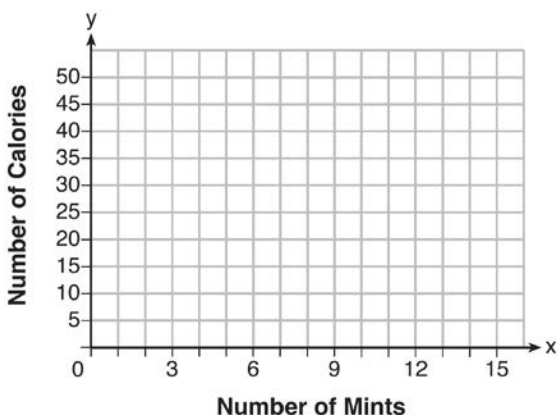
109 Graph the following function on the set of axes below.

$$f(x) = \begin{cases} |x|, & -3 \leq x < 1 \\ 4, & 1 \leq x \leq 8 \end{cases}$$



Algebra 1 Common Core State Standards 4 Point Regents Exam Questions

- 110 Max purchased a box of green tea mints. The nutrition label on the box stated that a serving of three mints contains a total of 10 Calories. On the axes below, graph the function, C , where $C(x)$ represents the number of Calories in x mints.



Write an equation that represents $C(x)$. A full box of mints contains 180 Calories. Use the equation to determine the total number of mints in the box.

- 111 David has two jobs. He earns \$8 per hour babysitting his neighbor's children and he earns \$11 per hour working at the coffee shop. Write an inequality to represent the number of hours, x , babysitting and the number of hours, y , working at the coffee shop that David will need to work to earn a minimum of \$200. David worked 15 hours at the coffee shop. Use the inequality to find the number of full hours he must babysit to reach his goal of \$200.

- 112 About a year ago, Joey watched an online video of a band and noticed that it had been viewed only 843 times. One month later, Joey noticed that the band's video had 1708 views. Joey made the table below to keep track of the cumulative number of views the video was getting online.

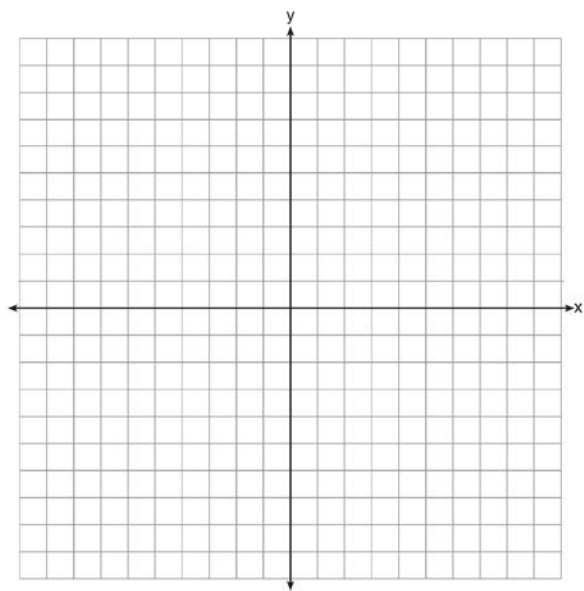
Months Since First Viewing	Total Views
0	843
1	1708
2	forgot to record
3	7124
4	14,684
5	29,787
6	62,381

Write a regression equation that best models these data. Round all values to the *nearest hundredth*. Justify your choice of regression equation. As shown in the table, Joey forgot to record the number of views after the second month. Use the equation from part *a* to estimate the number of full views of the online video that Joey forgot to record.

- 113 An animal shelter spends \$2.35 per day to care for each cat and \$5.50 per day to care for each dog. Pat noticed that the shelter spent \$89.50 caring for cats and dogs on Wednesday. Write an equation to represent the possible numbers of cats and dogs that could have been at the shelter on Wednesday. Pat said that there might have been 8 cats and 14 dogs at the shelter on Wednesday. Are Pat's numbers possible? Use your equation to justify your answer. Later, Pat found a record showing that there were a total of 22 cats and dogs at the shelter on Wednesday. How many cats were at the shelter on Wednesday?


114 Caitlin has a movie rental card worth \$175. After she rents the first movie, the card's value is \$172.25. After she rents the second movie, its value is \$169.50. After she rents the third movie, the card is worth \$166.75. Assuming the pattern continues, write an equation to define $A(n)$, the amount of money on the rental card after n rentals. Caitlin rents a movie every Friday night. How many weeks in a row can she afford to rent a movie, using her rental card only? Explain how you arrived at your answer.

115 Let $f(x) = -2x^2$ and $g(x) = 2x - 4$. On the set of axes below, draw the graphs of $y = f(x)$ and $y = g(x)$.



Using this graph, determine and state *all* values of x for which $f(x) = g(x)$.

116 During a snowstorm, a meteorologist tracks the amount of accumulating snow. For the first three hours of the storm, the snow fell at a constant rate of one inch per hour. The storm then stopped for two hours and then started again at a constant rate of one-half inch per hour for the next four hours. a) On the grid below, draw and label a graph that models the accumulation of snow over time using the data the meteorologist collected.



b) If the snowstorm started at 6 p.m., how much snow had accumulated by midnight?

117 a) Given the function $f(x) = -x^2 + 8x + 9$, state whether the vertex represents a maximum or minimum point for the function. Explain your answer.
b) Rewrite $f(x)$ in vertex form by completing the square.

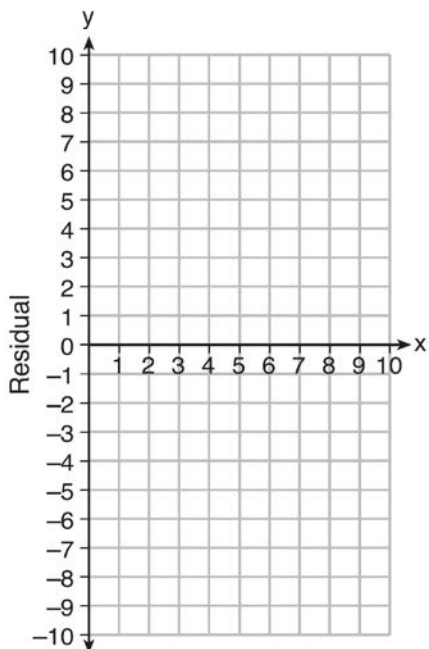
118 Write an equation that defines $m(x)$ as a trinomial where $m(x) = (3x - 1)(3 - x) + 4x^2 + 19$. Solve for x when $m(x) = 0$.

119 Use the data below to write the regression equation ($y = ax + b$) for the raw test score based on the hours tutored. Round all values to the *nearest hundredth*.

Tutor Hours, x	Raw Test Score	Residual (Actual - Predicted)
1	30	1.3
2	37	1.9
3	35	-6.4
4	47	-0.7
5	56	2.0
6	67	6.6
7	62	-4.7

Equation: _____

Create a residual plot on the axes below, using the residual scores in the table above.



Based on the residual plot, state whether the equation is a good fit for the data. Justify your answer.

120 A nutritionist collected information about different brands of beef hot dogs. She made a table showing the number of Calories and the amount of sodium in each hot dog.

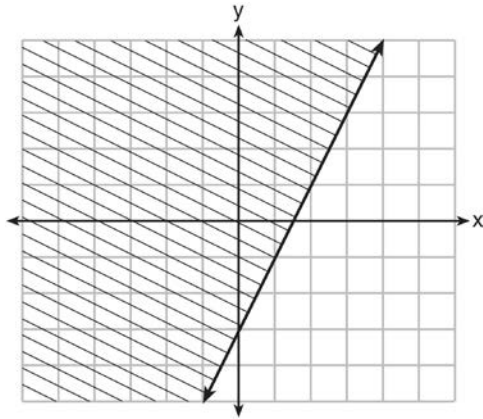
Calories per Beef Hot Dog	Milligrams of Sodium per Beef Hot Dog
186	495
181	477
176	425
149	322
184	482
190	587
158	370
139	322

a) Write the correlation coefficient for the line of best fit. Round your answer to the *nearest hundredth*.

b) Explain what the correlation coefficient suggests in the context of this problem.

121 Jacob and Zachary go to the movie theater and purchase refreshments for their friends. Jacob spends a total of \$18.25 on two bags of popcorn and three drinks. Zachary spends a total of \$27.50 for four bags of popcorn and two drinks. Write a system of equations that can be used to find the price of one bag of popcorn and the price of one drink. Using these equations, determine and state the price of a bag of popcorn and the price of a drink, to the *nearest cent*.

122 The graph of an inequality is shown below.



- a) Write the inequality represented by the graph.
- b) On the same set of axes, graph the inequality $x + 2y < 4$.
- c) The two inequalities graphed on the set of axes form a system. Oscar thinks that the point $(2, 1)$ is in the solution set for this system of inequalities. Determine and state whether you agree with Oscar. Explain your reasoning.

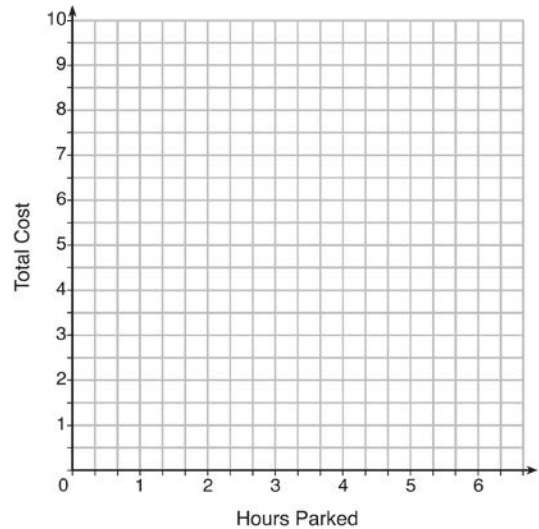
123 A school is building a rectangular soccer field that has an area of 6000 square yards. The soccer field must be 40 yards longer than its width. Determine algebraically the dimensions of the soccer field, in yards.

124 The formula for the area of a trapezoid is $A = \frac{1}{2} h(b_1 + b_2)$. Express b_1 in terms of A , h , and b_2 . The area of a trapezoid is 60 square feet, its height is 6 ft, and one base is 12 ft. Find the number of feet in the other base.

125 The table below lists the total cost for parking for a period of time on a street in Albany, N.Y. The total cost is for any length of time up to and including the hours parked. For example, parking for up to and including 1 hour would cost \$1.25; parking for 3.5 hours would cost \$5.75.

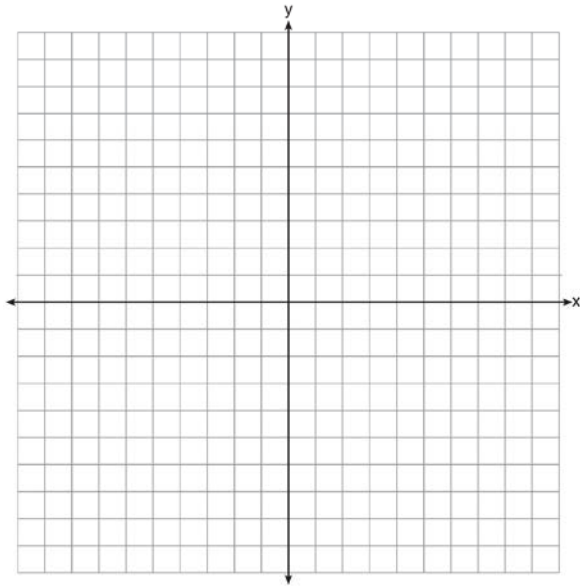
Hours Parked	Total Cost
1	1.25
2	2.50
3	4.00
4	5.75
5	7.75
6	10.00

Graph the step function that represents the cost for the number of hours parked.



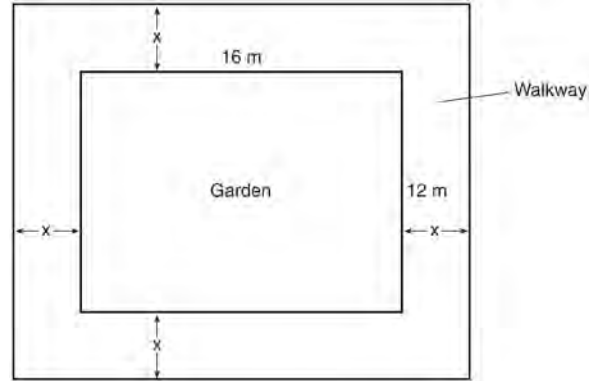
Explain how the cost per hour to park changes over the six-hour period.

126 On the axes below, graph $f(x) = |3x|$.



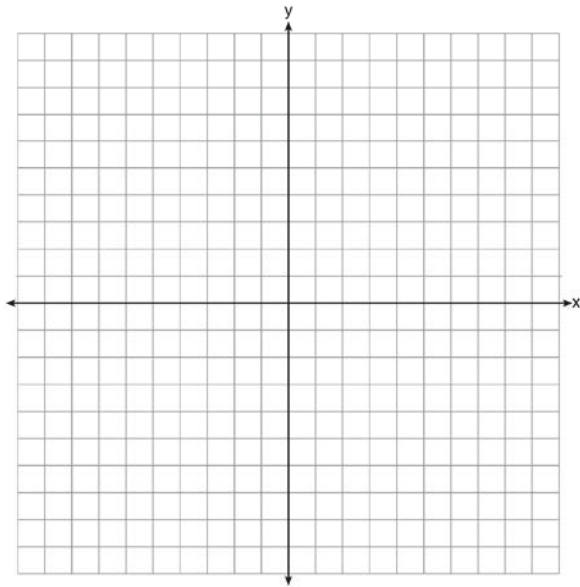
If $g(x) = f(x) - 2$, how is the graph of $f(x)$ translated to form the graph of $g(x)$? If $h(x) = f(x - 4)$, how is the graph of $f(x)$ translated to form the graph of $h(x)$?

127 A rectangular garden measuring 12 meters by 16 meters is to have a walkway installed around it with a width of x meters, as shown in the diagram below. Together, the walkway and the garden have an area of 396 square meters.



Write an equation that can be used to find x , the width of the walkway. Describe how your equation models the situation. Determine and state the width of the walkway, in meters.

- 128 On the set of axes below, graph the function $y = |x + 1|$.

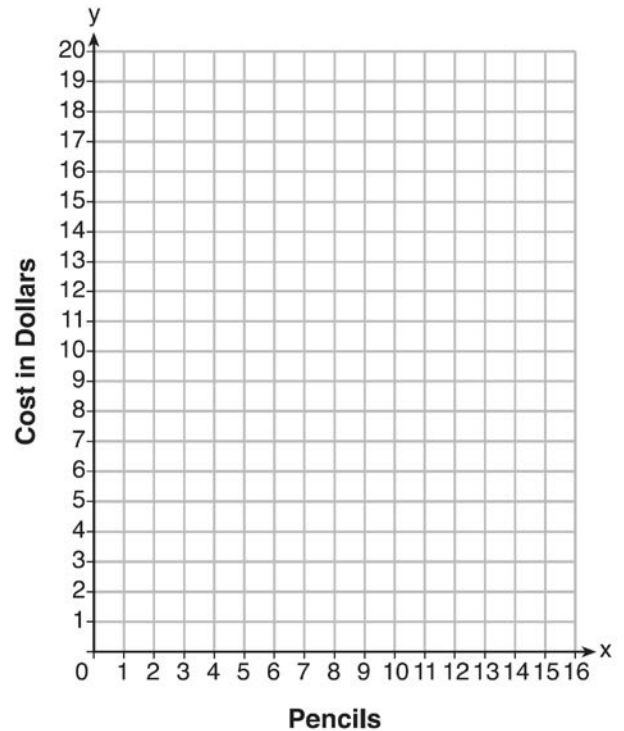


State the range of the function. State the domain over which the function is increasing.

- 129 At an office supply store, if a customer purchases fewer than 10 pencils, the cost of each pencil is \$1.75. If a customer purchases 10 or more pencils, the cost of each pencil is \$1.25. Let c be a function for which $c(x)$ is the cost of purchasing x pencils, where x is a whole number.

$$c(x) = \begin{cases} 1.75x, & \text{if } 0 \leq x < 10 \\ 1.25x, & \text{if } x \geq 10 \end{cases}$$


Create a graph of c on the axes below.



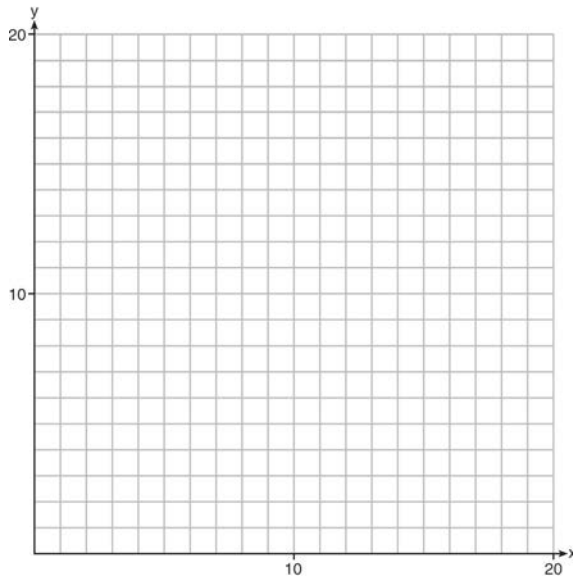
A customer brings 8 pencils to the cashier. The cashier suggests that the total cost to purchase 10 pencils would be less expensive. State whether the cashier is correct or incorrect. Justify your answer.

Algebra 1 Common Core State Standards 6 Point Regents Exam Questions

130 A local business was looking to hire a landscaper to work on their property. They narrowed their choices to two companies. Flourish Landscaping Company charges a flat rate of \$120 per hour. Green Thumb Landscapers charges \$70 per hour plus a \$1600 equipment fee. Write a system of equations representing how much each company charges. Determine and state the number of hours that must be worked for the cost of each company to be the same. [The use of the grid below is optional.] If it is estimated to take at least 35 hours to complete the job, which company will be less expensive? Justify your answer.

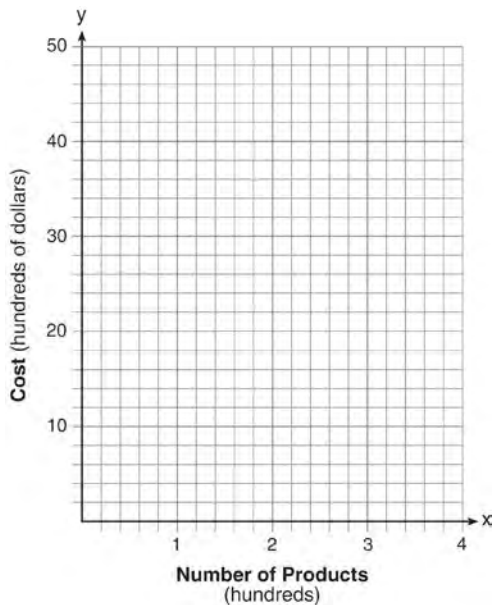


131 Edith babysits for x hours a week after school at a job that pays \$4 an hour. She has accepted a job that pays \$8 an hour as a library assistant working y hours a week. She will work both jobs. She is able to work no more than 15 hours a week, due to school commitments. Edith wants to earn at least \$80 a week, working a combination of both jobs. Write a system of inequalities that can be used to represent the situation. Graph these inequalities on the set of axes below.



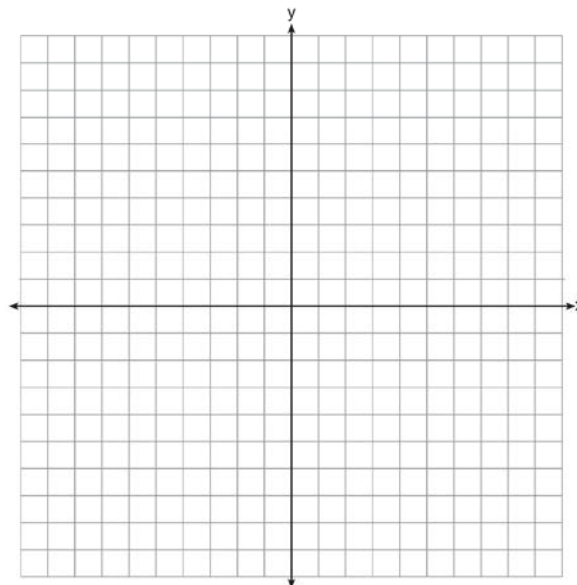
Determine and state one combination of hours that will allow Edith to earn *at least* \$80 per week while working *no more than* 15 hours.

- 132 A company is considering building a manufacturing plant. They determine the weekly production cost at site *A* to be $A(x) = 3x^2$ while the production cost at site *B* is $B(x) = 8x + 3$, where x represents the number of products, *in hundreds*, and $A(x)$ and $B(x)$ are the production costs, *in hundreds of dollars*. Graph the production cost functions on the set of axes below and label them site *A* and site *B*.



State the positive value(s) of x for which the production costs at the two sites are equal. Explain how you determined your answer. If the company plans on manufacturing 200 products per week, which site should they use? Justify your answer.

- 133 Next weekend Marnie wants to attend either carnival *A* or carnival *B*. Carnival *A* charges \$6 for admission and an additional \$1.50 per ride. Carnival *B* charges \$2.50 for admission and an additional \$2 per ride.
- In function notation, write $A(x)$ to represent the total cost of attending carnival *A* and going on x rides. In function notation, write $B(x)$ to represent the total cost of attending carnival *B* and going on x rides.
 - Determine the number of rides Marnie can go on such that the total cost of attending each carnival is the same. [Use of the set of axes below is optional.]
 - Marnie wants to go on five rides. Determine which carnival would have the lower total cost. Justify your answer.



- 134 New Clarendon Park is undergoing renovations to its gardens. One garden that was originally a square is being adjusted so that one side is doubled in length, while the other side is decreased by three meters. The new rectangular garden will have an area that is 25% more than the original square garden. Write an equation that could be used to determine the length of a side of the original square garden. Explain how your equation models the situation. Determine the area, in square meters, of the new rectangular garden.

Algebra 1 Common Core State Standards Multiple Choice Regents Exam Questions Answer Section

1 ANS: 1

$$\frac{-(-6) \pm \sqrt{(-6)^2 - 4(1)(-19)}}{2(1)} = \frac{6 \pm \sqrt{112}}{2} = \frac{6 \pm \sqrt{16} \cdot \sqrt{7}}{2} = \frac{6 \pm 4\sqrt{7}}{2} = 3 \pm 2\sqrt{7}$$

PTS: 2 REF: fall1302a1 NAT: A.REI.4b TOP: Solving Quadratics

KEY: quadratic formula

2 ANS: 1 PTS: 2 REF: 081417a1 NAT: F.BF.3

TOP: Transformations with Functions and Relations

3 ANS: 1

$$f(2) = 0$$

$$f(6) = 8$$

PTS: 2 REF: 081411a1 NAT: F.IF.2 TOP: Domain and Range

4 ANS: 2 PTS: 2 REF: 081413a1 NAT: A.CED.2

TOP: Graphing Linear Functions

5 ANS: 1

$$\frac{x-2}{3} = \frac{4}{6}$$

$$6x - 12 = 12$$

$$6x = 24$$

$$x = 4$$

PTS: 2 REF: 081420a1 NAT: A.REI.3 TOP: Solving Linear Equations

KEY: fractional expressions

6 ANS: 2 PTS: 2 REF: 011512a1 NAT: F.BF.3

TOP: Transformations with Functions and Relations

7 ANS: 3 PTS: 2 REF: 011513a1 NAT: A.CED.1

TOP: Modeling Linear Inequalities

8 ANS: 1 PTS: 2 REF: 061420a1 NAT: F.IF.2

TOP: Functional Notation

9 ANS: 4 PTS: 2 REF: 061406a1 NAT: F.LE.1c

TOP: Modeling Exponential Equations

10 ANS: 2 PTS: 2 REF: 011506a1 NAT: F.IF.5

TOP: Domain and Range

11 ANS: 4

$$(x+2)^2 - 25 = 0$$

$$((x+2)+5)((x+2)-5) = 0$$

$$x = -7, 3$$

PTS: 2 REF: 081418a1 NAT: F.IF.8a TOP: Zeros of Polynomials

12 ANS: 2

$$0 = -16t^2 + 144$$

$$16t^2 = 144$$

$$t^2 = 9$$

$$t = 3$$

PTS: 2 REF: 081423a1 NAT: F.IF.5 TOP: Domain and Range

13 ANS: 4 PTS: 2 REF: 011503a1 NAT: A.SSE.3a

TOP: Solving Quadratics

14 ANS: 1 PTS: 2 REF: 011516a1 NAT: A.CED.4

TOP: Transforming Formulas

15 ANS: 3 PTS: 2 REF: 081403a1 NAT: A.REI.4b

TOP: Solving Quadratics KEY: taking square roots

16 ANS: 1 PTS: 2 REF: 081407a1 NAT: A.REI.12

TOP: Graphing Systems of Linear Inequalities

17 ANS: 3 PTS: 2 REF: 011505a1 NAT: F.LE.1b

TOP: Families of Functions

18 ANS: 4 PTS: 2 REF: 081405a1 NAT: A.REI.10

TOP: Graphing Quadratic Functions

19 ANS: 3 PTS: 2 REF: 081410a1 NAT: F.LE.2

TOP: Families of Functions

20 ANS: 4

$$\frac{4.7 - 2.3}{20 - 80} = \frac{2.4}{-60} = -0.04.$$

PTS: 2 REF: 081414a1 NAT: F.IF.6 TOP: Rate of Change

21 ANS: 2 PTS: 2 REF: 011502a1 NAT: N.Q.1

TOP: Conversions

22 ANS: 1 PTS: 2 REF: 011524a1 NAT: A.APR.3

TOP: Zeros of Polynomials

23 ANS: 2 PTS: 2 REF: 011501a1 NAT: A.SSE.1a

TOP: Modeling Linear Equations

24 ANS: 2 PTS: 2 REF: 011510a1 NAT: A.APR.1

TOP: Multiplication of Polynomials

25 ANS: 4

$$f(1) = 3; f(2) = -5; f(3) = 11; f(4) = -21; f(5) = 43$$

PTS: 2 REF: 081424a1 NAT: F.IF.3 TOP: Sequences

26 ANS: 4 PTS: 2 REF: spr1304a1 NAT: A.CED.1

TOP: Geometric Applications of Quadratics

27 ANS: 4 PTS: 2 REF: 061417a1 NAT: F.IF.2

TOP: Domain and Range

28 ANS: 1 PTS: 2 REF: 011504a1 NAT: F.BF.1a

TOP: Modeling Exponential Equations

29 ANS: 4

There are no negative or fractional cars.

PTS: 2

REF: 061402a1

NAT: F.IF.5

TOP: Domain and Range

30 ANS: 1

$$4x - 5(0) = 40$$

$$4x = 40$$

$$x = 10$$

PTS: 2

REF: 081408a1

NAT: F.IF.4

TOP: Graphing Linear Functions

31 ANS: 1

$$V = \frac{1}{3} \pi r^2 h$$

$$3V = \pi r^2 h$$

$$\frac{3V}{\pi h} = r^2$$

$$\sqrt{\frac{3V}{\pi h}} = r$$

PTS: 2

REF: 061423a1

NAT: A.CED.4

TOP: Transforming Formulas

32 ANS: 3

PTS: 2

REF: 061411a1

NAT: S.ID.8

TOP: Correlation Coefficient and Residuals

33 ANS: 3

PTS: 2

REF: 011518a1

NAT: A.REI.11

TOP: Nonlinear Systems

34 ANS: 2

PTS: 2

REF: 061416a1

NAT: A.CED.1

TOP: Modeling Linear Equations

35 ANS: 4

PTS: 2

REF: 061422a1

NAT: A.CED.1

TOP: Modeling Linear Equations

36 ANS: 2

$$P(x) = -0.5x^2 + 800x - 100 - (300x + 250) = -0.5x^2 + 500x - 350$$

PTS: 2

REF: 081406a1

NAT: A.APR.1

TOP: Addition and Subtraction of Polynomials

KEY: subtraction

37 ANS: 2

PTS: 2

REF: 061403a1

NAT: A.APR.1

TOP: Addition and Subtraction of Polynomials

KEY: subtraction

38 ANS: 4

PTS: 2

REF: 081421a1

NAT: S.ID.6a

TOP: Regression

39 ANS: 3

$$f(0 + 1) = -2f(0) + 3 = -2(2) + 3 = -1$$

$$f(1 + 1) = -2f(1) + 3 = -2(-1) + 3 = 5$$

PTS: 2

REF: 011520a1

NAT: F.IF.3

TOP: Sequences

40 ANS: 2

PTS: 2

REF: 061424a1

NAT: F.LE.2

TOP: Sequences

- 41 ANS: 4 PTS: 2 REF: 081419a1 NAT: A.CED.2
TOP: Modeling Linear Systems
- 42 ANS: 2 PTS: 2 REF: 081422a1 NAT: F.IF.7b
TOP: Graphing Piecewise-Defined Functions
- 43 ANS: 2
 $(x + 4)(x + 6) = 0$
 $x^2 + 10x + 24 = 0$

PTS: 2 REF: spr1303a1 NAT: A.APR.3 TOP: Zeros of Polynomials
- 44 ANS: 2
 $(4, 3)$ is on the boundary of $y > -\frac{1}{2}x + 5$, so $(4, 3)$ is not a solution of the system.

PTS: 2 REF: fall1301a1 NAT: A.REI.12 TOP: Graphing Systems of Linear Inequalities
- 45 ANS: 3 PTS: 2 REF: 011515a1 NAT: F.IF.8b
TOP: Modeling Exponential Equations
- 46 ANS: 3
 $\sqrt{16} + \sqrt{9} = \frac{7}{1}$ may be expressed as the ratio of two integers.

PTS: 2 REF: 061413a1 NAT: N.RN.3 TOP: Classifying Numbers
- 47 ANS: 3 PTS: 2 REF: 011522a1 NAT: A.SSE.2
TOP: Factoring Polynomials
- 48 ANS: 2
 $2(3x - y = 4)$
 $6x - 2y = 8$

PTS: 2 REF: 061414a1 NAT: A.REI.5 TOP: Solving Linear Systems
- 49 ANS: 4
 $16^{2t} = n^{4t}$
 $16^2 = n^4$
 $256 = n^4$
 $4 = n$

PTS: 2 REF: 011519a1 NAT: A.SSE.3c TOP: Solving Exponential Equations
- 50 ANS: 1
 $\frac{110 - 40}{2 - 1} > \frac{350 - 230}{8 - 6}$
 $70 > 60$

PTS: 2 REF: 061418a1 NAT: F.IF.6 TOP: Rate of Change

51 ANS: 1

$$\frac{7}{3} \left(x + \frac{9}{28} \right) = 20$$

$$\frac{7}{3}x + \frac{3}{4} = \frac{80}{4}$$

$$\frac{7}{3}x = \frac{77}{4}$$

$$x = \frac{33}{4} = 8.25$$

PTS: 2 REF: 061405a1 NAT: A.REI.3 TOP: Solving Linear Equations
KEY: fractional expressions

52 ANS: 3 PTS: 2 REF: 061412a1 NAT: A.SSE.3a

TOP: Solving Quadratics

53 ANS: 1

$$7 - \frac{2}{3}x < x - 8$$

$$15 < \frac{5}{3}x$$

$$9 < x$$

PTS: 2 REF: 011507a1 NAT: A.REI.3 TOP: Solving Linear Inequalities

54 ANS: 4 PTS: 2 REF: 011514a1 NAT: S.ID.2

TOP: Central Tendency and Dispersion

55 ANS: 3 PTS: 2 REF: 061407a1 NAT: F.LE.5

TOP: Modeling Linear Equations

56 ANS: 4

Over the interval $0 \leq x \leq 3$, the average rate of change for $h(x) = \frac{9-2}{3-0} = \frac{7}{3}$, $f(x) = \frac{7-1}{3-0} = \frac{6}{3} = 2$, and

$$g(x) = \frac{3-0}{3-0} = \frac{3}{3} = 1.$$

PTS: 2 REF: spr1301a1 NAT: F.IF.6 TOP: Rate of Change

57 ANS: 2 PTS: 2 REF: 081416a1 NAT: F.LE.2

TOP: Sequences

58 ANS: 2

$$x^2 - 6x = 12$$

$$x^2 - 6x + 9 = 12 + 9$$

$$(x - 3)^2 = 21$$

PTS: 2 REF: 061408a1 NAT: A.REI.4a TOP: Solving Quadratics

KEY: completing the square

59 ANS: 3

	Mean	Q1	Median	Q3	IQR
Semester 1	86.8	80.5	88	92.5	2
Semester 2	87	80	88	92	2

PTS: 2 REF: 061419a1 NAT: S.ID.2 TOP: Central Tendency and Dispersion

60 ANS: 4 PTS: 2 REF: 061421a1 NAT: F.IF.3
TOP: Sequences61 ANS: 3 PTS: 2 REF: 061409a1 NAT: F.IF.4
TOP: Graphing Quadratic Functions

62 ANS: 1

$$\frac{0.8(10^2) - 0.8(5^2)}{10 - 5} = \frac{80 - 20}{5} = 12$$

PTS: 2 REF: 011521a1 NAT: F.IF.6 TOP: Rate of Change

63 ANS: 3

		Company 1	Company 2
1	median salary	33,500	36,250
2	mean salary	33,750	44,125
3	salary range	8,000	36,000
4	mean age	28.25	28.25

PTS: 2 REF: 081404a1 NAT: S.ID.2 TOP: Central Tendency and Dispersion

64 ANS: 1 PTS: 2 REF: 081415a1 NAT: A.SSE.2
TOP: Factoring Polynomials65 ANS: 1 PTS: 2 REF: 061401a1 NAT: A.REI.1
TOP: Identifying Properties

66 ANS: 4

$$x^2 + 6x = 7$$

$$x^2 + 6x + 9 = 7 + 9$$

$$(x + 3)^2 = 16$$

PTS: 2 REF: 011517a1 NAT: A.REI.4a TOP: Solving Quadratics

KEY: completing the square

67 ANS: 4

$$y + 3 = 6(0)$$

$$y = -3$$

PTS: 2 REF: 011509a1 NAT: F.IF.4 TOP: Graphing Linear Functions

68 ANS: 3

A correlation coefficient close to -1 or 1 indicates a good fit. For a residual plot, there should be no observable pattern and a similar distribution of residuals above and below the x -axis.

PTS: 2 REF: fall1303a1 NAT: S.ID.6c TOP: Correlation Coefficient and Residuals

69 ANS: 2

$$x = \frac{-4 \pm \sqrt{4^2 - 4(1)(-16)}}{2(1)} = \frac{-4 \pm \sqrt{80}}{2} = \frac{-4 \pm \sqrt{16} \sqrt{5}}{2} = \frac{-4 \pm 4\sqrt{5}}{2} = -2 \pm 2\sqrt{5}$$

PTS: 2 REF: 061410a1 NAT: A.REI.4b TOP: Solving Quadratics

KEY: quadratic formula

70 ANS: 4 PTS: 2 REF: 011523a1 NAT: A.CED.2

TOP: Modeling Linear Equations

71 ANS: 2 PTS: 2 REF: 061404a1 NAT: A.REI.12

TOP: Graphing Systems of Linear Inequalities

72 ANS: 1

$$25,000(0.86)^2 - 25,000(0.86)^3 = 18490 - 15901.40 = 2588.60$$

PTS: 2 REF: 011508a1 NAT: F.IF.8b TOP: Evaluating Exponential Expressions

73 ANS: 2 PTS: 2 REF: 081402a1 NAT: F.LE.5

TOP: Modeling Linear Equations

74 ANS: 3 PTS: 2 REF: spr1302a1 NAT: A.APR.3

TOP: Zeros of Polynomials

75 ANS: 3 PTS: 2 REF: 081412a1 NAT: F.LE.1b

TOP: Families of Functions

76 ANS: 1 PTS: 2 REF: 081401a1 NAT: N.RN.3

TOP: Classifying Numbers

77 ANS: 3 PTS: 2 REF: 081409a1 NAT: A.CED.1

TOP: Modeling Quadratics

78 ANS: 4

$$m = \frac{11 - 1}{3 - (-2)} = \frac{10}{5} = 2 \quad y = mx + b \quad y = 2x + 5$$

$$11 = 2(3) + b \quad 9 = 2(2) + 5$$

$$5 = b$$

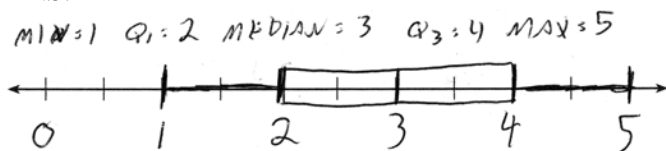
PTS: 2 REF: 011511a1 NAT: A.REI.10 TOP: Graphing Linear Functions

79 ANS: 3 PTS: 2 REF: 061415a1 NAT: F.LE.2

TOP: Modeling Exponential Equations

**Algebra 1 Common Core State Standards 2 Point Regents Exam Questions
Answer Section**

80 ANS:



PTS: 2

REF: 061432a1

NAT: S.ID.1

TOP: Box Plots

81 ANS:

$$\frac{33 + 12}{180} = 25\%$$

PTS: 2

REF: 011526a1

NAT: S.ID.5

TOP: Frequency Histograms, Bar Graphs and Tables

82 ANS:

$$x^2 + 10x + 24 = (x + 4)(x + 6) = (x + 6)(x + 4). \quad 6 \text{ and } 4$$

PTS: 2

REF: 081425a1

NAT: A.SSE.3a

TOP: Solving Quadratics

83 ANS:

g. The maximum of f is 6. For g , the maximum is 11. $x = \frac{-b}{2a} = \frac{-4}{2\left(-\frac{1}{2}\right)} = \frac{-4}{-1} = 4$

$$y = -\frac{1}{2}(4)^2 + 4(4) + 3 = -8 + 16 + 3 = 11$$

PTS: 2

REF: 081429a1

NAT: F.IF.9

TOP: Graphing Quadratic Functions

84 ANS:

$$6. \quad 3x + 9 \leq 5x - 3$$

$$12 \leq 2x$$

$$6 \leq x$$

PTS: 2

REF: 081430a1

NAT: A.REI.3

TOP: Solving Linear Inequalities

85 ANS:

$$185 + 0.03x = 275 + 0.025x$$

$$0.005x = 90$$

$$x = 18000$$

PTS: 2

REF: 081427a1

NAT: A.REI.6

TOP: Solving Linear Systems

86 ANS:

$y = 0.25(2)^x$. I inputted the four integral values from the graph into my graphing calculator and determined the exponential regression equation.

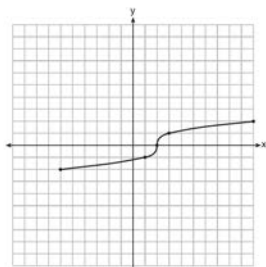
PTS: 2

REF: 011532a1

NAT: F.LE.2

TOP: Modeling Exponential Equations

87 ANS:



PTS: 2

REF: fall1304a1

NAT: F.IF.7b

TOP: Graphing Root Functions

88 ANS:

0.5 represents the rate of decay and 300 represents the initial amount of the compound.

PTS: 2

REF: 061426a1

NAT: F.LE.5

TOP: Modeling Exponential Equations

89 ANS:

$$y = 0.05x - 0.92$$

PTS: 2

REF: fall1307a1

NAT: S.ID.6a

TOP: Regression

90 ANS:

$$15x + 36 = 10x + 48$$

$$5x = 12$$

$$x = 2.4$$

PTS: 2

REF: 011531a1

NAT: A.CED.1

TOP: Modeling Linear Equations

91 ANS:

$(-4, 1)$, because then every element of the domain is not assigned one unique element in the range.

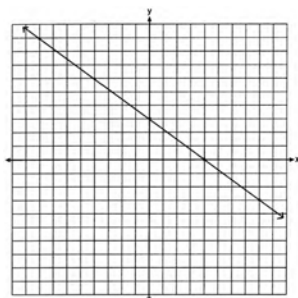
PTS: 2

REF: 011527a1

NAT: F.IF.1

TOP: Defining Functions

92 ANS:



No, because $(3, 2)$ is not on the graph.

PTS: 2

REF: 061429a1

NAT: A.REI.10

TOP: Graphing Linear Functions

93 ANS:

a) $p + d \leq 800$ b) $6(440) + 9d \geq 5000$ Since $440 + 263 \leq 800$, it is possible.

$$6p + 9d \geq 5000 \quad 2640 + 9d \geq 5000$$

$$9d \geq 2360$$

$$d \geq 262.\bar{2}$$

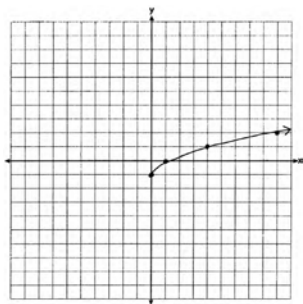
PTS: 2

REF: spr1306a1

NAT: A.CED.3

TOP: Modeling Systems of Linear Inequalities

94 ANS:



PTS: 2

REF: 061425a1

NAT: F.IF.7b

TOP: Graphing Root Functions

95 ANS:

$$x^4 + 6x^2 - 7$$

$$(x^2 + 7)(x^2 - 1)$$

$$(x^2 + 7)(x + 1)(x - 1)$$

PTS: 2

REF: 061431a1

NAT: A.SSE.2

TOP: Factoring Polynomials

96 ANS:

$$(2x^2 + 7x - 10)(x + 5)$$

$$2x^3 + 7x^2 - 10x + 10x^2 + 35x - 50$$

$$2x^3 + 17x^2 + 25x - 50$$

PTS: 2

REF: 081428a1

NAT: A.APR.1

TOP: Multiplication of Polynomials

97 ANS:

$$4x^2 - 12x - 7 = 0$$

$$(4x^2 - 14x) + (2x - 7) = 0$$

$$2x(2x - 7) + (2x - 7) = 0$$

$$(2x + 1)(2x - 7) = 0$$

$$x = -\frac{1}{2}, \frac{7}{2}$$

PTS: 2


REF: 011529a1

NAT: A.REI.4b

TOP: Solving Quadratics

KEY: factoring

98 ANS:



The line is a poor fit because the residuals form a pattern.

PTS: 2

REF: 081431a1

NAT: S.ID.6b

TOP: Correlation Coefficient and Residuals

99 ANS:

$$\left(\frac{6}{2}\right)^2 = 9$$

PTS: 2

REF: 081432a1

NAT: A.REI.4b

TOP: Solving Quadratics

KEY: completing the square

100 ANS:

$$B = 3000(1.042)^t$$

PTS: 2

REF: 081426a1

NAT: F.BF.1a

TOP: Modeling Exponential Equations

101 ANS:

$$\frac{1}{2}x^2 - 4 = 0$$

$$x^2 - 8 = 0$$

$$x^2 = 8$$

$$x = \pm 2\sqrt{2}$$

PTS: 2

REF: fall1306a1

NAT: A.REI.4b

TOP: Solving Quadratics

KEY: taking square roots

102 ANS:

$$2(-1) + a(-1) - 7 > -12 \quad a = 2$$

$$-a - 9 > -12$$

$$-a > -3$$

$$a < 3$$

PTS: 2

REF: 061427a1

NAT: A.REI.3

TOP: Solving Linear Inequalities

103 ANS:

$$12x + 9(2x) + 5(3x) = 15 \cdot 6 \left(\frac{1}{3} \right) = 2 \text{ pounds}$$

$$45x = 15$$

$$x = \frac{1}{3}$$

PTS: 2 REF: spr1305a1 NAT: A.CED.1 TOP: Modeling Linear Equations

104 ANS:

$$8m^2 + 20m - 12 = 0$$

$$4(2m^2 + 5m - 3) = 0$$

$$(2m - 1)(m + 3) = 0$$

$$m = \frac{1}{2}, -3$$

PTS: 2 REF: fall1305a1 NAT: A.SSE.3a TOP: Solving Quadratics

105 ANS:

$$-2x^2 + 6x + 4$$

PTS: 2 REF: 011528a1 NAT: A.APR.1 TOP: Addition and Subtraction of Polynomials
KEY: subtraction

106 ANS:

Correct. The sum of a rational and irrational is irrational.

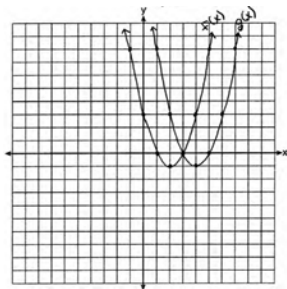
PTS: 2 REF: 011525a1 NAT: N.RN.3 TOP: Classifying Numbers

107 ANS:

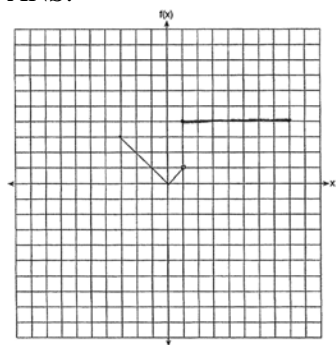
Yes, because every element of the domain is assigned one unique element in the range.

PTS: 2 REF: 061430a1 NAT: F.IF.1 TOP: Defining Functions

108 ANS:

(4, -1). $f(x - 2)$ is a horizontal shift two units to the right.PTS: 2 REF: 061428a1 NAT: F.BF.3
TOP: Transformations with Functions and Relations

109 ANS:



PTS: 2

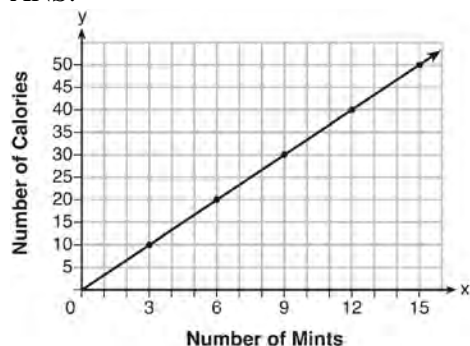
REF: 011530a1

NAT: F.IF.7b

TOP: Graphing Piecewise-Defined Functions

Algebra 1 Common Core State Standards 4 Point Regents Exam Questions Answer Section

110 ANS:



$$C(x) = \frac{10}{3}x \quad 180 = \frac{10}{3}x$$

$$540 = 10x$$

$$54 = x$$

PTS: 4 REF: fall1308a1 NAT: A.CED.2 TOP: Graphing Linear Functions

111 ANS:

$$8x + 11y \geq 200 \quad 8x + 11(15) \geq 200$$

$$8x + 165 \geq 200$$

$$8x \geq 35$$

$$x \geq 4.375$$

5 hours

PTS: 4 REF: fall1309a1 NAT: A.CED.3 TOP: Modeling Linear Inequalities

112 ANS:

$$y = 836.47(2.05)^x \quad \text{The data appear to grow at an exponential rate. } y = 836.47(2.05)^2 \approx 3515.$$

PTS: 4 REF: fall1313a1 NAT: S.ID.6a TOP: Regression

113 ANS:

$$2.35c + 5.50d = 89.50 \quad \text{Pat's numbers are not possible: } 2.35(8) + 5.50(14) \neq 89.50 \quad 2.35c + 5.50(22 - c) = 89.50$$

$$18.80 + 77.00 \neq 89.50 \quad 2.35c + 121 - 5.50c = 89.50$$

$$95.80 \neq 89.50 \quad -3.15c = -31.50$$

$$c = 10$$

PTS: 4 REF: 061436a1 NAT: A.CED.2 TOP: Modeling Linear Equations

114 ANS:

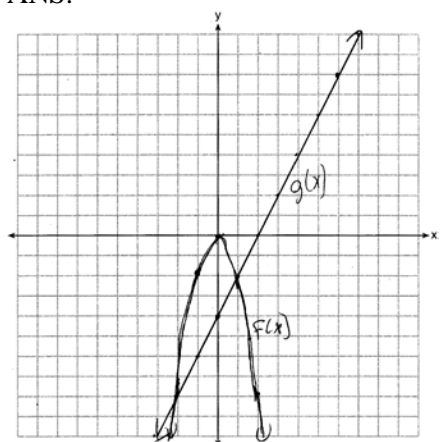
$$A(n) = 175 - 2.75n \quad 0 = 175 - 2.75n \quad \text{After 63 weeks, Caitlin will not have enough money to rent another movie.}$$

$$2.75n = 175$$

$$n = 63.6$$

PTS: 4 REF: 061435a1 NAT: F.BF.1a TOP: Modeling Linear Equations

115 ANS:



$$x = -2, 1$$

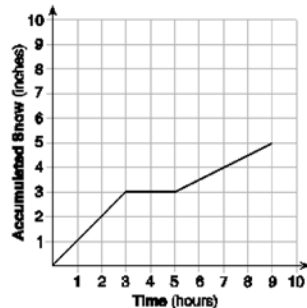
PTS: 4

REF: 081435a1

NAT: A.REI.7

TOP: Quadratic-Linear Systems

116 ANS:



At 6 hours, $3\frac{1}{2}$ inches of snow have fallen.

PTS: 4

REF: spr1307a1

NAT: F.IF.4

TOP: Relating Graphs to Events

117 ANS:

The vertex represents a maximum since $a < 0$. $f(x) = -x^2 + 8x + 9$

$$= -(x^2 - 8x - 9)$$

$$= -(x^2 - 8x + 16) + 9 + 16$$

$$= -(x - 4)^2 + 25$$

PTS: 4

REF: 011536a1

NAT: F.IF.8a

TOP: Graphing Quadratic Functions

118 ANS:

$$m(x) = (3x - 1)(3 - x) + 4x^2 + 19 \quad x^2 + 10x + 16 = 0$$

$$m(x) = 9x - 3x^2 - 3 + x + 4x^2 + 19 \quad (x + 8)(x + 2) = 0$$

$$m(x) = x^2 + 10x + 16 \quad x = -8, -2$$

PTS: 4

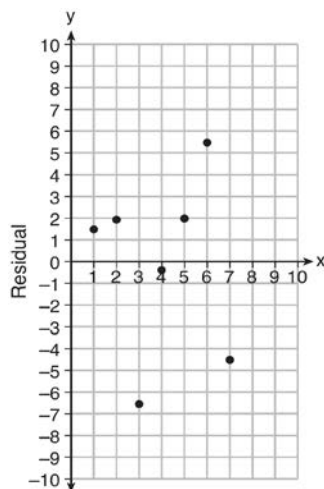
REF: 061433a1

NAT: A.REI.4b

TOP: Solving Quadratics

KEY: factoring

119 ANS:



$$y = 6.32x + 22.43$$

Based on the residual plot, the equation is a good fit for the data because the residual values are scattered without a pattern and are fairly evenly distributed above and below the x -axis.

PTS: 4 REF: fall1314a1 NAT: S.ID.6b TOP: Correlation Coefficient and Residuals

120 ANS:

$r \approx 0.94$. The correlation coefficient suggests that as calories increase, so does sodium.

PTS: 4 REF: 011535a1 NAT: S.ID.8 TOP: Correlation Coefficient and Residuals

121 ANS:

$$2p + 3d = 18.25 \quad 4p + 6d = 36.50 \quad 4p + 2(2.25) = 27.50$$

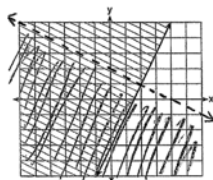
$$4p + 2d = 27.50 \quad 4p + 2d = 27.50 \quad 4p = 23$$

$$4d = 9 \quad p = 5.75$$

$$d = 2.25$$

PTS: 2 REF: 011533a1 NAT: A.CED.2 TOP: Modeling Linear Systems

122 ANS:



$$y \geq 2x - 3.$$

Oscar is wrong. $(2) + 2(1) < 4$ is not true.

PTS: 4 REF: 011534a1 NAT: A.REI.12 TOP: Graphing Systems of Linear Inequalities

123 ANS:

$$w(w + 40) = 6000$$

$$w^2 + 40w - 6000 = 0$$

$$(w + 100)(w - 60) = 0$$

$$w = 60, l = 100$$

PTS: 4 REF: 081436a1 NAT: A.CED.1 TOP: Geometric Applications of Quadratics

124 ANS:

$$A = \frac{1}{2} h(b_1 + b_2) \quad b_1 = \frac{2(60)}{6} - 12 = 20 - 12 = 8$$

$$\frac{2A}{h} = b_1 + b_2$$

$$\frac{2A}{h} - b_2 = b_1$$

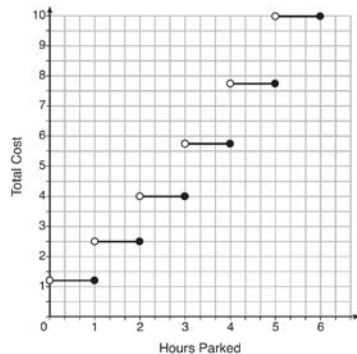
PTS: 4

REF: 081434a1

NAT: A.CED.4

TOP: Transforming Formulas

125 ANS:



The cost for each additional hour increases after the first 2 hours.

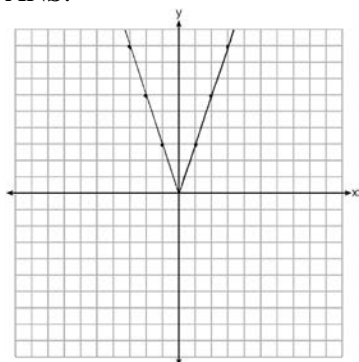
PTS: 4

REF: fall1311a1

NAT: F.IF.7b

TOP: Graphing Step Functions

126 ANS:



2 down. 4 right.

PTS: 4

REF: 081433a1

NAT: F.BF.3

TOP: Transformations with Functions and Relations

127 ANS:

$(2x + 16)(2x + 12) = 396$. The length, $2x + 16$, and the width, $2x + 12$, are multiplied and set equal to the area.

$$(2x + 16)(2x + 12) = 396$$

$$4x^2 + 24x + 32x + 192 = 396$$

$$4x^2 + 56x - 204 = 0$$

$$x^2 + 14x - 51 = 0$$

$$(x + 17)(x - 3) = 0$$

$$x = 3 = \text{width}$$

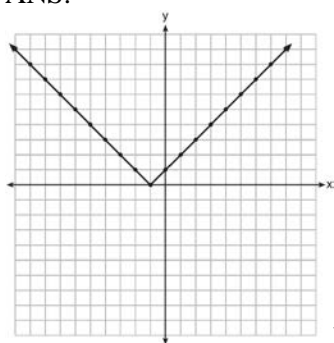
PTS: 4

REF: 061434a1

NAT: A.CED.1

TOP: Geometric Applications of Quadratics

128 ANS:



Range: $y \geq 0$. The function is increasing for $x > -1$.

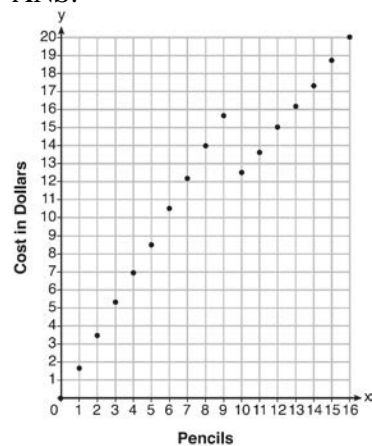
PTS: 4

REF: fall1310a1

NAT: F.IF.7b

TOP: Graphing Absolute Value Functions

129 ANS:



Since according to the graph, 8 pencils cost \$14 and 10 pencils cost \$12.50, the cashier is correct.

PTS: 4

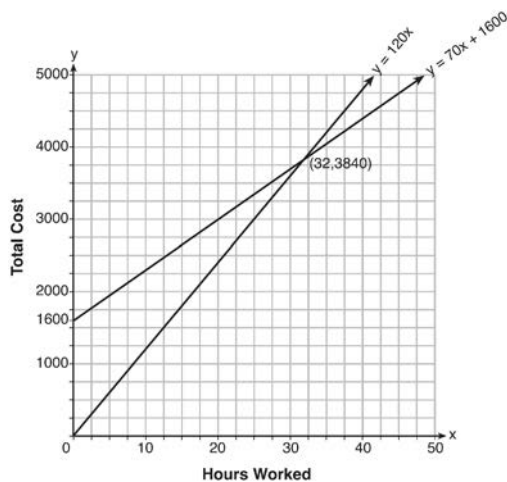
REF: fall1312a1

NAT: F.IF.7b

TOP: Graphing Piecewise-Defined Functions

**Algebra 1 Common Core State Standards 6 Point Regents Exam Questions
Answer Section**

130 ANS:



$y = 120x$ and $y = 70x + 1600$

$120x = 70x + 1600$

$50x = 1600$

$x = 32$

$y = 120(35) = 4200$ Green Thumb is less expensive.

$y = 70(35) + 1600 = 4050$

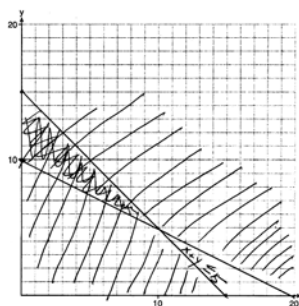
PTS: 6

REF: fall1315a1

NAT: A.REI.6

TOP: Modeling Linear Systems

131 ANS:



$x + y \leq 15$

Zero hours at school and 15 hours at the library.

$4x + 8y \geq 80$

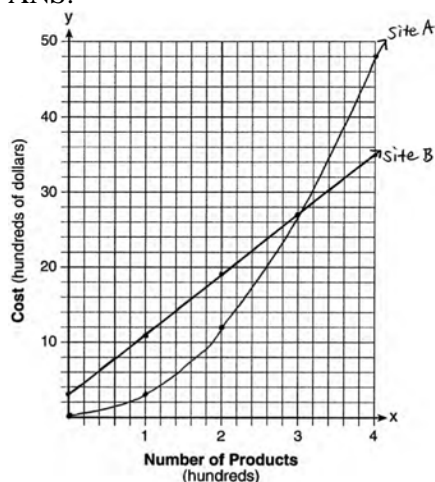
PTS: 6

REF: 081437a1

NAT: A.CED.3

TOP: Modeling Systems of Linear Inequalities

132 ANS:



The graphs of the production costs intersect at $x = 3$. The company should use Site A, because the cost of Site A is lower at $x = 2$.

PTS: 6 REF: 061437a1 NAT: A.REI.7 TOP: Quadratic-Linear Systems

133 ANS:

a) $A(x) = 1.50x + 6$ b) $1.50x + 6 = 2x + 2.50$ c) $A(x) = 1.50(5) + 6 = 13.50$ Carnival B has a lower cost.

$$B(x) = 2x + 2.50 \quad .50x = 3.50 \quad B(x) = 2(5) + 2.50 = 12.50$$

$$x = 7$$

PTS: 6 REF: spr1308a1 NAT: A.REI.6 TOP: Modeling Linear Systems

134 ANS:

$(x - 3)(2x) = 1.25x^2$ Because the original garden is a square, x^2 represents the original area, $x - 3$ represents the side decreased by 3 meters, $2x$ represents the doubled side, and $1.25x^2$ represents the new garden with an area 25% larger. $(x - 3)(2x) = 1.25x^2$ $1.25(8)^2 = 80$

$$2x^2 - 6x = 1.25x^2$$

$$.75x^2 - 6x = 0$$

$$x^2 - 8x = 0$$

$$x(x - 8) = 0$$

$$x = 8$$

PTS: 6 REF: 011537a1 NAT: A.CED.1 TOP: Geometric Applications of Quadratics